

<p>1)</p> <table border="1" style="margin-left: 20px; border-collapse: collapse; text-align: center;"> <thead> <tr style="background-color: #ffffcc;"><th>H</th><th>T</th><th>O</th></tr> </thead> <tbody> <tr><td>4</td><td>5</td><td>5</td></tr> <tr><td> </td><td> </td><td> </td></tr> <tr><td colspan="3" style="border-top: 1px solid black;"> </td></tr> <tr><td> </td><td> </td><td> </td></tr> </tbody> </table> <p style="margin-left: 10px;">+</p>	H	T	O	4	5	5										<p>2)</p> <table border="1" style="margin-left: 20px; border-collapse: collapse; text-align: center;"> <thead> <tr style="background-color: #ffffcc;"><th>H</th><th>T</th><th>O</th></tr> </thead> <tbody> <tr><td>2</td><td>4</td><td>6</td></tr> <tr><td> </td><td> </td><td> </td></tr> <tr><td colspan="3" style="border-top: 1px solid black;"> </td></tr> <tr><td> </td><td> </td><td> </td></tr> </tbody> </table> <p style="margin-left: 10px;">+</p>	H	T	O	2	4	6										<p>3)</p> <table border="1" style="margin-left: 20px; border-collapse: collapse; text-align: center;"> <thead> <tr style="background-color: #ffffcc;"><th>H</th><th>T</th><th>O</th></tr> </thead> <tbody> <tr><td>3</td><td>8</td><td>9</td></tr> <tr><td> </td><td> </td><td> </td></tr> <tr><td colspan="3" style="border-top: 1px solid black;"> </td></tr> <tr><td> </td><td> </td><td> </td></tr> </tbody> </table> <p style="margin-left: 10px;">+</p>	H	T	O	3	8	9										<p>4)</p> <table border="1" style="margin-left: 20px; border-collapse: collapse; text-align: center;"> <thead> <tr style="background-color: #ffffcc;"><th>H</th><th>T</th><th>O</th></tr> </thead> <tbody> <tr><td>3</td><td>8</td><td>7</td></tr> <tr><td> </td><td> </td><td> </td></tr> <tr><td colspan="3" style="border-top: 1px solid black;"> </td></tr> <tr><td> </td><td> </td><td> </td></tr> </tbody> </table> <p style="margin-left: 10px;">+</p>	H	T	O	3	8	7																					
H	T	O																																																																									
4	5	5																																																																									
H	T	O																																																																									
2	4	6																																																																									
H	T	O																																																																									
3	8	9																																																																									
H	T	O																																																																									
3	8	7																																																																									
<p>5)</p> <table border="1" style="margin-left: 20px; border-collapse: collapse; text-align: center;"> <thead> <tr style="background-color: #ffffcc;"><th>H</th><th>T</th><th>O</th></tr> </thead> <tbody> <tr><td> </td><td> </td><td> </td></tr> <tr><td> </td><td> </td><td> </td></tr> <tr><td> </td><td> </td><td> </td></tr> <tr><td colspan="3" style="border-top: 1px solid black;"> </td></tr> <tr><td> </td><td> </td><td> </td></tr> </tbody> </table> <p style="margin-left: 10px;">+</p>	H	T	O																<p>6)</p> <table border="1" style="margin-left: 20px; border-collapse: collapse; text-align: center;"> <thead> <tr style="background-color: #ffffcc;"><th>H</th><th>T</th><th>O</th></tr> </thead> <tbody> <tr><td> </td><td> </td><td> </td></tr> <tr><td> </td><td> </td><td> </td></tr> <tr><td> </td><td> </td><td> </td></tr> <tr><td colspan="3" style="border-top: 1px solid black;"> </td></tr> <tr><td> </td><td> </td><td> </td></tr> </tbody> </table> <p style="margin-left: 10px;">+</p>	H	T	O																<p>7)</p> <table border="1" style="margin-left: 20px; border-collapse: collapse; text-align: center;"> <thead> <tr style="background-color: #ffffcc;"><th>H</th><th>T</th><th>O</th></tr> </thead> <tbody> <tr><td> </td><td> </td><td> </td></tr> <tr><td> </td><td> </td><td> </td></tr> <tr><td> </td><td> </td><td> </td></tr> <tr><td colspan="3" style="border-top: 1px solid black;"> </td></tr> <tr><td> </td><td> </td><td> </td></tr> </tbody> </table> <p style="margin-left: 10px;">+</p>	H	T	O																<p>8)</p> <table border="1" style="margin-left: 20px; border-collapse: collapse; text-align: center;"> <thead> <tr style="background-color: #ffffcc;"><th>H</th><th>T</th><th>O</th></tr> </thead> <tbody> <tr><td> </td><td> </td><td> </td></tr> <tr><td> </td><td> </td><td> </td></tr> <tr><td> </td><td> </td><td> </td></tr> <tr><td colspan="3" style="border-top: 1px solid black;"> </td></tr> <tr><td> </td><td> </td><td> </td></tr> </tbody> </table> <p style="margin-left: 10px;">+</p>	H	T	O															
H	T	O																																																																									
H	T	O																																																																									
H	T	O																																																																									
H	T	O																																																																									
<p>9)</p> <table border="1" style="margin-left: 20px; border-collapse: collapse; text-align: center;"> <thead> <tr style="background-color: #ffffcc;"><th>H</th><th>T</th><th>O</th></tr> </thead> <tbody> <tr><td> </td><td> </td><td> </td></tr> <tr><td> </td><td> </td><td> </td></tr> <tr><td> </td><td> </td><td> </td></tr> <tr><td colspan="3" style="border-top: 1px solid black;"> </td></tr> <tr><td> </td><td> </td><td> </td></tr> </tbody> </table> <p style="margin-left: 10px;">+</p>	H	T	O																<p>10)</p> <table border="1" style="margin-left: 20px; border-collapse: collapse; text-align: center;"> <thead> <tr style="background-color: #ffffcc;"><th>H</th><th>T</th><th>O</th></tr> </thead> <tbody> <tr><td> </td><td> </td><td> </td></tr> <tr><td> </td><td> </td><td> </td></tr> <tr><td> </td><td> </td><td> </td></tr> <tr><td colspan="3" style="border-top: 1px solid black;"> </td></tr> <tr><td> </td><td> </td><td> </td></tr> </tbody> </table> <p style="margin-left: 10px;">+</p>	H	T	O																<p>11) A road trip from Mackay to Brisbane is made up of 3 legs; Mackay to Rockhampton 336km, Rockhampton to Biggenden 333km and Biggenden to Brisbane 287km. How far would we travel over the 3 days?</p>																																					
H	T	O																																																																									
H	T	O																																																																									
<p>12) A factory has three orders for 456, 82 and 275 widgets. How many do they need to make up in total?</p> <p style="margin-top: 20px;">They make up 350 before lunch break, are they half way yet?</p>		<p>13) A hall has a maximum seating capacity of 850. The organisers have 3 school groups enquiring for a particular show, each with numbers of 258, 437 and 150. How many in total want to come?</p> <p style="margin-top: 20px;">Can the hall take all three bookings?</p>																																																																									

<p>1)</p> <table border="1" style="width: 100%; border-collapse: collapse; text-align: center;"> <thead> <tr style="background-color: #e0f0ff;"> <th style="width: 33%;">T</th> <th style="width: 33%;">O</th> <th style="width: 33%;">Tth</th> </tr> </thead> <tbody> <tr> <td>2</td> <td>7.</td> <td>6</td> </tr> <tr> <td>+</td> <td></td> <td></td> </tr> <tr> <td colspan="3" style="border-top: 1px solid black;"></td> </tr> <tr> <td></td> <td></td> <td></td> </tr> </tbody> </table>	T	O	Tth	2	7.	6	+									<p>2)</p> <table border="1" style="width: 100%; border-collapse: collapse; text-align: center;"> <thead> <tr style="background-color: #e0f0ff;"> <th style="width: 33%;">T</th> <th style="width: 33%;">O</th> <th style="width: 33%;">Tth</th> </tr> </thead> <tbody> <tr> <td>5</td> <td>3.</td> <td>2</td> </tr> <tr> <td>+</td> <td></td> <td></td> </tr> <tr> <td colspan="3" style="border-top: 1px solid black;"></td> </tr> <tr> <td></td> <td></td> <td></td> </tr> </tbody> </table>	T	O	Tth	5	3.	2	+									<p>3)</p> <table border="1" style="width: 100%; border-collapse: collapse; text-align: center;"> <thead> <tr style="background-color: #e0f0ff;"> <th style="width: 33%;">T</th> <th style="width: 33%;">O</th> <th style="width: 33%;">Tth</th> </tr> </thead> <tbody> <tr> <td>8</td> <td>8.</td> <td>9</td> </tr> <tr> <td>+</td> <td></td> <td></td> </tr> <tr> <td colspan="3" style="border-top: 1px solid black;"></td> </tr> <tr> <td></td> <td></td> <td></td> </tr> </tbody> </table>	T	O	Tth	8	8.	9	+									<p>4)</p> <table border="1" style="width: 100%; border-collapse: collapse; text-align: center;"> <thead> <tr style="background-color: #e0f0ff;"> <th style="width: 33%;">T</th> <th style="width: 33%;">O</th> <th style="width: 33%;">Tth</th> </tr> </thead> <tbody> <tr> <td>2</td> <td>6.</td> <td>9</td> </tr> <tr> <td>+</td> <td></td> <td></td> </tr> <tr> <td colspan="3" style="border-top: 1px solid black;"></td> </tr> <tr> <td></td> <td></td> <td></td> </tr> </tbody> </table>	T	O	Tth	2	6.	9	+								
T	O	Tth																																																													
2	7.	6																																																													
+																																																															
T	O	Tth																																																													
5	3.	2																																																													
+																																																															
T	O	Tth																																																													
8	8.	9																																																													
+																																																															
T	O	Tth																																																													
2	6.	9																																																													
+																																																															
<p>5)</p> <table border="1" style="width: 100%; border-collapse: collapse; text-align: center;"> <thead> <tr style="background-color: #e0f0ff;"> <th style="width: 33%;">T</th> <th style="width: 33%;">O</th> <th style="width: 33%;">Tth</th> </tr> </thead> <tbody> <tr> <td>2</td> <td>7.</td> <td>8</td> </tr> <tr> <td>+</td> <td></td> <td></td> </tr> <tr> <td colspan="3" style="border-top: 1px solid black;"></td> </tr> <tr> <td></td> <td></td> <td></td> </tr> </tbody> </table>	T	O	Tth	2	7.	8	+									<p>6)</p> <table border="1" style="width: 100%; border-collapse: collapse; text-align: center;"> <thead> <tr style="background-color: #e0f0ff;"> <th style="width: 33%;">T</th> <th style="width: 33%;">O</th> <th style="width: 33%;">Tth</th> </tr> </thead> <tbody> <tr> <td>3</td> <td>8.</td> <td>9</td> </tr> <tr> <td>+</td> <td></td> <td></td> </tr> <tr> <td colspan="3" style="border-top: 1px solid black;"></td> </tr> <tr> <td></td> <td></td> <td></td> </tr> </tbody> </table>	T	O	Tth	3	8.	9	+									<p>7)</p> <table border="1" style="width: 100%; border-collapse: collapse; text-align: center;"> <thead> <tr style="background-color: #e0f0ff;"> <th style="width: 33%;">T</th> <th style="width: 33%;">O</th> <th style="width: 33%;">Tth</th> </tr> </thead> <tbody> <tr> <td></td> <td></td> <td></td> </tr> <tr> <td>+</td> <td></td> <td></td> </tr> <tr> <td colspan="3" style="border-top: 1px solid black;"></td> </tr> <tr> <td></td> <td></td> <td></td> </tr> </tbody> </table>	T	O	Tth				+									<p>8)</p> <table border="1" style="width: 100%; border-collapse: collapse; text-align: center;"> <thead> <tr style="background-color: #e0f0ff;"> <th style="width: 33%;">T</th> <th style="width: 33%;">O</th> <th style="width: 33%;">Tth</th> </tr> </thead> <tbody> <tr> <td></td> <td></td> <td></td> </tr> <tr> <td>+</td> <td></td> <td></td> </tr> <tr> <td colspan="3" style="border-top: 1px solid black;"></td> </tr> <tr> <td></td> <td></td> <td></td> </tr> </tbody> </table>	T	O	Tth				+								
T	O	Tth																																																													
2	7.	8																																																													
+																																																															
T	O	Tth																																																													
3	8.	9																																																													
+																																																															
T	O	Tth																																																													
+																																																															
T	O	Tth																																																													
+																																																															
<p>9)</p> <table border="1" style="width: 100%; border-collapse: collapse; text-align: center;"> <thead> <tr style="background-color: #e0f0ff;"> <th style="width: 33%;">T</th> <th style="width: 33%;">O</th> <th style="width: 33%;">Tth</th> </tr> </thead> <tbody> <tr> <td></td> <td></td> <td></td> </tr> <tr> <td>+</td> <td></td> <td></td> </tr> <tr> <td colspan="3" style="border-top: 1px solid black;"></td> </tr> <tr> <td></td> <td></td> <td></td> </tr> </tbody> </table>	T	O	Tth				+									<p>10)</p> <table border="1" style="width: 100%; border-collapse: collapse; text-align: center;"> <thead> <tr style="background-color: #e0f0ff;"> <th style="width: 33%;">T</th> <th style="width: 33%;">O</th> <th style="width: 33%;">Tth</th> </tr> </thead> <tbody> <tr> <td></td> <td></td> <td></td> </tr> <tr> <td>+</td> <td></td> <td></td> </tr> <tr> <td colspan="3" style="border-top: 1px solid black;"></td> </tr> <tr> <td></td> <td></td> <td></td> </tr> </tbody> </table>	T	O	Tth				+									<p>11)</p> <table border="1" style="width: 100%; border-collapse: collapse; text-align: center;"> <thead> <tr style="background-color: #e0f0ff;"> <th style="width: 33%;">T</th> <th style="width: 33%;">O</th> <th style="width: 33%;">Tth</th> </tr> </thead> <tbody> <tr> <td></td> <td></td> <td></td> </tr> <tr> <td>+</td> <td></td> <td></td> </tr> <tr> <td colspan="3" style="border-top: 1px solid black;"></td> </tr> <tr> <td></td> <td></td> <td></td> </tr> </tbody> </table>	T	O	Tth				+									<p>12)</p> <table border="1" style="width: 100%; border-collapse: collapse; text-align: center;"> <thead> <tr style="background-color: #e0f0ff;"> <th style="width: 33%;">T</th> <th style="width: 33%;">O</th> <th style="width: 33%;">Tth</th> </tr> </thead> <tbody> <tr> <td></td> <td></td> <td></td> </tr> <tr> <td>+</td> <td></td> <td></td> </tr> <tr> <td colspan="3" style="border-top: 1px solid black;"></td> </tr> <tr> <td></td> <td></td> <td></td> </tr> </tbody> </table>	T	O	Tth				+								
T	O	Tth																																																													
+																																																															
T	O	Tth																																																													
+																																																															
T	O	Tth																																																													
+																																																															
T	O	Tth																																																													
+																																																															




13) Laying edging around some garden beds requires 3 different strips of 15.5m, 27.8m and 9.8m. What length of edging needs to be ordered?

14) Sophie walked 22.6km on day one, then 18.8km the next and 12km the next. How far did she walk in total?

<p>1)</p> <table border="1" style="width: 100%; border-collapse: collapse; text-align: center;"> <thead> <tr style="background-color: #f0f0f0;"> <th style="width: 33.33%;"></th> <th style="width: 33.33%;">O</th> <th style="width: 33.33%;">Tth</th> <th style="width: 33.33%;">Hth</th> </tr> </thead> <tbody> <tr> <td style="font-size: 2em;">+</td> <td>5.</td> <td>6</td> <td>9</td> </tr> <tr> <td></td> <td> </td> <td> </td> <td> </td> </tr> <tr style="border-top: 2px solid black;"> <td></td> <td> </td> <td> </td> <td> </td> </tr> </tbody> </table>		O	Tth	Hth	+	5.	6	9									<p>2)</p> <table border="1" style="width: 100%; border-collapse: collapse; text-align: center;"> <thead> <tr style="background-color: #f0f0f0;"> <th style="width: 33.33%;"></th> <th style="width: 33.33%;">O</th> <th style="width: 33.33%;">Tth</th> <th style="width: 33.33%;">Hth</th> </tr> </thead> <tbody> <tr> <td style="font-size: 2em;">+</td> <td>4.</td> <td>3</td> <td>8</td> </tr> <tr> <td></td> <td> </td> <td> </td> <td> </td> </tr> <tr style="border-top: 2px solid black;"> <td></td> <td> </td> <td> </td> <td> </td> </tr> </tbody> </table>		O	Tth	Hth	+	4.	3	8									<p>3)</p> <table border="1" style="width: 100%; border-collapse: collapse; text-align: center;"> <thead> <tr style="background-color: #f0f0f0;"> <th style="width: 33.33%;"></th> <th style="width: 33.33%;">O</th> <th style="width: 33.33%;">Tth</th> <th style="width: 33.33%;">Hth</th> </tr> </thead> <tbody> <tr> <td style="font-size: 2em;">+</td> <td>2.</td> <td>8</td> <td>7</td> </tr> <tr> <td></td> <td> </td> <td> </td> <td> </td> </tr> <tr style="border-top: 2px solid black;"> <td></td> <td> </td> <td> </td> <td> </td> </tr> </tbody> </table>		O	Tth	Hth	+	2.	8	7									<p>4)</p> <table border="1" style="width: 100%; border-collapse: collapse; text-align: center;"> <thead> <tr style="background-color: #f0f0f0;"> <th style="width: 33.33%;"></th> <th style="width: 33.33%;">O</th> <th style="width: 33.33%;">Tth</th> <th style="width: 33.33%;">Hth</th> </tr> </thead> <tbody> <tr> <td style="font-size: 2em;">+</td> <td>3.</td> <td>7</td> <td>6</td> </tr> <tr> <td></td> <td> </td> <td> </td> <td> </td> </tr> <tr style="border-top: 2px solid black;"> <td></td> <td> </td> <td> </td> <td> </td> </tr> </tbody> </table>		O	Tth	Hth	+	3.	7	6																								
	O	Tth	Hth																																																																																
+	5.	6	9																																																																																
	O	Tth	Hth																																																																																
+	4.	3	8																																																																																
	O	Tth	Hth																																																																																
+	2.	8	7																																																																																
	O	Tth	Hth																																																																																
+	3.	7	6																																																																																
<p>5)</p> <table border="1" style="width: 100%; border-collapse: collapse; text-align: center;"> <thead> <tr style="background-color: #f0f0f0;"> <th style="width: 25%;"></th> <th style="width: 25%;">T</th> <th style="width: 25%;">O</th> <th style="width: 25%;">Tth</th> <th style="width: 25%;">Hth</th> </tr> </thead> <tbody> <tr> <td style="font-size: 2em;">+</td> <td>3</td> <td>6.</td> <td>7</td> <td> </td> </tr> <tr> <td></td> <td> </td> <td> </td> <td> </td> <td> </td> </tr> <tr style="border-top: 2px solid black;"> <td></td> <td> </td> <td> </td> <td> </td> <td> </td> </tr> </tbody> </table>		T	O	Tth	Hth	+	3	6.	7												<p>6)</p> <table border="1" style="width: 100%; border-collapse: collapse; text-align: center;"> <thead> <tr style="background-color: #f0f0f0;"> <th style="width: 25%;"></th> <th style="width: 25%;">T</th> <th style="width: 25%;">O</th> <th style="width: 25%;">Tth</th> <th style="width: 25%;">Hth</th> </tr> </thead> <tbody> <tr> <td style="font-size: 2em;">+</td> <td> </td> <td> </td> <td>2.</td> <td>7 6</td> </tr> <tr> <td></td> <td> </td> <td> </td> <td> </td> <td> </td> </tr> <tr style="border-top: 2px solid black;"> <td></td> <td> </td> <td> </td> <td> </td> <td> </td> </tr> </tbody> </table>		T	O	Tth	Hth	+			2.	7 6											<p>7)</p> <table border="1" style="width: 100%; border-collapse: collapse; text-align: center;"> <thead> <tr style="background-color: #f0f0f0;"> <th style="width: 25%;"></th> <th style="width: 25%;">T</th> <th style="width: 25%;">O</th> <th style="width: 25%;">Tth</th> <th style="width: 25%;">Hth</th> </tr> </thead> <tbody> <tr> <td style="font-size: 2em;">+</td> <td> </td> <td> </td> <td>6.</td> <td>8</td> </tr> <tr> <td></td> <td> </td> <td> </td> <td> </td> <td> </td> </tr> <tr style="border-top: 2px solid black;"> <td></td> <td> </td> <td> </td> <td> </td> <td> </td> </tr> </tbody> </table>		T	O	Tth	Hth	+			6.	8											<p>8)</p> <table border="1" style="width: 100%; border-collapse: collapse; text-align: center;"> <thead> <tr style="background-color: #f0f0f0;"> <th style="width: 25%;"></th> <th style="width: 25%;">T</th> <th style="width: 25%;">O</th> <th style="width: 25%;">Tth</th> <th style="width: 25%;">Hth</th> </tr> </thead> <tbody> <tr> <td style="font-size: 2em;">+</td> <td>2</td> <td>4.</td> <td>0</td> <td>3</td> </tr> <tr> <td></td> <td> </td> <td> </td> <td> </td> <td> </td> </tr> <tr style="border-top: 2px solid black;"> <td></td> <td> </td> <td> </td> <td> </td> <td> </td> </tr> </tbody> </table>		T	O	Tth	Hth	+	2	4.	0	3										
	T	O	Tth	Hth																																																																															
+	3	6.	7																																																																																
	T	O	Tth	Hth																																																																															
+			2.	7 6																																																																															
	T	O	Tth	Hth																																																																															
+			6.	8																																																																															
	T	O	Tth	Hth																																																																															
+	2	4.	0	3																																																																															
<p>9) A builder has a 5.2m strip of skirting. He needs to fit 2 pieces at 2.75m and 2.51m. How much skirting does he need in total? Does he have enough or skirting or does he need some more?</p>		<p>10) A gardener is laying garden edging. What is the total length needed for two runs of 14.8m and 25.85m?</p>																																																																																	
<p>12) An electrician needs some electrical cable. In the back of his truck he has 25.6 m left on the spool. Will it be enough to lay cable to lengths of 16.89 m and 8.45 m?</p>		<p>13) Curtaining fabric required for 2 windows is 5.25m and 7.1m. What is the total length required?</p>																																																																																	

Use this space with the PowerPoint questions:

<p>1)</p> <table border="1"> <tr><th>O</th><th>Tth</th><th>Hth</th></tr> <tr><td>2.</td><td>7</td><td>9</td></tr> <tr><td></td><td></td><td></td></tr> <tr><td></td><td></td><td></td></tr> <tr><td></td><td></td><td></td></tr> <tr><td></td><td></td><td></td></tr> </table>	O	Tth	Hth	2.	7	9													<p>2)</p> <table border="1"> <tr><th>O</th><th>Tth</th><th>Hth</th></tr> <tr><td>2.</td><td>8</td><td>6</td></tr> <tr><td></td><td></td><td></td></tr> <tr><td></td><td></td><td></td></tr> <tr><td></td><td></td><td></td></tr> <tr><td></td><td></td><td></td></tr> </table>	O	Tth	Hth	2.	8	6													<p>3)</p> <table border="1"> <tr><th>O</th><th>Tth</th><th>Hth</th></tr> <tr><td></td><td></td><td></td></tr> <tr><td></td><td></td><td></td></tr> <tr><td></td><td></td><td></td></tr> <tr><td></td><td></td><td></td></tr> <tr><td></td><td></td><td></td></tr> </table>	O	Tth	Hth																<p>4)</p> <table border="1"> <tr><th>H</th><th>T</th><th>O</th><th>Tth</th><th>Hth</th></tr> <tr><td></td><td></td><td></td><td></td><td></td></tr> <tr><td></td><td></td><td></td><td></td><td></td></tr> <tr><td></td><td></td><td></td><td></td><td></td></tr> <tr><td></td><td></td><td></td><td></td><td></td></tr> <tr><td></td><td></td><td></td><td></td><td></td></tr> </table>	H	T	O	Tth	Hth																																																													
O	Tth	Hth																																																																																																																									
2.	7	9																																																																																																																									
O	Tth	Hth																																																																																																																									
2.	8	6																																																																																																																									
O	Tth	Hth																																																																																																																									
H	T	O	Tth	Hth																																																																																																																							
<p>5)</p> <table border="1"> <tr><th>H</th><th>T</th><th>O</th><th>Tth</th><th>Hth</th></tr> <tr><td></td><td></td><td></td><td></td><td></td></tr> <tr><td></td><td></td><td></td><td></td><td></td></tr> <tr><td></td><td></td><td></td><td></td><td></td></tr> <tr><td></td><td></td><td></td><td></td><td></td></tr> <tr><td></td><td></td><td></td><td></td><td></td></tr> </table>	H	T	O	Tth	Hth																										<p>6)</p> <table border="1"> <tr><th>H</th><th>T</th><th>O</th><th>Tth</th><th>Hth</th></tr> <tr><td></td><td></td><td></td><td></td><td></td></tr> <tr><td></td><td></td><td></td><td></td><td></td></tr> <tr><td></td><td></td><td></td><td></td><td></td></tr> <tr><td></td><td></td><td></td><td></td><td></td></tr> <tr><td></td><td></td><td></td><td></td><td></td></tr> </table>	H	T	O	Tth	Hth																										<p>7)</p> <table border="1"> <tr><th>H</th><th>T</th><th>O</th><th>Tth</th><th>Hth</th></tr> <tr><td></td><td></td><td></td><td></td><td></td></tr> <tr><td></td><td></td><td></td><td></td><td></td></tr> <tr><td></td><td></td><td></td><td></td><td></td></tr> <tr><td></td><td></td><td></td><td></td><td></td></tr> <tr><td></td><td></td><td></td><td></td><td></td></tr> </table>	H	T	O	Tth	Hth																										<p>8)</p> <table border="1"> <tr><th>H</th><th>T</th><th>O</th><th>Tth</th><th>Hth</th></tr> <tr><td></td><td></td><td></td><td></td><td></td></tr> <tr><td></td><td></td><td></td><td></td><td></td></tr> <tr><td></td><td></td><td></td><td></td><td></td></tr> <tr><td></td><td></td><td></td><td></td><td></td></tr> <tr><td></td><td></td><td></td><td></td><td></td></tr> </table>	H	T	O	Tth	Hth																									
H	T	O	Tth	Hth																																																																																																																							
H	T	O	Tth	Hth																																																																																																																							
H	T	O	Tth	Hth																																																																																																																							
H	T	O	Tth	Hth																																																																																																																							

<p>9) Isabella purchased three items marked at \$45, \$36.95 and 15.25. How much was the total?</p>	<p>Working space</p>
<p>Working space</p>	<div style="text-align: center;">  </div> <p>10) Laying pipes, a plumber had 32m of piping. He needed to lay three lengths ; 13.4 m, 6 m and 15.85 m. What length does he require in total? Does he have enough to complete the job?</p>
<p>11) The mens 4x100m world record is 36.84s (Jamaica). The team's individual personal best times are 9.58s (Usain Bolt), 9.78s, 9.88s, and 9.69s. Is that faster or slower than their record team race?</p>	<p>Working space</p> <div style="text-align: center;">  </div>
<p>Working space</p>	<div style="text-align: center;">  </div> <p>12) Jack bought some items marked at \$12, \$32.65 and \$1.35. How much was the total? He had \$50 in his wallet. Does he have enough money for them all?</p>

1)

H	T	O
4	5	5
+	3	7 8
<hr/>		
8	3	3

2)

H	T	O
2	4	6
+	4	5 4
<hr/>		
7	0	0

3)

H	T	O
3	8	9
+	2	5 8
<hr/>		
2	8	7
<hr/>		
9	3	4

4)

H	T	O
3	8	7
+		7 8
<hr/>		
3	0	7
<hr/>		
7	7	2

5)

H	T	O
5	1	8
+		8
<hr/>		
	8	6
<hr/>		
6	1	2

6)

H	T	O
	4	6
+	2	3 8
<hr/>		
	9	6
<hr/>		
3	8	0

7)

H	T	O
7	5	1
+		6
<hr/>		
1	9	2
<hr/>		
9	4	9

8)

H	T	O
4	7	7
+		5 8
<hr/>		
2	6	7
<hr/>		
8	0	2

9)

H	T	O
		5
+		3 7
<hr/>		
8	5	9
<hr/>		
9	0	1

10)

H	T	O
	1	7
+	6	7 9
<hr/>		
	6	2
<hr/>		
7	5	8

11) A road trip from Mackay to Brisbane is made up of 3 legs; Mackay to Rockhampton 336km, Rockhampton to Biggenden 333km and Biggenden to Brisbane 287km. How far would we travel over the 3 days?

956km

12) A factory has three orders for 456, 82 and 275 widgets. How many do they need to make up in total?

813 items

They make up 350 before lunch break, are they half way yet?

no

13) A hall has a maximum seating capacity of 850. The organisers have 3 school groups enquiring for a particular show, each with numbers of 258, 437 and 150. How many in total want to come?

845 seats

Can the hall take all three bookings?

yes

<p>1)</p> <table border="1" style="width: 100%; border-collapse: collapse; text-align: center;"> <thead> <tr><th>T</th><th>O</th><th>Tth</th></tr> </thead> <tbody> <tr><td>2</td><td>7.</td><td>6</td></tr> <tr><td>3</td><td>4.</td><td>7</td></tr> <tr style="border-top: 1px solid black;"><td>6</td><td>2.</td><td>3</td></tr> </tbody> </table>	T	O	Tth	2	7.	6	3	4.	7	6	2.	3	<p>2)</p> <table border="1" style="width: 100%; border-collapse: collapse; text-align: center;"> <thead> <tr><th>T</th><th>O</th><th>Tth</th></tr> </thead> <tbody> <tr><td>5</td><td>3.</td><td>2</td></tr> <tr><td>2</td><td>6.</td><td>8</td></tr> <tr style="border-top: 1px solid black;"><td>8</td><td>0.</td><td>0</td></tr> </tbody> </table>	T	O	Tth	5	3.	2	2	6.	8	8	0.	0	<p>3)</p> <table border="1" style="width: 100%; border-collapse: collapse; text-align: center;"> <thead> <tr><th>T</th><th>O</th><th>Tth</th></tr> </thead> <tbody> <tr><td>8</td><td>8.</td><td>9</td></tr> <tr><td></td><td>0.</td><td>9</td></tr> <tr style="border-top: 1px solid black;"><td>8</td><td>9.</td><td>8</td></tr> </tbody> </table>	T	O	Tth	8	8.	9		0.	9	8	9.	8	<p>4)</p> <table border="1" style="width: 100%; border-collapse: collapse; text-align: center;"> <thead> <tr><th>T</th><th>O</th><th>Tth</th></tr> </thead> <tbody> <tr><td>2</td><td>6.</td><td>9</td></tr> <tr><td>3</td><td>7.</td><td>0</td></tr> <tr style="border-top: 1px solid black;"><td>6</td><td>3.</td><td>9</td></tr> </tbody> </table>	T	O	Tth	2	6.	9	3	7.	0	6	3.	9												
T	O	Tth																																																													
2	7.	6																																																													
3	4.	7																																																													
6	2.	3																																																													
T	O	Tth																																																													
5	3.	2																																																													
2	6.	8																																																													
8	0.	0																																																													
T	O	Tth																																																													
8	8.	9																																																													
	0.	9																																																													
8	9.	8																																																													
T	O	Tth																																																													
2	6.	9																																																													
3	7.	0																																																													
6	3.	9																																																													
<p>5)</p> <table border="1" style="width: 100%; border-collapse: collapse; text-align: center;"> <thead> <tr><th>T</th><th>O</th><th>Tth</th></tr> </thead> <tbody> <tr><td>2</td><td>7.</td><td>8</td></tr> <tr><td>3</td><td>8.</td><td>7</td></tr> <tr><td>2</td><td>7.</td><td>8</td></tr> <tr style="border-top: 1px solid black;"><td>9</td><td>4.</td><td>3</td></tr> </tbody> </table>	T	O	Tth	2	7.	8	3	8.	7	2	7.	8	9	4.	3	<p>6)</p> <table border="1" style="width: 100%; border-collapse: collapse; text-align: center;"> <thead> <tr><th>T</th><th>O</th><th>Tth</th></tr> </thead> <tbody> <tr><td>3</td><td>8.</td><td>9</td></tr> <tr><td></td><td>5.</td><td>0</td></tr> <tr><td>2</td><td>6.</td><td>9</td></tr> <tr style="border-top: 1px solid black;"><td>7</td><td>0.</td><td>8</td></tr> </tbody> </table>	T	O	Tth	3	8.	9		5.	0	2	6.	9	7	0.	8	<p>7)</p> <table border="1" style="width: 100%; border-collapse: collapse; text-align: center;"> <thead> <tr><th>T</th><th>O</th><th>Tth</th></tr> </thead> <tbody> <tr><td>4</td><td>1.</td><td>7</td></tr> <tr><td></td><td>6.</td><td>0</td></tr> <tr><td></td><td>0.</td><td>5</td></tr> <tr style="border-top: 1px solid black;"><td>4</td><td>8.</td><td>2</td></tr> </tbody> </table>	T	O	Tth	4	1.	7		6.	0		0.	5	4	8.	2	<p>8)</p> <table border="1" style="width: 100%; border-collapse: collapse; text-align: center;"> <thead> <tr><th>T</th><th>O</th><th>Tth</th></tr> </thead> <tbody> <tr><td>3</td><td>2.</td><td>0</td></tr> <tr><td>2</td><td>7.</td><td>7</td></tr> <tr><td>3</td><td>0.</td><td>0</td></tr> <tr style="border-top: 1px solid black;"><td>8</td><td>9.</td><td>7</td></tr> </tbody> </table>	T	O	Tth	3	2.	0	2	7.	7	3	0.	0	8	9.	7
T	O	Tth																																																													
2	7.	8																																																													
3	8.	7																																																													
2	7.	8																																																													
9	4.	3																																																													
T	O	Tth																																																													
3	8.	9																																																													
	5.	0																																																													
2	6.	9																																																													
7	0.	8																																																													
T	O	Tth																																																													
4	1.	7																																																													
	6.	0																																																													
	0.	5																																																													
4	8.	2																																																													
T	O	Tth																																																													
3	2.	0																																																													
2	7.	7																																																													
3	0.	0																																																													
8	9.	7																																																													
<p>9)</p> <table border="1" style="width: 100%; border-collapse: collapse; text-align: center;"> <thead> <tr><th>T</th><th>O</th><th>Tth</th></tr> </thead> <tbody> <tr><td></td><td>5.</td><td>8</td></tr> <tr><td>1</td><td>5.</td><td>7</td></tr> <tr><td>1</td><td>2.</td><td>0</td></tr> <tr style="border-top: 1px solid black;"><td>3</td><td>3.</td><td>5</td></tr> </tbody> </table>	T	O	Tth		5.	8	1	5.	7	1	2.	0	3	3.	5	<p>10)</p> <table border="1" style="width: 100%; border-collapse: collapse; text-align: center;"> <thead> <tr><th>T</th><th>O</th><th>Tth</th></tr> </thead> <tbody> <tr><td>3</td><td>6.</td><td>7</td></tr> <tr><td></td><td>3.</td><td>3</td></tr> <tr><td>4</td><td>5.</td><td>0</td></tr> <tr style="border-top: 1px solid black;"><td>8</td><td>5</td><td></td></tr> </tbody> </table>	T	O	Tth	3	6.	7		3.	3	4	5.	0	8	5		<p>11)</p> <table border="1" style="width: 100%; border-collapse: collapse; text-align: center;"> <thead> <tr><th>T</th><th>O</th><th>Tth</th></tr> </thead> <tbody> <tr><td></td><td>7.</td><td>0</td></tr> <tr><td></td><td>4.</td><td>8</td></tr> <tr><td>2</td><td>8.</td><td>2</td></tr> <tr style="border-top: 1px solid black;"><td>4</td><td>0</td><td></td></tr> </tbody> </table>	T	O	Tth		7.	0		4.	8	2	8.	2	4	0		<p>12)</p> <table border="1" style="width: 100%; border-collapse: collapse; text-align: center;"> <thead> <tr><th>T</th><th>O</th><th>Tth</th></tr> </thead> <tbody> <tr><td>4</td><td>2.</td><td>5</td></tr> <tr><td>1</td><td>3.</td><td>7</td></tr> <tr><td>3</td><td>9.</td><td>9</td></tr> <tr style="border-top: 1px solid black;"><td>9</td><td>6.</td><td>1</td></tr> </tbody> </table>	T	O	Tth	4	2.	5	1	3.	7	3	9.	9	9	6.	1
T	O	Tth																																																													
	5.	8																																																													
1	5.	7																																																													
1	2.	0																																																													
3	3.	5																																																													
T	O	Tth																																																													
3	6.	7																																																													
	3.	3																																																													
4	5.	0																																																													
8	5																																																														
T	O	Tth																																																													
	7.	0																																																													
	4.	8																																																													
2	8.	2																																																													
4	0																																																														
T	O	Tth																																																													
4	2.	5																																																													
1	3.	7																																																													
3	9.	9																																																													
9	6.	1																																																													

13) Laying edging around some garden beds requires 3 different strips of 15.5m, 27.8m and 9.8m. What length of edging needs to be ordered?

$$\begin{array}{r}
 15.5 \\
 27.8 \\
 + 9.8 \\
 \hline
 53.1 \text{ m}
 \end{array}$$

14) Sophie walked 22.6km on day one, then 18.8km the next and 12km the next. How far did she walk in total?

$$\begin{array}{r}
 22.6 \\
 18.8 \\
 + 12.0 \\
 \hline
 53.4 \text{ km}
 \end{array}$$

<p>1)</p> <table border="1" style="margin-left: auto; margin-right: auto; border-collapse: collapse; text-align: center;"> <thead> <tr style="background-color: #f0f0f0;"><th>O</th><th>Tth</th><th>Hth</th></tr> </thead> <tbody> <tr><td>5.</td><td>6</td><td>9</td></tr> <tr><td>+</td><td>2.</td><td>8 8</td></tr> <tr style="border-top: 1px solid black;"><td>8.</td><td>5</td><td>7</td></tr> </tbody> </table>	O	Tth	Hth	5.	6	9	+	2.	8 8	8.	5	7	<p>2)</p> <table border="1" style="margin-left: auto; margin-right: auto; border-collapse: collapse; text-align: center;"> <thead> <tr style="background-color: #f0f0f0;"><th>O</th><th>Tth</th><th>Hth</th></tr> </thead> <tbody> <tr><td>4.</td><td>3</td><td>8</td></tr> <tr><td>+</td><td>0.</td><td>8 0</td></tr> <tr style="border-top: 1px solid black;"><td>5.</td><td>1</td><td>8</td></tr> </tbody> </table>	O	Tth	Hth	4.	3	8	+	0.	8 0	5.	1	8	<p>3)</p> <table border="1" style="margin-left: auto; margin-right: auto; border-collapse: collapse; text-align: center;"> <thead> <tr style="background-color: #f0f0f0;"><th>O</th><th>Tth</th><th>Hth</th></tr> </thead> <tbody> <tr><td>2.</td><td>8</td><td>7</td></tr> <tr><td>+</td><td>4.</td><td>0 0</td></tr> <tr style="border-top: 1px solid black;"><td>6.</td><td>8</td><td>7</td></tr> </tbody> </table>	O	Tth	Hth	2.	8	7	+	4.	0 0	6.	8	7	<p>4)</p> <table border="1" style="margin-left: auto; margin-right: auto; border-collapse: collapse; text-align: center;"> <thead> <tr style="background-color: #f0f0f0;"><th>O</th><th>Tth</th><th>Hth</th></tr> </thead> <tbody> <tr><td>3.</td><td>7</td><td>6</td></tr> <tr><td>+</td><td>2.</td><td>2 4</td></tr> <tr style="border-top: 1px solid black;"><td>6.</td><td>0</td><td>0</td></tr> </tbody> </table>	O	Tth	Hth	3.	7	6	+	2.	2 4	6.	0	0																
O	Tth	Hth																																																																	
5.	6	9																																																																	
+	2.	8 8																																																																	
8.	5	7																																																																	
O	Tth	Hth																																																																	
4.	3	8																																																																	
+	0.	8 0																																																																	
5.	1	8																																																																	
O	Tth	Hth																																																																	
2.	8	7																																																																	
+	4.	0 0																																																																	
6.	8	7																																																																	
O	Tth	Hth																																																																	
3.	7	6																																																																	
+	2.	2 4																																																																	
6.	0	0																																																																	
<p>5)</p> <table border="1" style="margin-left: auto; margin-right: auto; border-collapse: collapse; text-align: center;"> <thead> <tr style="background-color: #f0f0f0;"><th>T</th><th>O</th><th>Tth</th><th>Hth</th></tr> </thead> <tbody> <tr><td>3</td><td>6.</td><td>7</td><td></td></tr> <tr><td>+</td><td></td><td>6. 5 7</td><td></td></tr> <tr style="border-top: 1px solid black;"><td>4</td><td>3.</td><td>2 7</td><td></td></tr> </tbody> </table>	T	O	Tth	Hth	3	6.	7		+		6. 5 7		4	3.	2 7		<p>6)</p> <table border="1" style="margin-left: auto; margin-right: auto; border-collapse: collapse; text-align: center;"> <thead> <tr style="background-color: #f0f0f0;"><th>T</th><th>O</th><th>Tth</th><th>Hth</th></tr> </thead> <tbody> <tr><td></td><td>2.</td><td>7 6</td><td></td></tr> <tr><td>+</td><td></td><td>1. 3</td><td></td></tr> <tr style="border-top: 1px solid black;"><td></td><td>4.</td><td>0 6</td><td></td></tr> </tbody> </table>	T	O	Tth	Hth		2.	7 6		+		1. 3			4.	0 6		<p>7)</p> <table border="1" style="margin-left: auto; margin-right: auto; border-collapse: collapse; text-align: center;"> <thead> <tr style="background-color: #f0f0f0;"><th>T</th><th>O</th><th>Tth</th><th>Hth</th></tr> </thead> <tbody> <tr><td></td><td>6.</td><td>8</td><td></td></tr> <tr><td>+</td><td>2</td><td>8. 3 9</td><td></td></tr> <tr style="border-top: 1px solid black;"><td>3</td><td>5.</td><td>1 9</td><td></td></tr> </tbody> </table>	T	O	Tth	Hth		6.	8		+	2	8. 3 9		3	5.	1 9		<p>8)</p> <table border="1" style="margin-left: auto; margin-right: auto; border-collapse: collapse; text-align: center;"> <thead> <tr style="background-color: #f0f0f0;"><th>T</th><th>O</th><th>Tth</th><th>Hth</th></tr> </thead> <tbody> <tr><td>2</td><td>4.</td><td>0 3</td><td></td></tr> <tr><td>+</td><td></td><td>5. 9 7</td><td></td></tr> <tr style="border-top: 1px solid black;"><td>3</td><td>0</td><td></td><td></td></tr> </tbody> </table>	T	O	Tth	Hth	2	4.	0 3		+		5. 9 7		3	0		
T	O	Tth	Hth																																																																
3	6.	7																																																																	
+		6. 5 7																																																																	
4	3.	2 7																																																																	
T	O	Tth	Hth																																																																
	2.	7 6																																																																	
+		1. 3																																																																	
	4.	0 6																																																																	
T	O	Tth	Hth																																																																
	6.	8																																																																	
+	2	8. 3 9																																																																	
3	5.	1 9																																																																	
T	O	Tth	Hth																																																																
2	4.	0 3																																																																	
+		5. 9 7																																																																	
3	0																																																																		
<p>9) A builder has a 5.2m strip of skirting. He needs to fit 2 pieces at 2.75m and 2.51m. How much skirting does he need in total? Does he have enough or skirting or does he need some more?</p> $ \begin{array}{r} 2.75 \\ + 2.58 \\ \hline 5.33 \text{ m} \end{array} $ <p style="color: red;">Not enough. He will need more.</p>		<p>10) A gardener is laying garden edging. What is the total length needed for two runs of 14.8m and 25.85m?</p> $ \begin{array}{r} 14.8 \\ + 25.85 \\ \hline 40.65 \text{ m} \end{array} $																																																																	
<p>12) An electrician needs some electrical cable. In the back of his truck he has 25.6 m left on the spool. Will it be enough to lay cable to lengths of 16.89 m and 8.45 m?</p> $ \begin{array}{r} 16.89 \\ + 8.45 \\ \hline 25.34 \text{ m} \end{array} $ <p style="color: red;">yes</p>		<p>13) Curtaining fabric required for 2 windows is 5.25m and 7.1m. What is the total length required?</p> $ \begin{array}{r} 5.25 \\ + 7.1 \\ \hline 12.35 \text{ m} \end{array} $																																																																	


Use this space with the PowerPoint questions:

<p>1)</p> <table border="1" style="margin-left: auto; margin-right: auto;"> <thead> <tr><th>O</th><th>Tth</th><th>Hth</th></tr> </thead> <tbody> <tr><td>2.</td><td>7</td><td>9</td></tr> <tr><td>3.</td><td>6</td><td>8</td></tr> <tr><td>2.</td><td>8</td><td>9</td></tr> <tr><td colspan="3" style="border-top: 1px solid black;">9.36</td></tr> </tbody> </table>	O	Tth	Hth	2.	7	9	3.	6	8	2.	8	9	9.36			<p>2)</p> <table border="1" style="margin-left: auto; margin-right: auto;"> <thead> <tr><th>O</th><th>Tth</th><th>Hth</th></tr> </thead> <tbody> <tr><td>2.</td><td>8</td><td>6</td></tr> <tr><td>0.</td><td>8</td><td>0</td></tr> <tr><td>4.</td><td>7</td><td>6</td></tr> <tr><td colspan="3" style="border-top: 1px solid black;">8.42</td></tr> </tbody> </table>	O	Tth	Hth	2.	8	6	0.	8	0	4.	7	6	8.42			<p>3)</p> <table border="1" style="margin-left: auto; margin-right: auto;"> <thead> <tr><th>O</th><th>Tth</th><th>Hth</th></tr> </thead> <tbody> <tr><td>5.</td><td></td><td></td></tr> <tr><td>2.</td><td>8</td><td>9</td></tr> <tr><td>0.</td><td>0</td><td>9</td></tr> <tr><td colspan="3" style="border-top: 1px solid black;">7.98</td></tr> </tbody> </table>	O	Tth	Hth	5.			2.	8	9	0.	0	9	7.98			<p>4)</p> <table border="1" style="margin-left: auto; margin-right: auto;"> <thead> <tr><th>H</th><th>T</th><th>O</th><th>Tth</th><th>Hth</th></tr> </thead> <tbody> <tr><td></td><td></td><td>7.</td><td>8</td><td></td></tr> <tr><td></td><td>4</td><td>2.</td><td>8</td><td>8</td></tr> <tr><td></td><td>7</td><td>8.</td><td>6</td><td>2</td></tr> <tr><td colspan="5" style="border-top: 1px solid black;">129.30</td></tr> </tbody> </table>	H	T	O	Tth	Hth			7.	8			4	2.	8	8		7	8.	6	2	129.30																																		
O	Tth	Hth																																																																																																					
2.	7	9																																																																																																					
3.	6	8																																																																																																					
2.	8	9																																																																																																					
9.36																																																																																																							
O	Tth	Hth																																																																																																					
2.	8	6																																																																																																					
0.	8	0																																																																																																					
4.	7	6																																																																																																					
8.42																																																																																																							
O	Tth	Hth																																																																																																					
5.																																																																																																							
2.	8	9																																																																																																					
0.	0	9																																																																																																					
7.98																																																																																																							
H	T	O	Tth	Hth																																																																																																			
		7.	8																																																																																																				
	4	2.	8	8																																																																																																			
	7	8.	6	2																																																																																																			
129.30																																																																																																							
<p>5)</p> <table border="1" style="margin-left: auto; margin-right: auto;"> <thead> <tr><th>H</th><th>T</th><th>O</th><th>Tth</th><th>Hth</th></tr> </thead> <tbody> <tr><td></td><td></td><td>6.</td><td>6</td><td>9</td></tr> <tr><td>3</td><td>2</td><td>2.</td><td>0</td><td>0</td></tr> <tr><td>3</td><td>9</td><td>5.</td><td>7</td><td>0</td></tr> <tr><td colspan="5" style="border-top: 1px solid black;">724.39</td></tr> </tbody> </table>	H	T	O	Tth	Hth			6.	6	9	3	2	2.	0	0	3	9	5.	7	0	724.39					<p>6)</p> <table border="1" style="margin-left: auto; margin-right: auto;"> <thead> <tr><th>H</th><th>T</th><th>O</th><th>Tth</th><th>Hth</th></tr> </thead> <tbody> <tr><td></td><td></td><td>0.</td><td>8</td><td>5</td></tr> <tr><td></td><td></td><td>2.</td><td>7</td><td>8</td></tr> <tr><td>3</td><td>8</td><td>1.</td><td>6</td><td>8</td></tr> <tr><td colspan="5" style="border-top: 1px solid black;">385.31</td></tr> </tbody> </table>	H	T	O	Tth	Hth			0.	8	5			2.	7	8	3	8	1.	6	8	385.31					<p>7)</p> <table border="1" style="margin-left: auto; margin-right: auto;"> <thead> <tr><th>H</th><th>T</th><th>O</th><th>Tth</th><th>Hth</th></tr> </thead> <tbody> <tr><td></td><td>3</td><td>5.</td><td>5</td><td>0</td></tr> <tr><td></td><td></td><td>2.</td><td>6</td><td>8</td></tr> <tr><td>6</td><td>5</td><td>4.</td><td>5</td><td>7</td></tr> <tr><td colspan="5" style="border-top: 1px solid black;">692.75</td></tr> </tbody> </table>	H	T	O	Tth	Hth		3	5.	5	0			2.	6	8	6	5	4.	5	7	692.75					<p>8)</p> <table border="1" style="margin-left: auto; margin-right: auto;"> <thead> <tr><th>H</th><th>T</th><th>O</th><th>Tth</th><th>Hth</th></tr> </thead> <tbody> <tr><td></td><td></td><td>5.</td><td>6</td><td>9</td></tr> <tr><td>7</td><td>2</td><td>5.</td><td>0</td><td>0</td></tr> <tr><td></td><td></td><td>0.</td><td>3</td><td>1</td></tr> <tr><td colspan="5" style="border-top: 1px solid black;">731.00</td></tr> </tbody> </table>	H	T	O	Tth	Hth			5.	6	9	7	2	5.	0	0			0.	3	1	731.00				
H	T	O	Tth	Hth																																																																																																			
		6.	6	9																																																																																																			
3	2	2.	0	0																																																																																																			
3	9	5.	7	0																																																																																																			
724.39																																																																																																							
H	T	O	Tth	Hth																																																																																																			
		0.	8	5																																																																																																			
		2.	7	8																																																																																																			
3	8	1.	6	8																																																																																																			
385.31																																																																																																							
H	T	O	Tth	Hth																																																																																																			
	3	5.	5	0																																																																																																			
		2.	6	8																																																																																																			
6	5	4.	5	7																																																																																																			
692.75																																																																																																							
H	T	O	Tth	Hth																																																																																																			
		5.	6	9																																																																																																			
7	2	5.	0	0																																																																																																			
		0.	3	1																																																																																																			
731.00																																																																																																							

9) Isabella purchased three items marked at \$45, \$36.95 and 15.25. How much was the total?

Working space

13.4
6
+ 15.85
35.25



Working space

45
36.95
+ 15.25
97.20


10) Laying pipes, a plumber had 32m of piping. He needed to lay three lengths ; 13.4m, 6m and 15.85m. What length does he require in total? Does he have enough to complete the job? **no**

11) The mens 4x100m world record is 36.84s (Jamaica). The team's individual personal best times are 9.58s (Usain Bolt), 9.78s, 9.88s, and 9.69s. Is that faster or slower than their record team race?

Slower- Relay legs are faster than standing starts of a 100m sprint

Working space

12
32.65
+ 1.35
46.00



Working space

9.58
9.78
9.88
+ 9.69
38.93s

12) Jack bought some items marked at \$12, \$32.65 and \$1.35. How much was the total? He had \$50 in his wallet. Does he have enough money for them all? **yes**

Hundreds

Tens

Ones

