

<p>1)</p> <table border="1" style="margin-left: 20px; border-collapse: collapse;"> <thead> <tr style="background-color: #d9ead3;"><th style="padding: 5px;">T</th><th style="padding: 5px;">O</th></tr> </thead> <tbody> <tr><td style="padding: 5px;">6</td><td style="padding: 5px;">5</td></tr> <tr><td style="padding: 5px;">+</td><td style="padding: 5px;"></td></tr> <tr><td style="padding: 5px;"></td><td style="padding: 5px;"></td></tr> <tr style="border-top: 2px solid black;"><td style="padding: 5px;"></td><td style="padding: 5px;"></td></tr> </tbody> </table>	T	O	6	5	+						<p>2)</p> <table border="1" style="margin-left: 20px; border-collapse: collapse;"> <thead> <tr style="background-color: #d9ead3;"><th style="padding: 5px;">T</th><th style="padding: 5px;">O</th></tr> </thead> <tbody> <tr><td style="padding: 5px;">3</td><td style="padding: 5px;">9</td></tr> <tr><td style="padding: 5px;">+</td><td style="padding: 5px;"></td></tr> <tr><td style="padding: 5px;"></td><td style="padding: 5px;"></td></tr> <tr style="border-top: 2px solid black;"><td style="padding: 5px;"></td><td style="padding: 5px;"></td></tr> </tbody> </table>	T	O	3	9	+						<p>3)</p> <table border="1" style="margin-left: 20px; border-collapse: collapse;"> <thead> <tr style="background-color: #d9ead3;"><th style="padding: 5px;">T</th><th style="padding: 5px;">O</th></tr> </thead> <tbody> <tr><td style="padding: 5px;">2</td><td style="padding: 5px;">3</td></tr> <tr><td style="padding: 5px;">+</td><td style="padding: 5px;"></td></tr> <tr><td style="padding: 5px;"></td><td style="padding: 5px;"></td></tr> <tr style="border-top: 2px solid black;"><td style="padding: 5px;"></td><td style="padding: 5px;"></td></tr> </tbody> </table>	T	O	2	3	+					
T	O																															
6	5																															
+																																
T	O																															
3	9																															
+																																
T	O																															
2	3																															
+																																
<p>4)</p> <table border="1" style="margin-left: 20px; border-collapse: collapse;"> <thead> <tr style="background-color: #d9ead3;"><th style="padding: 5px;">T</th><th style="padding: 5px;">O</th></tr> </thead> <tbody> <tr><td style="padding: 5px;">2</td><td style="padding: 5px;">7</td></tr> <tr><td style="padding: 5px;">+</td><td style="padding: 5px;"></td></tr> <tr><td style="padding: 5px;"></td><td style="padding: 5px;"></td></tr> <tr style="border-top: 2px solid black;"><td style="padding: 5px;"></td><td style="padding: 5px;"></td></tr> </tbody> </table>	T	O	2	7	+						<p>5)</p> <table border="1" style="margin-left: 20px; border-collapse: collapse;"> <thead> <tr style="background-color: #d9ead3;"><th style="padding: 5px;">T</th><th style="padding: 5px;">O</th></tr> </thead> <tbody> <tr><td style="padding: 5px;"></td><td style="padding: 5px;">6</td></tr> <tr><td style="padding: 5px;">+</td><td style="padding: 5px;"></td></tr> <tr><td style="padding: 5px;"></td><td style="padding: 5px;"></td></tr> <tr style="border-top: 2px solid black;"><td style="padding: 5px;"></td><td style="padding: 5px;"></td></tr> </tbody> </table>	T	O		6	+						<p>6)</p> <table border="1" style="margin-left: 20px; border-collapse: collapse;"> <thead> <tr style="background-color: #d9ead3;"><th style="padding: 5px;">T</th><th style="padding: 5px;">O</th></tr> </thead> <tbody> <tr><td style="padding: 5px;">6</td><td style="padding: 5px;">4</td></tr> <tr><td style="padding: 5px;">+</td><td style="padding: 5px;"></td></tr> <tr><td style="padding: 5px;"></td><td style="padding: 5px;"></td></tr> <tr style="border-top: 2px solid black;"><td style="padding: 5px;"></td><td style="padding: 5px;"></td></tr> </tbody> </table>	T	O	6	4	+					
T	O																															
2	7																															
+																																
T	O																															
	6																															
+																																
T	O																															
6	4																															
+																																
<p>7)</p> <table border="1" style="margin-left: 20px; border-collapse: collapse;"> <thead> <tr style="background-color: #d9ead3;"><th style="padding: 5px;">T</th><th style="padding: 5px;">O</th></tr> </thead> <tbody> <tr><td style="padding: 5px;">3</td><td style="padding: 5px;">4</td></tr> <tr><td style="padding: 5px;">+</td><td style="padding: 5px;"></td></tr> <tr><td style="padding: 5px;"></td><td style="padding: 5px;"></td></tr> <tr style="border-top: 2px solid black;"><td style="padding: 5px;"></td><td style="padding: 5px;"></td></tr> </tbody> </table>	T	O	3	4	+						<p>8)</p> <table border="1" style="margin-left: 20px; border-collapse: collapse;"> <thead> <tr style="background-color: #d9ead3;"><th style="padding: 5px;">T</th><th style="padding: 5px;">O</th></tr> </thead> <tbody> <tr><td style="padding: 5px;">6</td><td style="padding: 5px;">5</td></tr> <tr><td style="padding: 5px;">+</td><td style="padding: 5px;"></td></tr> <tr><td style="padding: 5px;"></td><td style="padding: 5px;"></td></tr> <tr style="border-top: 2px solid black;"><td style="padding: 5px;"></td><td style="padding: 5px;"></td></tr> </tbody> </table>	T	O	6	5	+						<p>9)</p> <table border="1" style="margin-left: 20px; border-collapse: collapse;"> <thead> <tr style="background-color: #d9ead3;"><th style="padding: 5px;">T</th><th style="padding: 5px;">O</th></tr> </thead> <tbody> <tr><td style="padding: 5px;">4</td><td style="padding: 5px;">5</td></tr> <tr><td style="padding: 5px;">+</td><td style="padding: 5px;"></td></tr> <tr><td style="padding: 5px;"></td><td style="padding: 5px;"></td></tr> <tr style="border-top: 2px solid black;"><td style="padding: 5px;"></td><td style="padding: 5px;"></td></tr> </tbody> </table>	T	O	4	5	+					
T	O																															
3	4																															
+																																
T	O																															
6	5																															
+																																
T	O																															
4	5																															
+																																

<p>1)</p> <table border="1" style="width: 100%; border-collapse: collapse; text-align: center;"> <thead> <tr style="background-color: #e0f2f1;"><th>T</th><th>O</th></tr> </thead> <tbody> <tr><td>4</td><td>6</td></tr> <tr><td> </td><td> </td></tr> <tr><td> </td><td> </td></tr> <tr style="border-top: 2px solid black;"><td> </td><td> </td></tr> </tbody> </table> <p style="text-align: left; margin-left: 10px;">+</p>	T	O	4	6							<p>2)</p> <table border="1" style="width: 100%; border-collapse: collapse; text-align: center;"> <thead> <tr style="background-color: #e0f2f1;"><th>T</th><th>O</th></tr> </thead> <tbody> <tr><td>2</td><td>5</td></tr> <tr><td> </td><td> </td></tr> <tr><td> </td><td> </td></tr> <tr style="border-top: 2px solid black;"><td> </td><td> </td></tr> </tbody> </table> <p style="text-align: left; margin-left: 10px;">+</p>	T	O	2	5							<p>3)</p> <table border="1" style="width: 100%; border-collapse: collapse; text-align: center;"> <thead> <tr style="background-color: #e0f2f1;"><th>T</th><th>O</th></tr> </thead> <tbody> <tr><td>4</td><td>6</td></tr> <tr><td> </td><td> </td></tr> <tr><td> </td><td> </td></tr> <tr style="border-top: 2px solid black;"><td> </td><td> </td></tr> </tbody> </table> <p style="text-align: left; margin-left: 10px;">+</p>	T	O	4	6						
T	O																															
4	6																															
T	O																															
2	5																															
T	O																															
4	6																															
<p>4)</p> <table border="1" style="width: 100%; border-collapse: collapse; text-align: center;"> <thead> <tr style="background-color: #e0f2f1;"><th>T</th><th>O</th></tr> </thead> <tbody> <tr><td> </td><td> </td></tr> <tr><td> </td><td> </td></tr> <tr><td> </td><td> </td></tr> <tr style="border-top: 2px solid black;"><td> </td><td> </td></tr> </tbody> </table> <p style="text-align: left; margin-left: 10px;">+</p>	T	O									<p>5)</p> <table border="1" style="width: 100%; border-collapse: collapse; text-align: center;"> <thead> <tr style="background-color: #e0f2f1;"><th>T</th><th>O</th></tr> </thead> <tbody> <tr><td> </td><td> </td></tr> <tr><td> </td><td> </td></tr> <tr><td> </td><td> </td></tr> <tr style="border-top: 2px solid black;"><td> </td><td> </td></tr> </tbody> </table> <p style="text-align: left; margin-left: 10px;">+</p>	T	O									<p>6)</p> <table border="1" style="width: 100%; border-collapse: collapse; text-align: center;"> <thead> <tr style="background-color: #e0f2f1;"><th>T</th><th>O</th></tr> </thead> <tbody> <tr><td> </td><td> </td></tr> <tr><td> </td><td> </td></tr> <tr><td> </td><td> </td></tr> <tr style="border-top: 2px solid black;"><td> </td><td> </td></tr> </tbody> </table> <p style="text-align: left; margin-left: 10px;">+</p>	T	O								
T	O																															
T	O																															
T	O																															
<p>7)</p> <table border="1" style="width: 100%; border-collapse: collapse; text-align: center;"> <thead> <tr style="background-color: #e0f2f1;"><th>T</th><th>O</th></tr> </thead> <tbody> <tr><td> </td><td> </td></tr> <tr><td> </td><td> </td></tr> <tr><td> </td><td> </td></tr> <tr style="border-top: 2px solid black;"><td> </td><td> </td></tr> </tbody> </table>	T	O									<p>8) 3 classes are going on an excursion. There are 24, 27 and 25 students going plus 3 teachers and 6 parents. How many people are going in total?</p>	<table border="1" style="width: 100%; border-collapse: collapse; text-align: center;"> <thead> <tr style="background-color: #e0f2f1;"><th>T</th><th>O</th></tr> </thead> <tbody> <tr><td> </td><td> </td></tr> <tr><td> </td><td> </td></tr> <tr><td> </td><td> </td></tr> <tr><td> </td><td> </td></tr> <tr><td> </td><td> </td></tr> <tr style="border-top: 2px solid black;"><td> </td><td> </td></tr> </tbody> </table>	T	O																		
T	O																															
T	O																															

1)

	H	T	O
	2	7	9
+			
<hr/>			

2)

	H	T	O
	2	6	5
+			
<hr/>			

3)

	H	T	O
	3	0	5
+			
<hr/>			

4)

	H	T	O
	3	4	6
+			
<hr/>			

5)

	H	T	O
	1	0	8
+			
<hr/>			

6)

	H	T	O
	2	7	7
+			
<hr/>			

7)

	H	T	O
		5	9
+			
<hr/>			

8)

	H	T	O
		6	8
+			
<hr/>			




9)

	H	T	O
	3	4	8
+			
<hr/>			

Use this space with the PowerPoint questions:

1)	2)	3)	4)	5)																																																																																										
<table border="1" style="width: 100%; border-collapse: collapse;"> <tr><td>H</td><td>T</td><td>O</td></tr> <tr><td>5</td><td>3</td><td>9</td></tr> <tr><td> </td><td> </td><td> </td></tr> <tr><td> </td><td> </td><td> </td></tr> <tr><td colspan="3" style="border-top: 2px solid black;"> </td></tr> <tr><td> </td><td> </td><td> </td></tr> </table>	H	T	O	5	3	9													<table border="1" style="width: 100%; border-collapse: collapse;"> <tr><td>H</td><td>T</td><td>O</td></tr> <tr><td> </td><td>7</td><td>2</td></tr> <tr><td> </td><td> </td><td> </td></tr> <tr><td> </td><td> </td><td> </td></tr> <tr><td colspan="3" style="border-top: 2px solid black;"> </td></tr> <tr><td> </td><td> </td><td> </td></tr> </table>	H	T	O		7	2													<table border="1" style="width: 100%; border-collapse: collapse;"> <tr><td>H</td><td>T</td><td>O</td></tr> <tr><td>4</td><td>7</td><td>5</td></tr> <tr><td> </td><td> </td><td> </td></tr> <tr><td> </td><td> </td><td> </td></tr> <tr><td colspan="3" style="border-top: 2px solid black;"> </td></tr> <tr><td> </td><td> </td><td> </td></tr> </table>	H	T	O	4	7	5													<table border="1" style="width: 100%; border-collapse: collapse;"> <tr><td>H</td><td>T</td><td>O</td></tr> <tr><td>2</td><td>5</td><td>9</td></tr> <tr><td> </td><td> </td><td> </td></tr> <tr><td> </td><td> </td><td> </td></tr> <tr><td colspan="3" style="border-top: 2px solid black;"> </td></tr> <tr><td> </td><td> </td><td> </td></tr> </table>	H	T	O	2	5	9													<table border="1" style="width: 100%; border-collapse: collapse;"> <tr><td>H</td><td>T</td><td>O</td></tr> <tr><td>3</td><td>4</td><td>8</td></tr> <tr><td> </td><td> </td><td> </td></tr> <tr><td> </td><td> </td><td> </td></tr> <tr><td colspan="3" style="border-top: 2px solid black;"> </td></tr> <tr><td> </td><td> </td><td> </td></tr> </table>	H	T	O	3	4	8												
H	T	O																																																																																												
5	3	9																																																																																												
H	T	O																																																																																												
	7	2																																																																																												
H	T	O																																																																																												
4	7	5																																																																																												
H	T	O																																																																																												
2	5	9																																																																																												
H	T	O																																																																																												
3	4	8																																																																																												

Solve these:

<p>6) A factory worker has stacked 2 pallets of goods; one with 255 items and the other with 74.</p> <p>How many items are completed ?</p>	<table border="1" style="width: 100%; border-collapse: collapse;"> <tr><td> </td><td> </td><td> </td></tr> <tr><td> </td><td> </td><td> </td></tr> <tr><td colspan="3" style="border-top: 2px solid black;"> </td></tr> <tr><td> </td><td> </td><td> </td></tr> </table>												
<table border="1" style="width: 100%; border-collapse: collapse;"> <tr><td> </td><td> </td><td> </td></tr> <tr><td> </td><td> </td><td> </td></tr> <tr><td colspan="3" style="border-top: 2px solid black;"> </td></tr> <tr><td> </td><td> </td><td> </td></tr> </table>													
<p>7) A farmer has 465 sheep in one paddock and 326 in another.</p> <p>How many sheep are there altogether?</p>	<table border="1" style="width: 100%; border-collapse: collapse;"> <tr><td> </td><td> </td><td> </td></tr> <tr><td> </td><td> </td><td> </td></tr> <tr><td colspan="3" style="border-top: 2px solid black;"> </td></tr> <tr><td> </td><td> </td><td> </td></tr> </table>												
<p>8) A function centre has a maximum seating capacity of 900. There are 2 groups requesting bookings, one with 429 and the other with 468.</p> <p>How many people are coming?</p> <p>Will the centre hold that many? _____</p>	<table border="1" style="width: 100%; border-collapse: collapse;"> <tr><td> </td><td> </td><td> </td></tr> <tr><td> </td><td> </td><td> </td></tr> <tr><td colspan="3" style="border-top: 2px solid black;"> </td></tr> <tr><td> </td><td> </td><td> </td></tr> </table>												
<table border="1" style="width: 100%; border-collapse: collapse;"> <tr><td> </td><td> </td><td> </td></tr> <tr><td> </td><td> </td><td> </td></tr> <tr><td colspan="3" style="border-top: 2px solid black;"> </td></tr> <tr><td> </td><td> </td><td> </td></tr> </table>													
<p>9) A caterer has 650 cupcakes prepared. Attending today are 3 groups - 225, 79 and 356.</p> <p>How many people are attending?</p> <p>Are there enough cupcakes for everyone to have one? _____</p>	<table border="1" style="width: 100%; border-collapse: collapse;"> <tr><td> </td><td> </td><td> </td></tr> <tr><td> </td><td> </td><td> </td></tr> <tr><td colspan="3" style="border-top: 2px solid black;"> </td></tr> <tr><td> </td><td> </td><td> </td></tr> </table>												
<p>10) A farmer has cattle ready for market in 3 different yards. She has 175 in one yard, 246 in another and 96 in the third yard.</p> <p>What is the total ready for sale?</p>	<table border="1" style="width: 100%; border-collapse: collapse;"> <tr><td> </td><td> </td><td> </td></tr> <tr><td> </td><td> </td><td> </td></tr> <tr><td colspan="3" style="border-top: 2px solid black;"> </td></tr> <tr><td> </td><td> </td><td> </td></tr> </table>												
	<table border="1" style="width: 100%; border-collapse: collapse;"> <tr><td> </td><td> </td><td> </td></tr> <tr><td> </td><td> </td><td> </td></tr> <tr><td colspan="3" style="border-top: 2px solid black;"> </td></tr> <tr><td> </td><td> </td><td> </td></tr> </table>												

1)

T	O
6	5
+	7
7	2

2)

T	O
3	9
+	2
6	8

3)

T	O
2	3
+	4
7	8

4)

T	O
2	7
+	5
8	3

5)

T	O
	6
+	2
3	6

6)

T	O
6	4
+	2
8	5

7)

T	O
3	4
+	3
7	6

8)

T	O
6	5
+	2
9	6

9)

T	O
4	5
+	
5	8

1)

T	O
4	6
+	
2	8
1	9
<hr/>	
9	3

2)

T	O
2	5
+	
2	7
1	8
<hr/>	
7	0

3)

T	O
4	6
+	
	8
1	9
<hr/>	
7	3

4)

T	O
4	8
+	
3	9
	3
<hr/>	
9	0

5)

T	O
4	5
+	
	8
1	1
<hr/>	
6	4

6)

T	O
4	2
+	
3	4
	7
<hr/>	
8	3

7)

T	O
1	9
4	2
2	9
<hr/>	
9	0

8) 3 classes are going on an excursion.
There are 24, 27 and 25 students going plus 3 teachers and 6 parents. How many people are going in total?

= 85 people

T	O
2	4
2	7
2	5
	3
	6
<hr/>	
8	5

1)

	H	T	O
	2	7	9
+	4	5	6
	7	3	5

2)

	H	T	O
	2	6	5
+	6	7	8
	9	4	3

3)

	H	T	O
	3	0	5
+	4	8	9
	7	9	4

4)

	H	T	O
	3	4	6
+	5	5	4
	9	0	0

5)

	H	T	O
	1	0	8
+	3	9	2
	5	0	0

6)

	H	T	O
	2	7	7
+	7	1	8
	9	9	5

7)

	H	T	O
		5	9
+	5	7	2
	6	3	1

8)

	H	T	O
		6	8
+	4	5	5
	5	2	3



9)

	H	T	O
	3	4	8
+		7	6
	4	2	4

Use this space with the PowerPoint questions:

1)	2)	3)	4)	5)																																																																					
<table border="1" style="margin: auto;"> <tr><th>H</th><th>T</th><th>O</th></tr> <tr><td>5</td><td>3</td><td>9</td></tr> <tr><td>2</td><td>6</td><td>6</td></tr> <tr><td>8</td><td>0</td><td>5</td></tr> </table>	H	T	O	5	3	9	2	6	6	8	0	5	<table border="1" style="margin: auto;"> <tr><th>H</th><th>T</th><th>O</th></tr> <tr><td></td><td>7</td><td>2</td></tr> <tr><td>7</td><td>5</td><td>8</td></tr> <tr><td>8</td><td>3</td><td>0</td></tr> </table>	H	T	O		7	2	7	5	8	8	3	0	<table border="1" style="margin: auto;"> <tr><th>H</th><th>T</th><th>O</th></tr> <tr><td>4</td><td>7</td><td>5</td></tr> <tr><td>1</td><td>7</td><td>9</td></tr> <tr><td>2</td><td>8</td><td>9</td></tr> <tr><td>9</td><td>4</td><td>3</td></tr> </table>	H	T	O	4	7	5	1	7	9	2	8	9	9	4	3	<table border="1" style="margin: auto;"> <tr><th>H</th><th>T</th><th>O</th></tr> <tr><td>2</td><td>5</td><td>9</td></tr> <tr><td></td><td>4</td><td>9</td></tr> <tr><td>3</td><td>7</td><td>9</td></tr> <tr><td>6</td><td>8</td><td>7</td></tr> </table>	H	T	O	2	5	9		4	9	3	7	9	6	8	7	<table border="1" style="margin: auto;"> <tr><th>H</th><th>T</th><th>O</th></tr> <tr><td>3</td><td>4</td><td>8</td></tr> <tr><td></td><td></td><td>7</td></tr> <tr><td></td><td>7</td><td>6</td></tr> <tr><td>4</td><td>3</td><td>1</td></tr> </table>	H	T	O	3	4	8			7		7	6	4	3	1
H	T	O																																																																							
5	3	9																																																																							
2	6	6																																																																							
8	0	5																																																																							
H	T	O																																																																							
	7	2																																																																							
7	5	8																																																																							
8	3	0																																																																							
H	T	O																																																																							
4	7	5																																																																							
1	7	9																																																																							
2	8	9																																																																							
9	4	3																																																																							
H	T	O																																																																							
2	5	9																																																																							
	4	9																																																																							
3	7	9																																																																							
6	8	7																																																																							
H	T	O																																																																							
3	4	8																																																																							
		7																																																																							
	7	6																																																																							
4	3	1																																																																							

Solve these:

<p>6) A factory worker has stacked 2 pallets of goods; one with 255 items and the other with 74.</p> <p>How many items are completed? 329</p>	<table border="1" style="margin: auto;"> <tr><td>2</td><td>5</td><td>5</td></tr> <tr><td></td><td>7</td><td>4</td></tr> <tr><td>3</td><td>2</td><td>9</td></tr> </table>	2	5	5		7	4	3	2	9			
2	5	5											
	7	4											
3	2	9											
<table border="1" style="margin: auto;"> <tr><td>4</td><td>6</td><td>5</td></tr> <tr><td>3</td><td>2</td><td>6</td></tr> <tr><td>7</td><td>9</td><td>1</td></tr> </table>	4	6	5	3	2	6	7	9	1	<div style="text-align: center;">  </div> <p>7) A farmer has 465 sheep in one paddock and 326 in another.</p> <p>How many sheep are there altogether? 791</p>			
4	6	5											
3	2	6											
7	9	1											
<p>8) A function centre has a maximum seating capacity of 900. There are 2 groups requesting bookings, one with 429 and the other with 468.</p> <p>How many people are coming? 897</p> <p>Will the centre hold that many? <u>yes</u></p>	<table border="1" style="margin: auto;"> <tr><td>4</td><td>2</td><td>9</td></tr> <tr><td>4</td><td>6</td><td>8</td></tr> <tr><td>8</td><td>9</td><td>7</td></tr> </table>	4	2	9	4	6	8	8	9	7			
4	2	9											
4	6	8											
8	9	7											
<table border="1" style="margin: auto;"> <tr><td>2</td><td>2</td><td>5</td></tr> <tr><td></td><td>7</td><td>9</td></tr> <tr><td>3</td><td>5</td><td>6</td></tr> <tr><td>6</td><td>6</td><td>0</td></tr> </table>	2	2	5		7	9	3	5	6	6	6	0	<div style="text-align: center;">  </div> <p>9) A caterer has 650 cupcakes prepared. Attending today are 3 groups - 225, 79 and 356.</p> <p>How many people are attending? 660</p> <p>Are there enough cupcakes for everyone to have one? <u>no</u></p>
2	2	5											
	7	9											
3	5	6											
6	6	0											
<p>10) A farmer has cattle ready for market in 3 different yards. She has 175 in one yard, 246 in another and 96 in the third yard.</p> <p>What is the total ready for sale? 517</p>	<table border="1" style="margin: auto;"> <tr><td>2</td><td>4</td><td>6</td></tr> <tr><td>1</td><td>7</td><td>5</td></tr> <tr><td></td><td>9</td><td>6</td></tr> <tr><td>5</td><td>1</td><td>7</td></tr> </table>	2	4	6	1	7	5		9	6	5	1	7
2	4	6											
1	7	5											
	9	6											
5	1	7											

