

A. Write the number that comes after:

1) 68, _____

2) 35, _____

3) 11, _____

4) 59, _____

5) 80, _____



6) 30, _____

7) 65, _____

8) 109, _____

9) 63, _____

10) 99, _____

B. Count on in ones:

1) 35, 36, 37, _____, _____, _____

2) 57, 58, 59, _____, _____, _____

3) 8, 9, 10, _____, _____, _____

4) 96, 97, 98, _____, _____, _____

5) 107, 108, 109, _____, _____, _____



A. Write the number before:

1) _____ , 57

2) _____ , 99

3) _____ , 50

4) _____ , 100

5) _____ , 11



B. Write the numbers before and after:

6) _____ , 77 , _____

7) _____ , 10 , _____

8) _____ , 89 , _____

9) _____ , 21 , _____

10) _____ , 50 , _____

C. Count backwards in ones:


1) 74 , 73 , 72 , _____ , _____ , _____

2) 53 , 52 , 51 , _____ , _____ , _____

3) 85 , 84 , 83 , _____ , _____ , _____

4) 104 , 103 , 102 , _____ , _____ , _____

5) 15 , 14 , 13 , _____ , _____ , _____



A. Write the number that comes 10 after:

1) 26 , _____

2) 68 , _____

3) 34 , _____

4) 9 , _____

5) 100 , _____



6) 99 , _____

7) 45 , _____

8) 101 , _____

9) 56 , _____

10) 95 , _____

B. Skip count forwards in tens:


1) 14 , 24 , 34 , _____ , _____ , _____

2) 40 , 50 , 60 , _____ , _____ , _____

3) 62 , 72 , 82 , _____ , _____ , _____

4) 9 , 19 , 29 , _____ , _____ , _____

5) 31 , 41 , 51 , _____ , _____ , _____



A. Write the number 10 before:

1) _____ , 65

2) _____ , 96

3) _____ , 100

4) _____ , 15

5) _____ , 11



B. Write the numbers 10 before and 10 after:

6) _____ , 77 , _____

7) _____ , 91 , _____

8) _____ , 33 , _____

9) _____ , 110 , _____

10) _____ , 12 , _____

C. Skip count backwards in tens:


1) 94 , 84 , 74 , _____ , _____ , _____

2) 120 , 110 , 100 , _____ , _____ , _____

3) 79 , 69 , 59 , _____ , _____ , _____

4) 91 , 81 , 71 , _____ , _____ , _____

5) 58 , 48 , 38 , _____ , _____ , _____



A. Write the number that comes after:

1) 68, 69

2) 35, 36

3) 11, 12

4) 59, 60

5) 80, 81



6) 30, ~~31~~

7) 65, ~~66~~

8) 109, ~~110~~

9) 63, 64

10) 99, 100

B. Count on in ones:

1) 35, 36, 37, 38, 39, 40

2) 57, 58, 59, 60, 61, 62

3) 8, 9, 10, 11, 12, 13

4) 96, 97, 98, 99, 100, 101

5) 107, 108, 109, 110, 111, 112



A. Write the number before:

1) 56 , 57

2) 98 , 99

3) 49 , 50

4) 99 , 100

5) 10 , 11



B. Write the numbers before and after:

6) 76 , 77 , 78

7) 9 , 10 , 11

8) 88 , 89 , 90

9) 20 , 21 , 22

10) 49 , 50 , 51

C. Count backwards in ones:

1) 74 , 73 , 72 , 71 , 70 , 69

2) 53 , 52 , 51 , 50 , 49 , 48

3) 85 , 84 , 83 , 82 , 81 , 80

4) 104 , 103 , 102 , 101 , 100 , 99

5) 15 , 14 , 13 , 12 , 11 , 10



A. Write the number that comes 10 after:

1) 26 , 36

2) 68 , 78

3) 34 , 44

4) 9 , 19

5) 100 , 110



6) 99 , 109

7) 45 , 55

8) 101 , 111

9) 56 , 66

10) 95 , 105

B. Skip count forwards in tens:

1) 14 , 24 , 34 , 44 , 54 , 64

2) 40 , 50 , 60 , 70 , 80 , 90

3) 62 , 72 , 82 , 92 , 102 , 112

4) 9 , 19 , 29 , 39 , 49 , 59

5) 31 , 41 , 51 , 61 , 71 , 81



A. Write the number 10 before:

1) 55 , 65

2) 86 , 96

3) 90 , 100

4) 5 , 15

5) 1 , 11



B. Write the numbers 10 before and 10 after:

6) 67 , 77 , 87

7) 81 , 91 , 101

8) 23 , 33 , 43

9) 100 , 110 , 120

10) 2 , 12 , 22

C. Skip count backwards in tens:

1) 94 , 84 , 74 , 64 , 54 , 44

2) 120 , 110 , 100 , 90 , 80 , 70

3) 79 , 69 , 59 , 49 , 39 , 29

4) 91 , 81 , 71 , 61 , 51 , 41

5) 58 , 48 , 38 , 28 , 18 , 8

