

Write the addition question, then use the number line, hundred board or base ten materials to answer them

1)



2)



3)



4)




5)

31	32	33	34	35	36	37	38	39	40
41	42	43	44	45	46	47	48	49	50
51	52	53	54	55	56	57	58	59	60

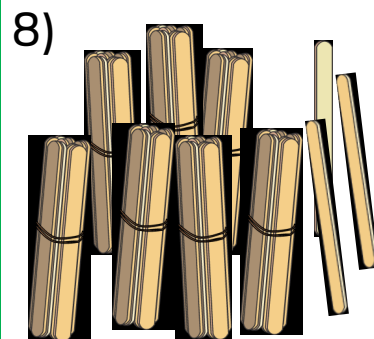
6)

61	62	63	64	65	66	67	68	69	70
71	72	73	74	75	76	77	78	79	80
81	82	83	84	85	86	87	88	89	90

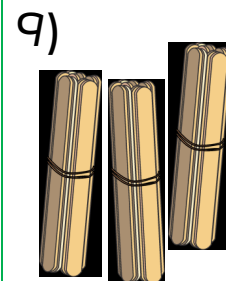
Draw extra sticks to show the questions on the screen



	T	O
+		



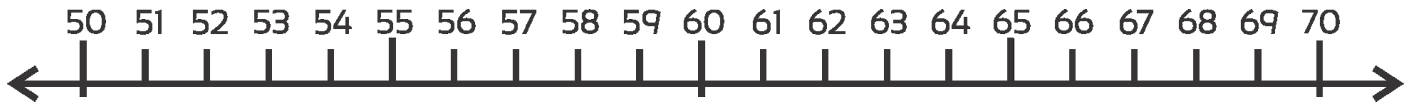
	T	O
+		



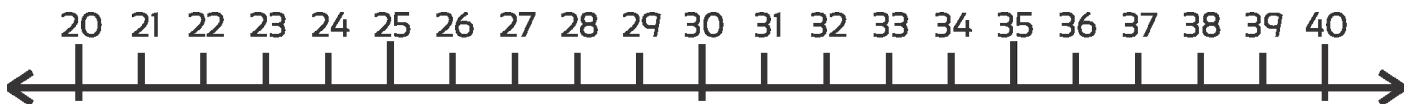
	T	O
+		

Use the number lines to answer the on screen addition questions.  
Write the addition number sentence first.

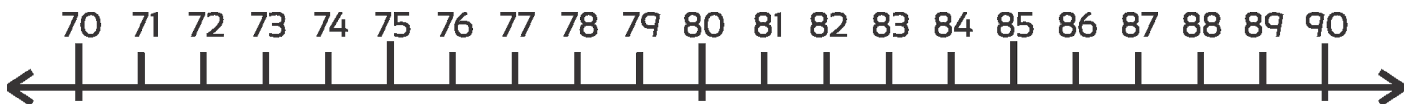
1)



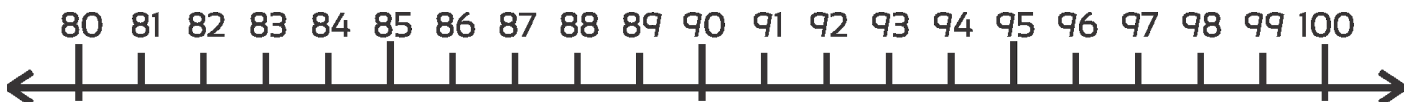
2)



3)



4)



Use the hundred grid for these

5)

6)

7)

8)  $68 + 5 =$

9)  $84 + 8 =$


10)  $47 + 6 =$

11)  $54 + 8 =$

12)  $17 + 9 =$

13)  $26 + 7 =$

1	2	3	4	5	6	7	8	9	10
11	12	13	14	15	16	17	18	19	20
21	22	23	24	25	26	27	28	29	30
31	32	33	34	35	36	37	38	39	40
41	42	43	44	45	46	47	48	49	50
51	52	53	54	55	56	57	58	59	60
61	62	63	64	65	66	67	68	69	70
71	72	73	74	75	76	77	78	79	80
81	82	83	84	85	86	87	88	89	90
91	92	93	94	95	96	97	98	99	100



1)

T	O
8	5
<hr/>	

2)

T	O
8	9
<hr/>	

3)

T	O
6	2
<hr/>	

4)

T	O
5	7
<hr/>	

5)

T	O
4	4
<hr/>	

6)

T	O
2	4
<hr/>	

7)

T	O
7	0
	8
<hr/>	

8)

T	O
6	3
	7
<hr/>	

9)

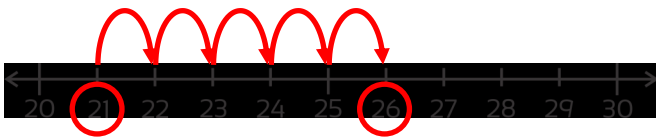
T	O
9	5
	4
<hr/>	

Tens

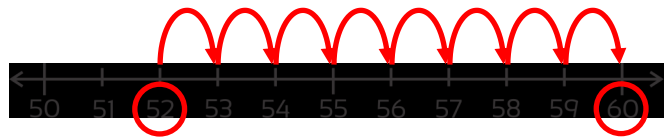
Ones

Write the addition question, then use the number line, hundred board or base ten materials to answer them

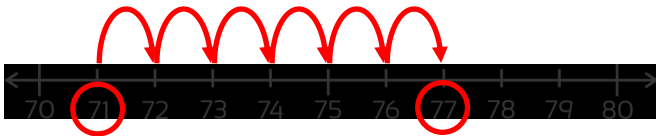
1)  $21 + 5 = 26$



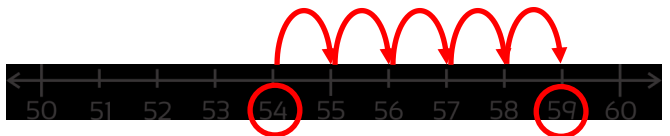
2)  $52 + 8 = 60$



3)  $71 + 6 = 77$



4)  $54 + 5 = 59$




5)  $44 + 4 = 48$

31	32	33	34	35	36	37	38	39	40
41	42	43	44	45	46	47	48	49	50
51	52	53	54	55	56	57	58	59	60

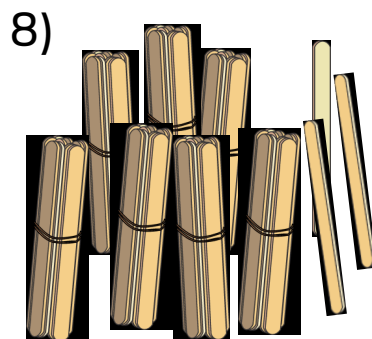
6)  $62 + 7 = 69$

61	62	63	64	65	66	67	68	69	70
71	72	73	74	75	76	77	78	79	80
81	82	83	84	85	86	87	88	89	90

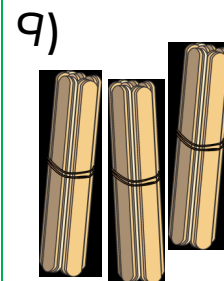
Draw extra sticks to show the questions on the screen



	T	O
	5	2
+		5
	5	7



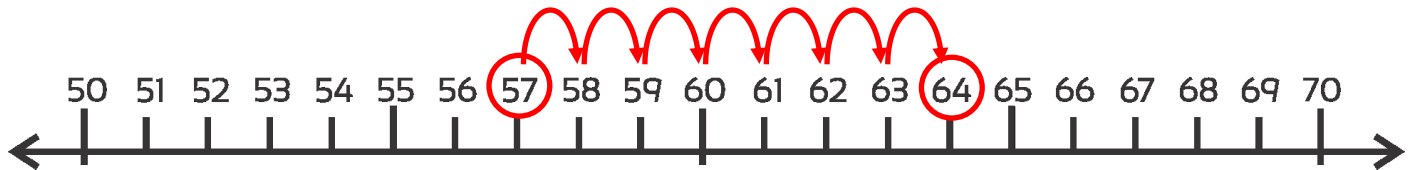
	T	O
	7	3
+		6
	7	9



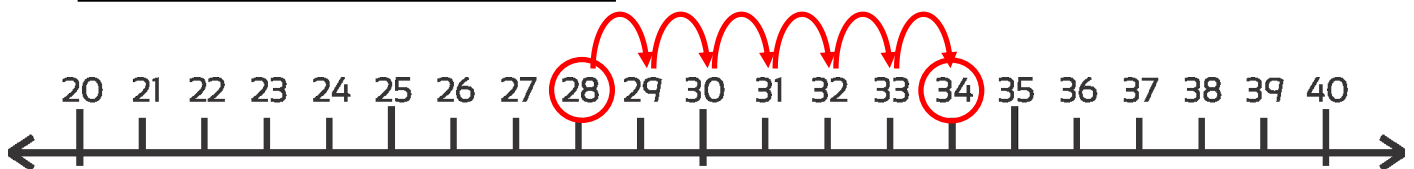
	T	O
	3	0
+		6
	3	6

Use the number lines to answer the on screen addition questions.  
Write the addition number sentence first.

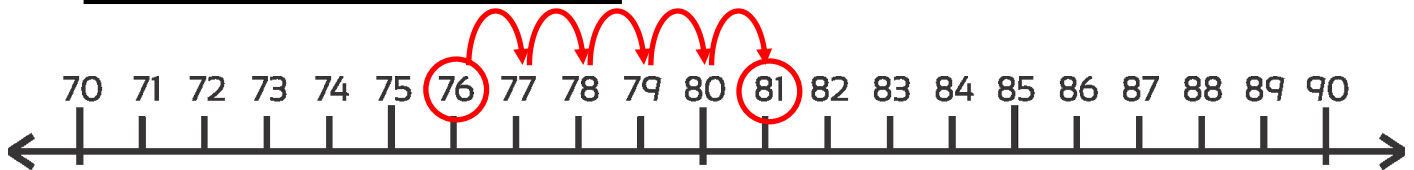
1)  $57 + 7 = 64$



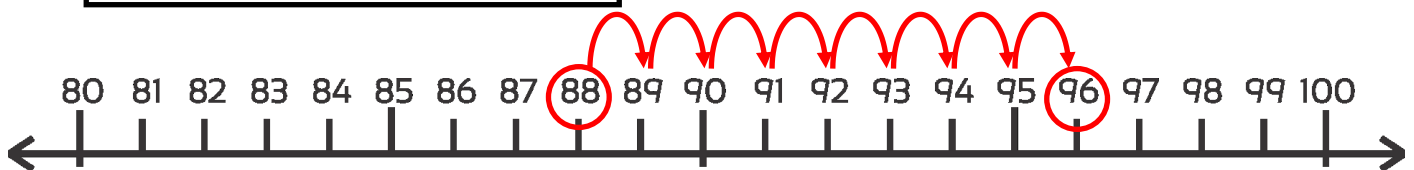
2)  $28 + 6 = 34$



3)  $76 + 5 = 81$



4)  $88 + 8 = 96$



Use the hundred grid for these

5)  $75 + 7 = 82$

6)  $56 + 5 = 61$

7)  $37 + 9 = 46$

8)  $68 + 5 = 73$

9)  $84 + 8 = 92$

10)  $47 + 6 = 53$

11)  $54 + 8 = 62$

12)  $17 + 9 = 26$

13)  $26 + 7 = 33$



1)

	T	O
+	8	5
		6
<hr/>		
	9	1

2)

	T	O
+	8	9
		5
<hr/>		
	9	4

3)

	T	O
+	6	2
		8
<hr/>		
	7	0

4)

	T	O
+	5	7
		9
<hr/>		
	6	6

5)

	T	O
+	4	4
		8
<hr/>		
	5	2

6)

	T	O
+	2	4
		6
<hr/>		
	3	0

7)

	T	O
+	7	0
		8
<hr/>		
	6	2

8)

	T	O
+	6	3
		7
<hr/>		
	5	6

9)

	T	O
+	9	5
		4
<hr/>		
	9	1