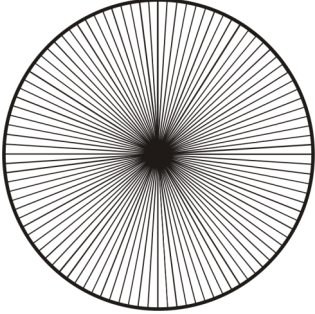












Draw and write the fractions to match

<p>a)</p> 	<p>common fractions</p> <p><input type="text"/> <input type="text"/></p> <p>100 <input type="text"/></p> <p>simplified</p>	<p>decimal</p> <p><input type="text"/></p>	<p>percent</p> <p><input type="text"/></p>	
<p>b)</p> 	<p>common fractions</p> <p><input type="text"/> <input type="text"/></p>	<p>decimal</p> <p><input type="text"/></p>	<p>percent</p> <p><input type="text"/></p>	
<p>c)</p> 	 <p>This is a</p> <h1 style="color: red; margin: 0;">PREVIEW</h1> <p>Subscribe today for a whole year's access to ALL our worksheets and videos!</p> <p>Already a subscriber? Log in to download the full version of this worksheet.</p> 			
<p>d)</p> 	<p>common fractions</p> <p><input type="text"/> <input type="text"/></p> <p>100 <input type="text"/></p> <p>simplified</p>	<p>decimal</p> <p><input type="text"/></p>	<p>percent</p> <p><input type="text"/></p>	
<p>e)</p> 	<p>common fractions</p> <p><input type="text"/> <input type="text"/></p> <p>100 <input type="text"/></p> <p>simplified</p>	<p>decimal</p> <p><input type="text"/></p>	<p>percent</p> <p><input type="text"/></p>	