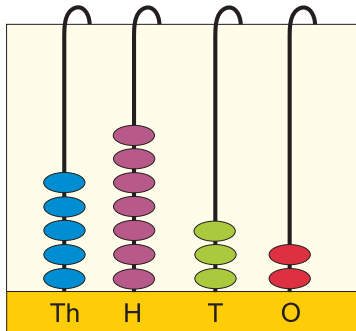
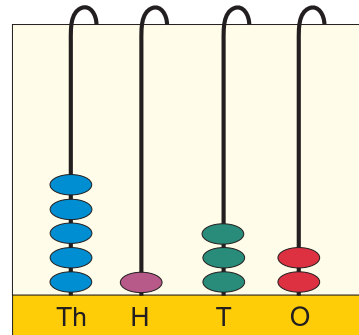




Write and say each number shown on the abacus:







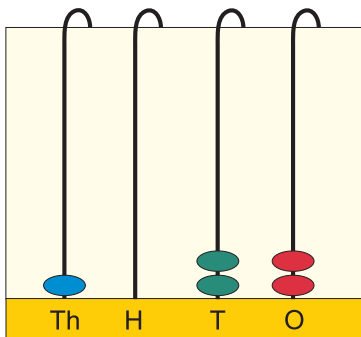
This is a

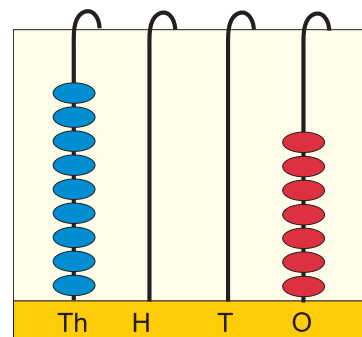
PREVIEW

Subscribe today for a whole year's access to ALL our worksheets and videos!



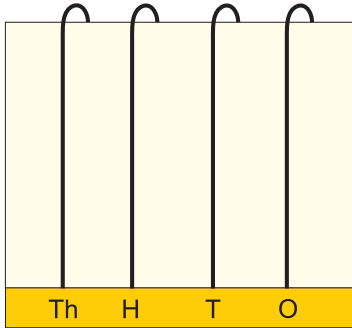
Already a subscriber? Log in to download the full version of this worksheet.



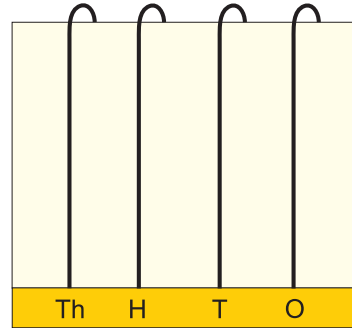




Draw the beads and say each number shown:



5 0 3 4



1 6 0 2



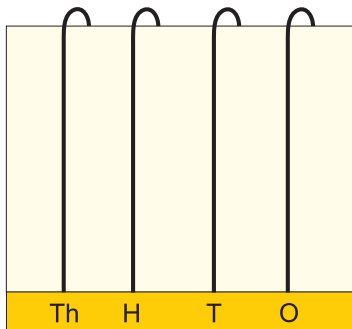
This is a

PREVIEW

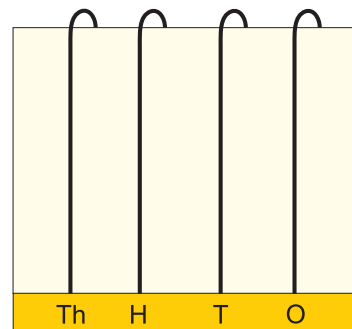
Subscribe today for a whole
year's access to ALL our
worksheets and videos!



Already a subscriber? Log in to download the full version of this worksheet.



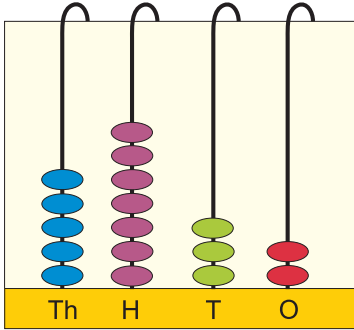
1 8 2 2



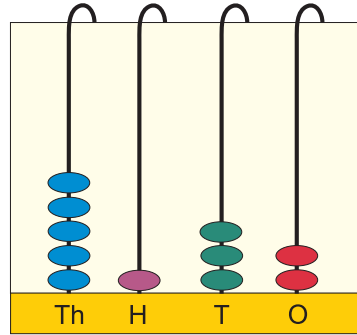

3 0 0 4



Draw the extra beads needed to show each number:



7 9 3 5



9 1 4 5



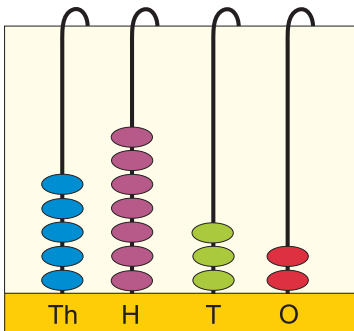
This is a

PREVIEW

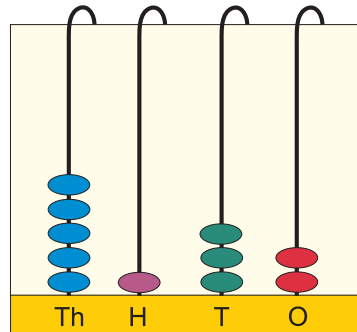
Subscribe today for a whole year's access to ALL our worksheets and videos!



Already a subscriber? Log in to download the full version of this worksheet.



5 7 8 6



8 2 3 4