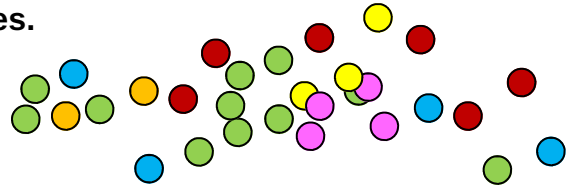


Use counters to help you solve each of these stories.

Choose the correct operation then write the number sentence underneath.

Don't forget to write what your answer refers to: cookies, children, dollars, etc.



1) Movie tickets are \$10 each. There are 5 children going to see the movie. How much will they spend altogether?

\_\_\_\_\_

2) A box of snacks costs \$10. Between them 5 children buy one box. How much does each child pay?

\_\_\_\_\_

3) Going to the park altogether

\_\_\_\_\_

4) There are 10 children. How many more children need to go?

\_\_\_\_\_

5) Jeff has 10 marbles and Sandy has 5 marbles. How many more marbles does Jeff have than Sandy?

\_\_\_\_\_

6) There are 10 friends at the park. There were only 5 friends to start with. How many friends joined them to make the group of 10?

\_\_\_\_\_

7) There were 10 cupcakes on the plate. Some children eat some leaving only 5 cupcakes. How many cupcakes were eaten?

\_\_\_\_\_



This is a

**PREVIEW**

Subscribe today for a whole year's access to ALL our worksheets and videos!

Already a subscriber? Log in to download the full version of this worksheet.

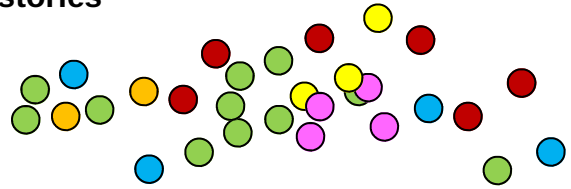


me.

Only use counters to help you solve each of these stories if you are having difficulty.

Choose the correct operation then write the number sentence underneath.

Don't forget to write what your answer refers to: cookies, children, dollars, etc.



1) There were 12 chocolates in a bowl. Some children eat some of them leaving only 4 chocolates. How many chocolates were eaten?

\_\_\_\_\_

2) A packet ice creams costs \$12. Between them 4 children buy one packet. How much do

3) Game  
How muc

4) On a tr  
going alt

5) There are 12 puppies playing in the pen. Before long, 4 puppies are sold and go to good homes. How many puppies are left in the pen?

\_\_\_\_\_

6) There are 12 girls at a party. There were only 4 friends to start with. How many friends joined them to make the group of 12?

\_\_\_\_\_

7) Minnie has 12 cards collected and Nick has 4 cards. How many more cards does Minnie have than Nick?

\_\_\_\_\_



This is a

# PREVIEW

Subscribe today for a whole year's access to ALL our worksheets and videos!



Already a subscriber? Log in to download the full version of this worksheet.

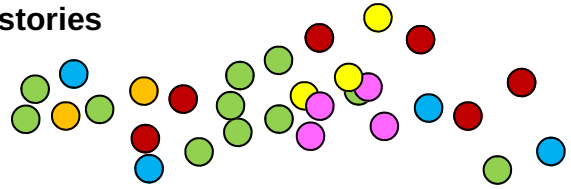
ch.

ole are

Only use counters to help you solve each of these stories if you are having difficulty.

Choose the correct operation then write the number sentence underneath.

Don't forget to write what your answer refers to: cookies, children, dollars, etc.



1) There were 36 treats in a bowl. Some children eat some of them leaving only 30 treats. How many treats were eaten?

\_\_\_\_\_

2) A present for a friend costs \$49 which is split between the 6 children buying it. How much

\_\_\_\_\_

3) A snack  
How much

\_\_\_\_\_

4) On a bus  
assistant

\_\_\_\_\_

5) There are 25 cookies on a tray but 29 children at the party. How many more cookies are needed for everyone to have one each?

\_\_\_\_\_

6) To start with there were only 15 people watching the busker. After a while, there were 40 people there. How many people joined the group?

\_\_\_\_\_

7) Alicia has 19 stickers and Tamara has 24 stickers. How many more stickers does Tamara have than Alicia?

\_\_\_\_\_



This is a

# PREVIEW

Subscribe today for a whole  
year's access to ALL our  
worksheets and videos!



Already a subscriber? Log in to download the full version of this worksheet.