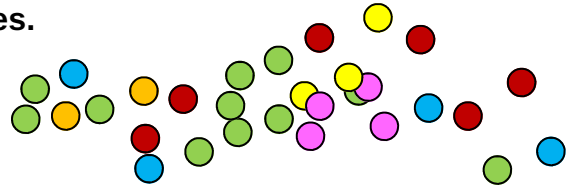


Use counters to help you solve each of these stories.

Choose the correct operation then write the number sentence underneath.

Don't forget to write what your answer refers to: cookies, children, dollars, etc.



- 1) There were 8 cakes on a plate. Each cake needs 2 cherries. How many cherries will I need?

\_\_\_\_\_

- 2) There are 8 pies and 2 sausage rolls. How many snacks altogether?

- 3) Oliver have than

iver

- 4) Ivy has

PROFESSOR PETE'S  
CLASSROOM

This is a

**PREVIEW**

Subscribe today for a whole year's access to ALL our worksheets and videos!

Already a subscriber? Log in to download the full version of this worksheet.

- 5) There are 2 pencils in each pot. There are 8 pots. How many pencils altogether?

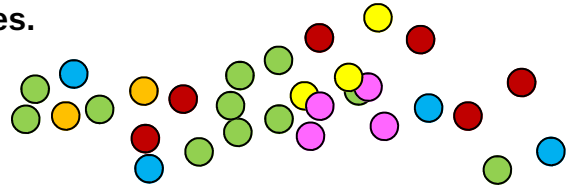
- 6) Grace has 2 stickers. She needs 8 stickers to win a prize. How many more stickers does she need to collect?

- 7) There are 2 bags with 8 apples in each. How many apples are there altogether?

Use counters to help you solve each of these stories.

Choose the correct operation then write the number sentence underneath.

Don't forget to write what your answer refers to: cookies, children, dollars, etc.



1) There were 15 cookies on a plate. Nine are eaten. How many cookies are left?

2) There are 6 pies on each plate. There are 4 plates. How many pies altogether?

3) Lucas does Jos

4) Eva ha does Har

PROFESSOR PETE'S  
CLASSROOM

This is a

**PREVIEW**

Subscribe today for a whole year's access to ALL our worksheets and videos!

Already a subscriber? Log in to download the full version of this worksheet.

ocolates

ckers

5) There are 6 glue sticks in each tray. There are 5 trays. How many glue sticks are there altogether?

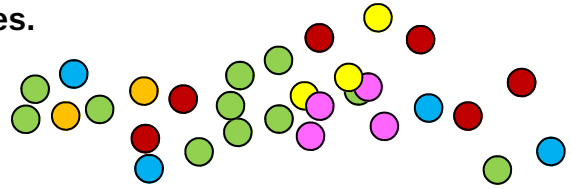
6) Hunter has 8 stamps on his chart. He needs 20 stamps for a prize. How many more stamps will he need to win the prize?

7) There are 6 packets with 4 pears in each. How many pears are there altogether?

Use counters to help you solve each of these stories.

Choose the correct operation then write the number sentence underneath.

Don't forget to write what your answer refers to: cookies, children, dollars, etc.



**N.B. Answers may be required as normal sentences, or as number sentences.**

- 1) There were 8 cakes on a plate. Each cake needs 2 cherries. How many cherries will I need?

**Eight lots of two cherries is sixteen cherries.  $8 \times 2 = 16$  cherries**

- 2) There are 8 pies and 2 sausage rolls. How many snacks altogether?

**Eigh**

This is a

**cks**

- 3) Oliver have than

# PREVIEW

**iver**

**Eigh**

Subscribe today for a whole year's access to ALL our worksheets and videos!



- 4) Ivy has

**Eigh**

Already a subscriber? Log in to download the full version of this worksheet.

**rs**

- 5) There are 2 pencils in each pot. There are 8 pots. How many pencils altogether?

**Eight pots of two pencils is sixteen pencils.  $2 \times 8 = 16$  pencils**

- 6) Grace has 2 stickers. She needs 8 stickers to win a prize. How many more stickers does she need to collect?

**Grace needs six more stickers to have eight stickers.  $2 + 6 = 8$  or  $8 - 2 = 6$**

- 7) There are 2 bags with 8 apples in each. How many apples are there altogether?

**Two bags of eight apples is sixteen apples.  $8 \times 2 = 16$  apples**