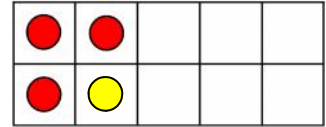


Use the ten frame to help you find one more than this number.
Draw one more dot and write the number.

One more than 3 is



On



This is a

PREVIEW

Subscribe today for a whole
year's access to ALL our
worksheets and videos!

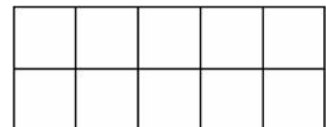


Already a subscriber? Log in to download the full version of this worksheet.

On

On

One more than 9 is

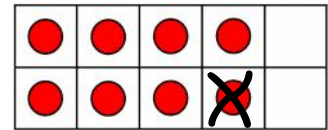


One more than 2 is

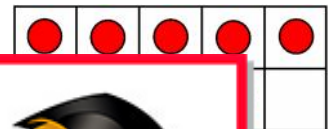


Use the ten frame to help you find one more than this number.
Cross off one dot and write the number.

One less than 8 is



One less than 0 is



One less than 1 is



One less than 2 is



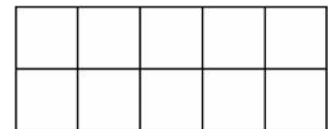
PROFESSOR PETE'S
CLASSROOM

This is a
PREVIEW
Subscribe today for a whole
year's access to ALL our
worksheets and videos!

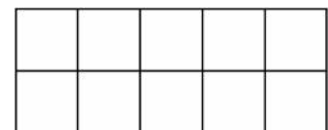


Already a subscriber? Log in to download the full version of this worksheet.

One less than 7 is



One less than 1 is

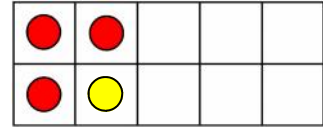




Use the ten frame to help you find one more than this number.
Draw one more dot and write the number.

number.

One more than 5 is



On



This is a

PREVIEW

Subscribe today for a whole year's access to ALL our worksheets and videos!

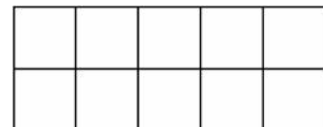


Already a subscriber? Log in to download the full version of this worksheet.

On

On

One more than 6 is



One more than 8 is

