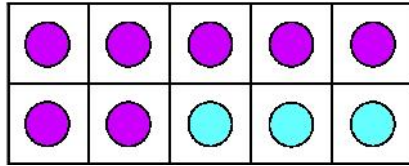





Here is 10. Write the numbers that together make the 10.



10

and



10

PROFESSOR PETE'S
CLASSROOM

This is a
PREVIEW

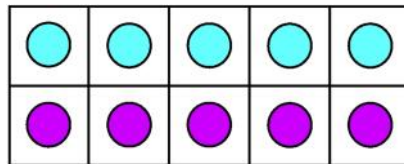
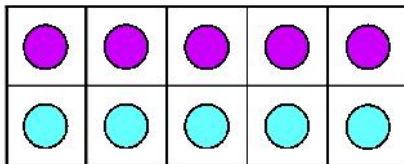
Subscribe today for a whole year's access to ALL our worksheets and videos!

Already a subscriber? Log in to download the full version of this worksheet.

Flip the

and and and

This pair doesn't change if it is flipped.

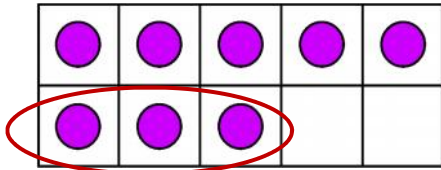


10

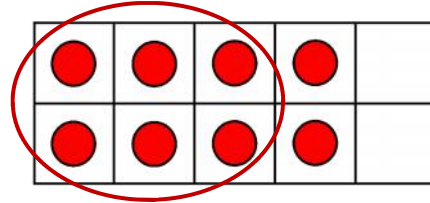
and



8 dots. Some are circled. How many are left?



8

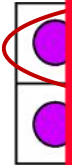


Write the numbers that together make 8.

and

and

Here are two ten frames for 7



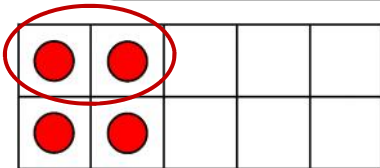
Write th


 This is a
PREVIEW
 Subscribe today for a whole
 year's access to ALL our
 worksheets and videos!

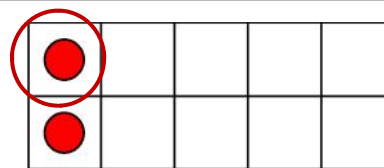


Already a subscriber? Log in to download the full version of this worksheet.

These



6



2

Write the numbers that together make 2.

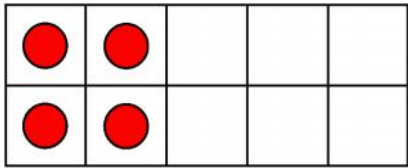
and

Write the numbers that together make 3.

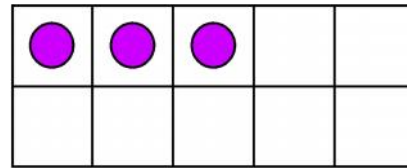
and



Add more dots to make 5. Write the numbers that together make 5.



5



Write the numbers that together make 5.

and

and

Add more dots to make 4. Write the numbers that together make 4.



This is a

PREVIEW

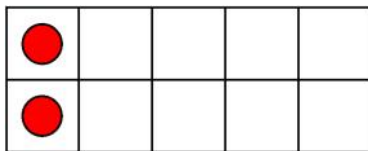
Subscribe today for a whole year's access to ALL our worksheets and videos!



Already a subscriber? Log in to download the full version of this worksheet.

Write the

Add mo



3

Write the numbers that together make 3.

and



2

Write the numbers that together make 2.

and