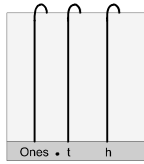


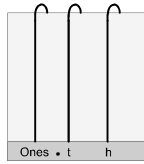
Using the Abacus

HUNDREDTHS 13

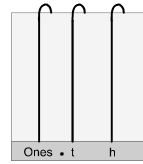
1 Draw the beads on each abacus to match the number.



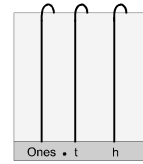
a 3.57



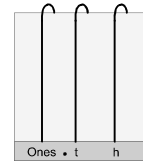
b 2.09



c 0.51

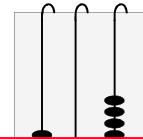
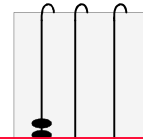
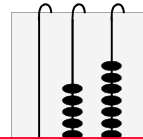
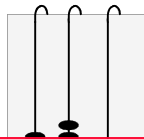
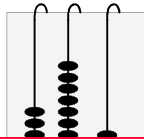


d 6.7



e 7

2 Write the number shown by each abacus.



3



This is a

PREVIEW

Subscribe today for a whole year's access to ALL our worksheets and videos!



Already a subscriber? Log in to download the full version of this worksheet.

4 Write the value (ones, tenths or hundredths) of the '7' in each of these numbers.

a 3.76 _____ b 5.17 _____

c 7.26 _____ d 3.67 _____


5 Put a tick or cross beside each number sentence to show if it is right or wrong.

a $4.81 = 48 \text{ tenths } 81 \text{ hundredths}$ b $5.08 = 5 \text{ tenths } 8 \text{ hundredths}$

c $26.0 = 26 \text{ tenths}$ d $8.03 = 80 \text{ tenths } 3 \text{ hundredths}$

e $7.3 = 73 \text{ hundredths}$ f $6.32 = 63 \text{ tenths } 2 \text{ hundredths}$

g $0.51 = 51 \text{ hundredths}$ h $3.7 = 37 \text{ hundredths}$



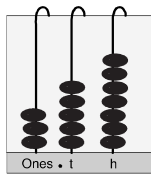
ANSWERS

Name:

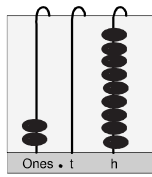
Using the Abacus

HUNDREDTHS 13

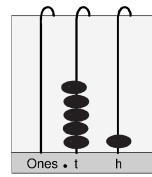
1 Draw the beads on each abacus to match the number.



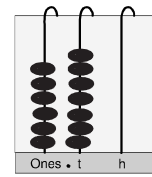
a 3.57



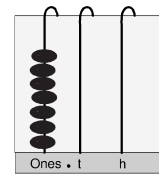
b 2.09



c 0.51

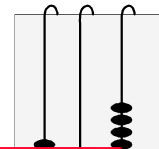
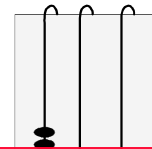
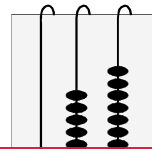
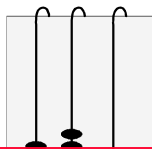
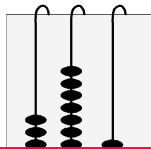


d 6.7



e 7

2 Write the number shown by each abacus.



3



This is a

PREVIEW

Subscribe today for a whole year's access to ALL our worksheets and videos!



Already a subscriber? Log in to download the full version of this worksheet.

4 Write the value (ones, tenths or hundredths) of the '7' in each of these numbers.

a 3.76 tenths

b 5.17 hundredths

c 7.26 ones

d 3.67 hundredths

5 Mark each number sentence that is wrong.

a $4.81 = 48 \text{ tenths } 81 \text{ hundredths}$ **X**

b $5.08 = 5 \text{ tenths } 8 \text{ hundredths}$ **X**

c $26.0 = 26 \text{ tenths}$ **X**

d $8.03 = 80 \text{ tenths } 3 \text{ hundredths}$

e $7.3 = 73 \text{ hundredths}$ **X**

f $6.32 = 63 \text{ tenths } 2 \text{ hundredths}$

g $0.51 = 51 \text{ hundredths}$

h $3.7 = 37 \text{ hundredths}$ **X**

