

NAME: _____

Add the Coins to Less than a Dollar: 1 [A]



How much money is shown here?

1)



= _____

2)



= _____

3)





This is a

PREVIEW

Subscribe today for a whole year's access to ALL our worksheets and videos!



Already a subscriber? Log in to download the full version of this worksheet.

4)



5)



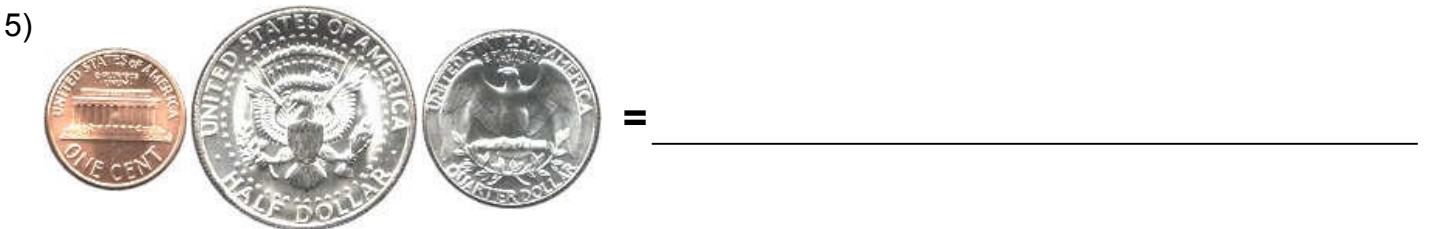

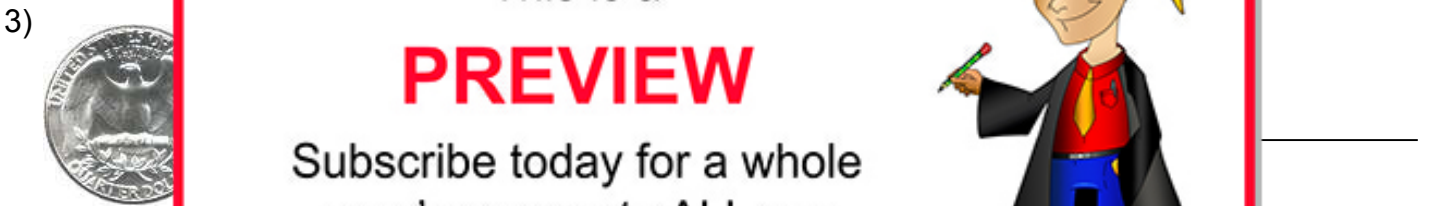
= _____

NAME: _____

Add the Coins to Less than a Dollar: 1 [B]



How much money is shown here?





This is a

PREVIEW

Subscribe today for a whole year's access to ALL our worksheets and videos!

Already a subscriber? Log in to download the full version of this worksheet.



NAME: _____

Add the Coins to Less than a Dollar: 1 [C]




How much money is shown here?

1)  = _____

2)  = _____

3)  = _____

4)  = _____

5)  = _____



This is a

PREVIEW

Subscribe today for a whole year's access to ALL our worksheets and videos!



Already a subscriber? Log in to download the full version of this worksheet.