

NAME: _____

Add the Coins to More or Less than a Dollar: 2 [A]



How much money is shown here?




PROFESSOR PETE'S CLASSROOM

This is a

PREVIEW

Subscribe today for a whole year's access to ALL our worksheets and videos!

Already a subscriber? Log in to download the full version of this worksheet.

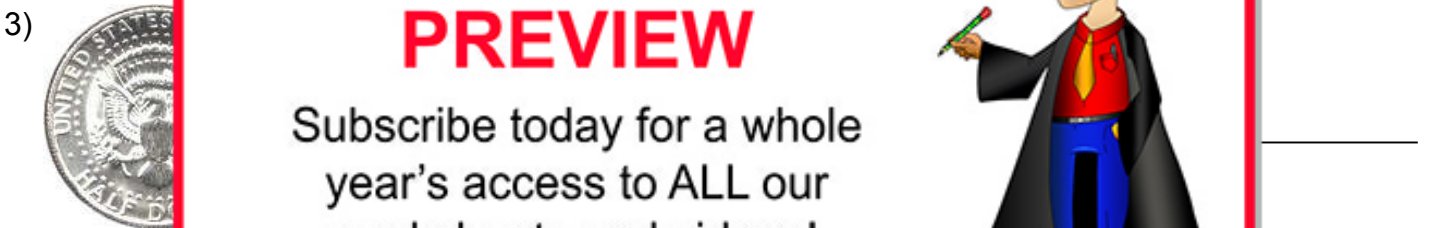


NAME: _____

Add the Coins to More or Less than a Dollar: 2 [B]



How much money is shown here?





This is a

PREVIEW

Subscribe today for a whole year's access to ALL our worksheets and videos!



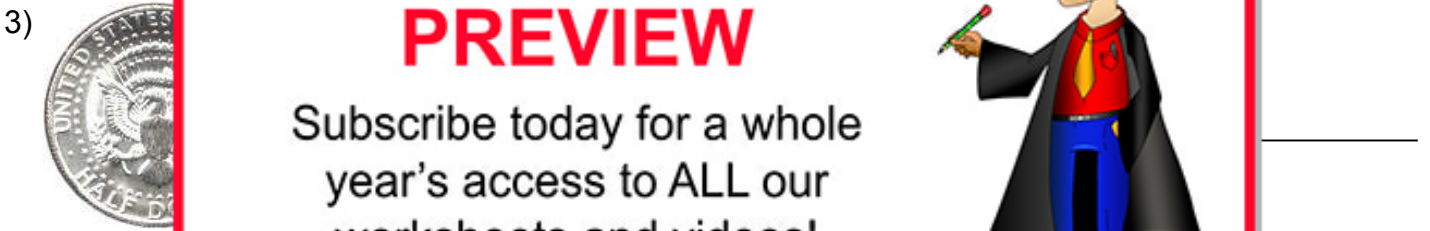
Already a subscriber? Log in to download the full version of this worksheet.

NAME: _____

Add the Coins to More or Less than a Dollar: 2 [C]



How much money is shown here?





This is a

PREVIEW

Subscribe today for a whole year's access to ALL our worksheets and videos!



Already a subscriber? Log in to download the full version of this worksheet.

