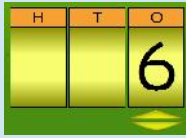


Name: _____

ODOMETER

Set up the Odometer before starting the lesson:

Set the Speed to *Medium* or *Slow* and the Skip value to 2.



Click on the place that is changing, up or down.



This is easy. To count two just skip count. "5, 6, 7."



B. Write the number that comes two before:

1) 2 , 4 6) _____ , 9

2) _____ , 8 7) _____ , 7

3) _____ , 10 8) _____ , 5

4) _____ , 3 9) _____ , 6

A. Write the number that comes two after:

1) 5 , 7 6) 8 , _____

2) 3

3) 7

4) 6

5) 1



This is a

PREVIEW

Subscribe today for a whole year's access to ALL our worksheets and videos!



Already a subscriber? Log in to download the full version of this worksheet.

C. Count

1) 1 , 3 , 5 , _____ , _____

2) 2 , 4 , 6 , _____ , _____

3) 9 , 7 , 5 , _____ , _____

4) 10 , 8 , 6 , _____ , _____

5) 1 , 3 , 5 , _____ , _____

2) _____ , 7 , _____

3) _____ , 4 , _____

4) _____ , 8 , _____

5) _____ , 6 , _____

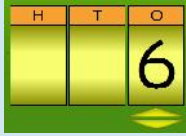


Name: _____

ODOMETER

Set up the Odometer before starting the lesson:

Set the Speed to *Medium* or *Slow* and the Skip value to 2.



Click on the place that is changing, up or down.



This is easy. To count two just skip count. "5, 6, 7."



A. Write the number that comes two after:

1) 1, 3 6) 3, _____

2) 6

3) 2

4) 8

5) 5

B. Write the number that comes two before:

1) 3, 5 6) _____, 4

2) _____, 7 7) _____, 8

3) _____, 2 8) _____, 9

4) _____, 10 9) _____, 6

_____, 10



This is a

PREVIEW

Subscribe today for a whole year's access to ALL our worksheets and videos!



before and

C. Count

1) 10, 8, 6, _____, _____

2) 0, 2, 4, _____, _____

3) 1, 3, 5, _____, _____

4) 3, 5, 7, _____

5) 8, 6, 4, _____, _____

2) _____, 2, _____

3) _____, 6, _____

4) _____, 3, _____

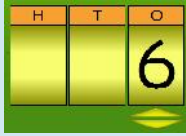
5) _____, 8, _____



Name: _____

ODOMETER

Set up the Odometer before starting the lesson:
Set the Speed to *Medium* or *Slow* and the Skip value to 2.



Click on the place that is changing, up or down.



This is easy. To count two just skip count. "5, 6, 7."



B. Write the number that comes two before:

1) 5 , 7 6) _____ , 3

2) _____ , 9 7) _____ , 5

3) _____ , 4 8) _____ , 6

4) _____ , 8 9) _____ , 10

A. Write the number that comes two after:

1) 6 , 8 6) 2 , _____

2) 2



This is a

PREVIEW

Subscribe today for a whole year's access to ALL our worksheets and videos!



3) 8

4) 7

5) 0

before and

C. Count

Already a subscriber? Log in to download the full version of this worksheet.

1) 1 , 3 , 5 , _____ , _____

2) 0 , 2 , 4 , _____ , _____

3) 9 , 7 , 5 , _____ , _____

4) 7 , 5 , 3 , _____

5) 2 , 4 , 6 , _____ , _____

2) _____ , 2 , _____

3) _____ , 5 , _____

4) _____ , 6 , _____

5) _____ , 8 , _____

