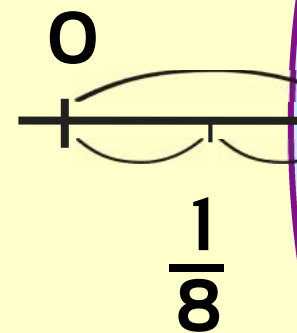
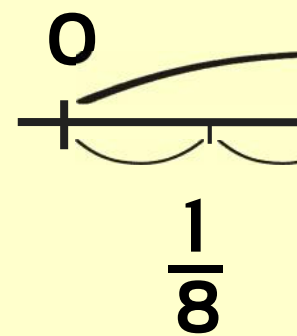


FRACTIONS

Equivalent Fractions

Number Lines



This is a

PREVIEW

Subscribe today for a whole year's access to ALL our worksheets and videos!

Already a subscriber? Log in to download the full version of this worksheet.

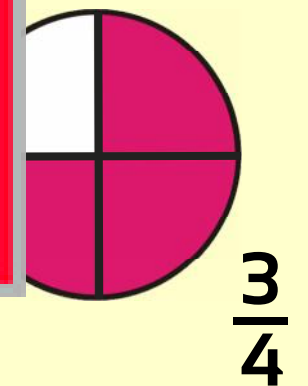
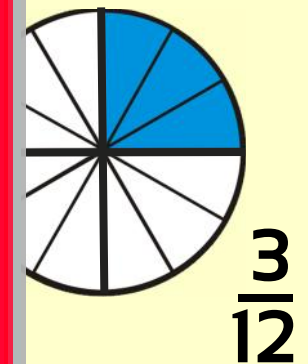
$$\frac{1}{2} = \frac{4}{8} = \frac{2}{4}$$

$$\frac{1}{4} = \frac{2}{8}$$

$$\frac{3}{4} = \frac{6}{8}$$

Equivalent Fractions

Shapes



$$\frac{9}{12} = \frac{6}{8} = \frac{3}{4}$$

$$\frac{9}{12} = \frac{6}{8} = \frac{3}{4}$$