

Adding and Subtracting, No Regrouping

HUNDREDTHS 6

1 Write the number added, then circle its place name.

- a 6.43 to 6.48 add 5 ones tenths **hundredths**
- b 8.24 to 8.64 add _____ ones tenths hundredths
- c 3.05 to 3.65 add _____ ones tenths hundredths
- d 0.2 to 0.29 add _____ ones tenths hundredths
- e 0.03 to 5.03 add _____ ones tenths hundredths

2 Write the number taken away, then circle its place name.

- a 2.79 to 2.76 take _____ ones tenths hundredths
- b 0.91 to 0.11 take _____ ones tenths hundredths
- c 8.47 to 8.4 take _____ ones tenths hundredths

3



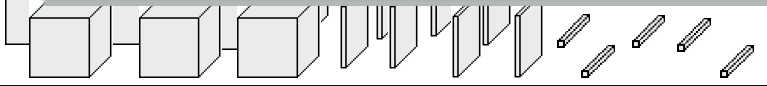
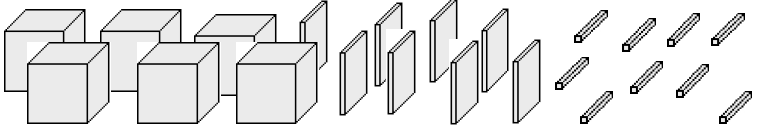
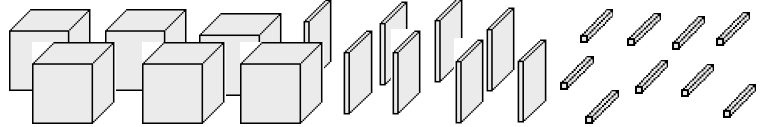
This is a

PREVIEW

Subscribe today for a whole year's access to ALL our worksheets and videos!



Already a subscriber? Log in to download the full version of this worksheet.

	6.43	___ ones ___ tenths ___ hundredths
	0.8	___ ones ___ tenths ___ hundredths
	3.79	___ ones ___ tenths ___ hundredths

4 Write the answer for each of these examples.

- a 4.52 add 2 tenths 3 hundredths _____
- b 8.31 add 1 one 4 tenths 8 hundredths _____
- c 4.29 take 4 ones 2 tenths 3 hundredths _____
- d 9.87 take 3 ones 6 tenths 7 hundredths _____

ANSWERS

Name:

Adding and Subtracting, No Regrouping

HUNDREDTHS 6

1 Write the number added, then circle its place name.

- | | | | |
|---|--------------|--------------|-------------------------------|
| a | 6.43 to 6.48 | add <u>5</u> | ones tenths hundredths |
| b | 8.24 to 8.64 | add <u>4</u> | ones tenths hundredths |
| c | 3.05 to 3.65 | add <u>6</u> | ones tenths hundredths |
| d | 0.2 to 0.29 | add <u>9</u> | ones tenths hundredths |
| e | 0.03 to 5.03 | add <u>5</u> | ones tenths hundredths |

2 Write the number taken away, then circle its place name.

- | | | | |
|---|--------------|---------------|-------------------------------|
| a | 2.79 to 2.76 | take <u>3</u> | ones tenths hundredths |
| b | 0.91 to 0.11 | take <u>8</u> | ones tenths hundredths |
| c | 8.47 to 8.4 | take <u>7</u> | ones tenths hundredths |

- d
e



This is a

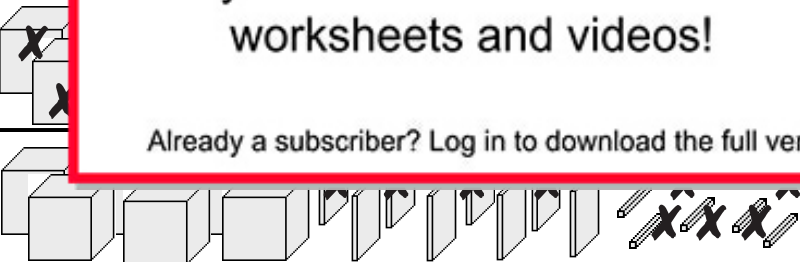
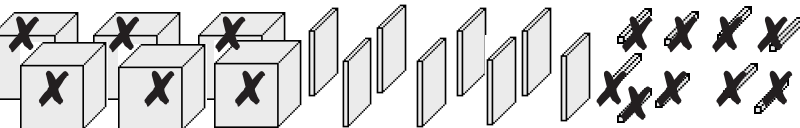
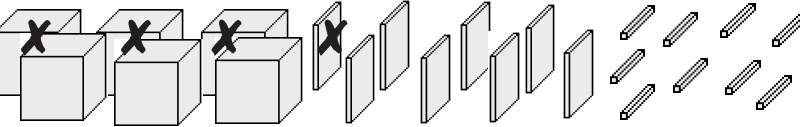
PREVIEW

Subscribe today for a whole year's access to ALL our worksheets and videos!



Already a subscriber? Log in to download the full version of this worksheet.

3 The the

	6.43	$\frac{6}{100}$ hundredths
	0.8	$\frac{6}{10}$ ones $\frac{0}{100}$ tenths $\frac{9}{100}$ hundredths
	3.79	$\frac{3}{10}$ ones $\frac{1}{10}$ tenths $\frac{0}{100}$ hundredths

4 Write the answer for each of these examples.

- | | | | | |
|---|------|------|------------------------------|-------------|
| a | 4.52 | add | 2 tenths 3 hundredths | <u>4.75</u> |
| b | 8.31 | add | 1 one 4 tenths 8 hundredths | <u>9.79</u> |
| c | 4.29 | take | 4 ones 2 tenths 3 hundredths | <u>0.06</u> |
| d | 9.87 | take | 3 ones 6 tenths 7 hundredths | <u>6.2</u> |