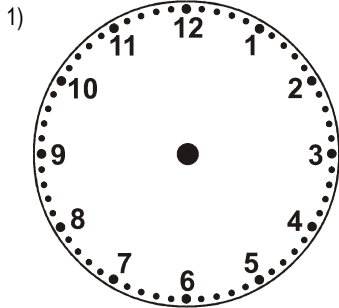


NAME: _____

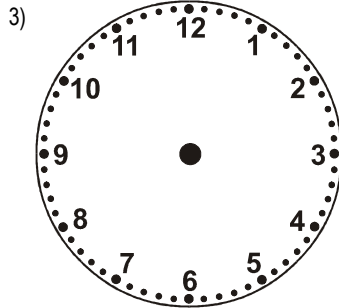
Telling the Time to 5 mins: 5 [A]



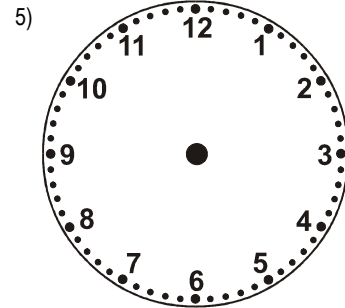
Draw the hands on the clock to match the digital clock.



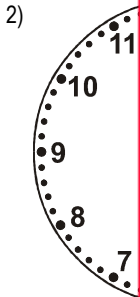
9:05



11:30



4:00



This is a

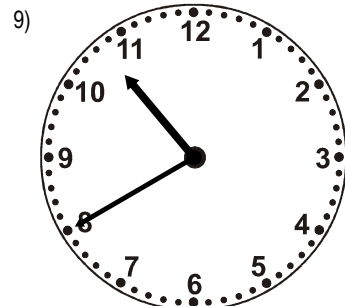
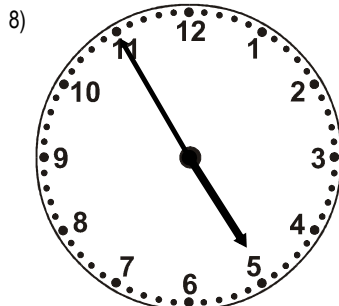
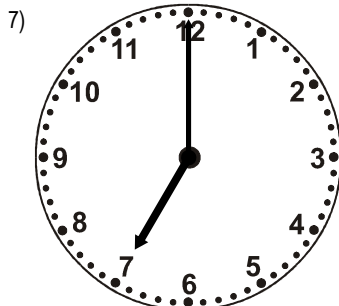
PREVIEW

Subscribe today for a whole year's access to ALL our worksheets and videos!



Already a subscriber? Log in to download the full version of this worksheet.

Write the digital time below to match the clock.

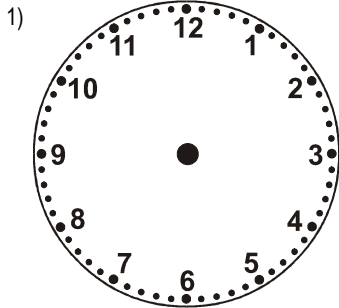


NAME: _____

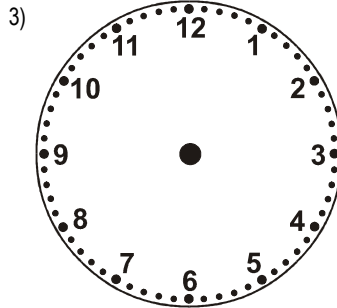
Telling the Time to 5 mins: 5 [B]



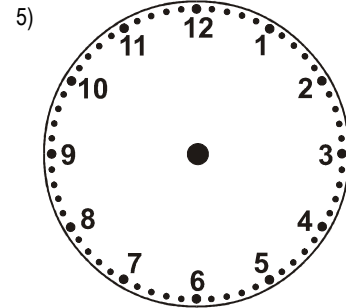
Draw the hands on the clock to match the digital clock.



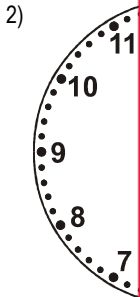
10:45



9:35



9:05



6



This is a

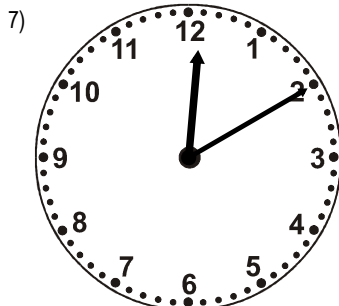
PREVIEW

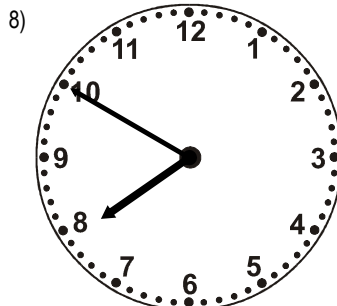
Subscribe today for a whole year's access to ALL our worksheets and videos!

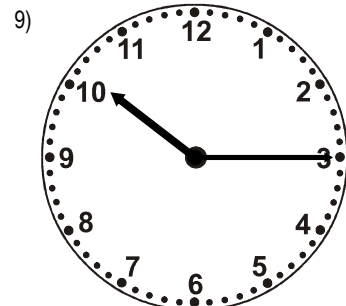


Already a subscriber? Log in to download the full version of this worksheet.

Write the digital time below to match the clock.





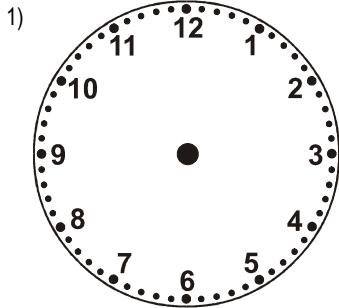


NAME: _____

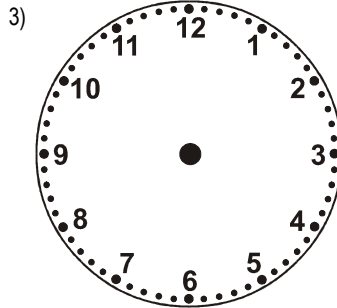
Telling the Time to 5 mins: 5 [C]



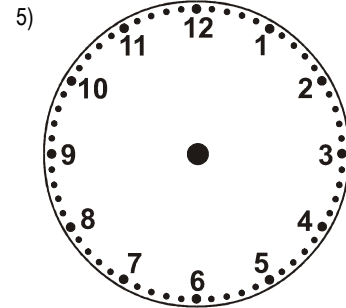
Draw the hands on the clock to match the digital clock.



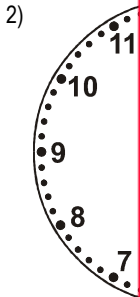
6:40



2:10



10:40



7



This is a

PREVIEW

Subscribe today for a whole year's access to ALL our worksheets and videos!



Already a subscriber? Log in to download the full version of this worksheet.

Write the digital time below to match the clock.

