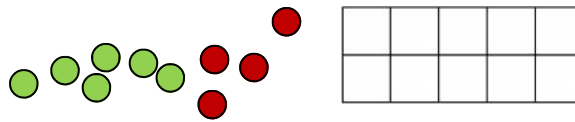


Use your ten frame and coloured counters to help you find the answers.



There are 5 girls and 3 boys.  
How many altogether?

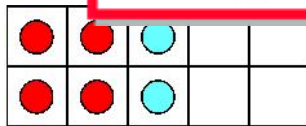
There are 2 children on the bus.  
How many altogether?

There are 10 children in the class.  
How many altogether?

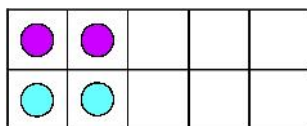
There are 10 children in the class.  
How many altogether?

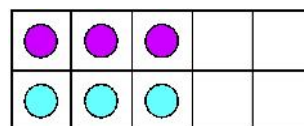
Tell an a

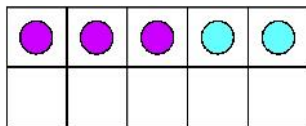
Already a subscriber? Log in to download the full version of this worksheet.

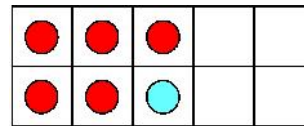














This is a  
**PREVIEW**

Subscribe today for a whole  
year's access to ALL our  
worksheets and videos!

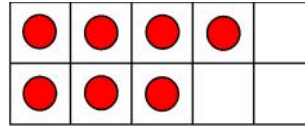




Draw the extra dots or cross them off on the ten frame to show the new number.

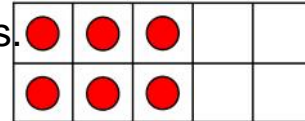
There are 7 boys and 1 girl.

How many children altogether?




There are 6 red shirts and 4 blue shirts.

How many shirts altogether?




There are 7 blue shirts and 2 girls.

How many children altogether?




There are 5 hats.

There are 4 bikes.

Tell an answer.



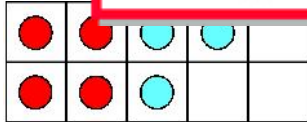
This is a

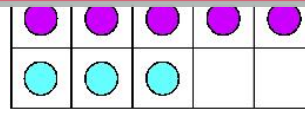
# PREVIEW

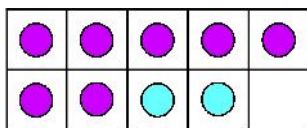
Subscribe today for a whole year's access to ALL our worksheets and videos!

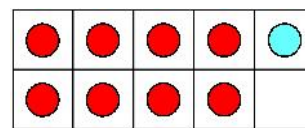


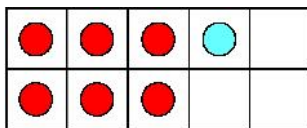
Already a subscriber? Log in to download the full version of this worksheet.

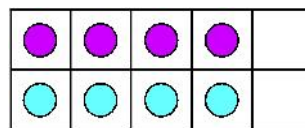








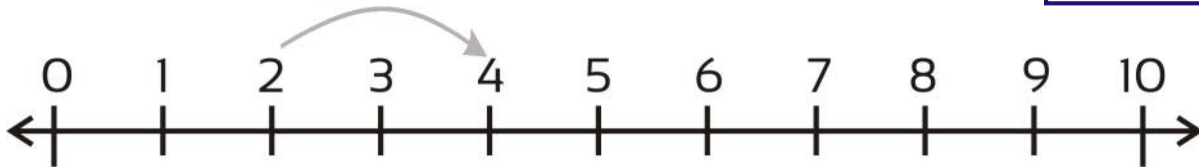






Hop on the number line to find the number.

There are 2 boys and 2 girl. How many altogether?



I have 6 grapes and 2 more grapes. How many altogether?



I hav



I hav



I have 9 boxes. 7 are blue the rest are yellow. How many are yellow?





This is a

# PREVIEW

Subscribe today for a whole year's access to ALL our worksheets and videos!



Already a subscriber? Log in to download the full version of this worksheet.