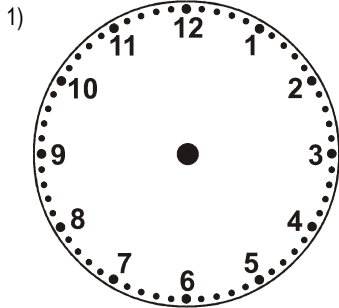
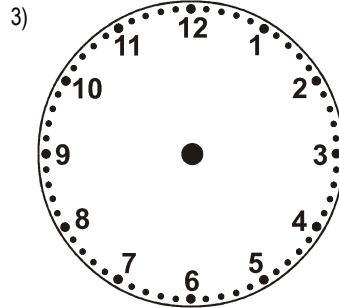


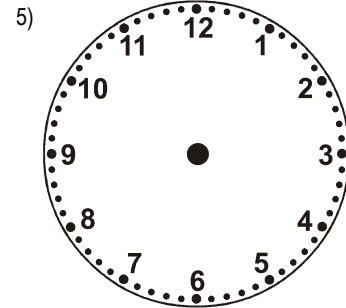
Draw the hands on the clock to match the digital clock.



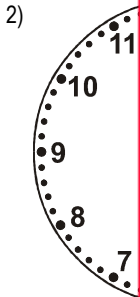
1:20



10:58



3:53





This is a

PREVIEW

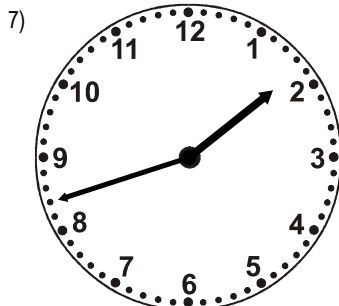
Subscribe today for a whole year's access to ALL our worksheets and videos!

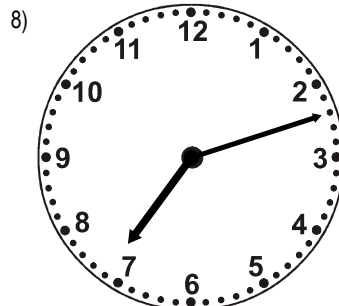


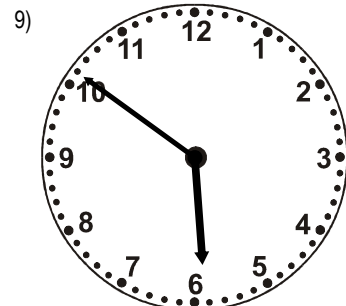
Already a subscriber? Log in to download the full version of this worksheet.



Write the digital time below to match the clock.





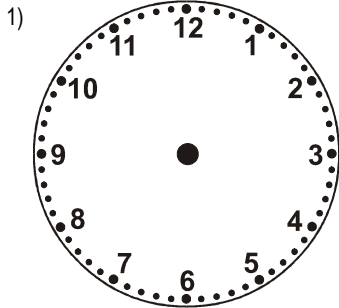


NAME: _____

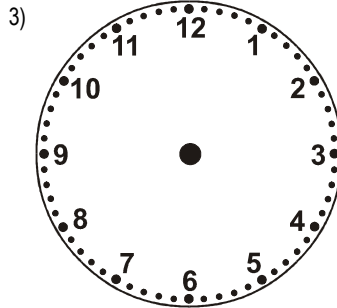
Telling the Time to 1 min: 6 [B]



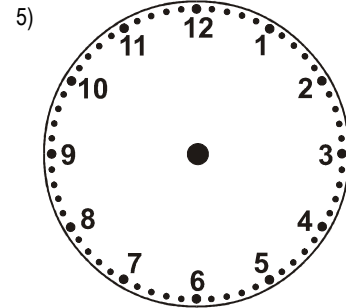
Draw the hands on the clock to match the digital clock.



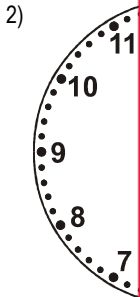
3:02



12:54



6:13



4



This is a

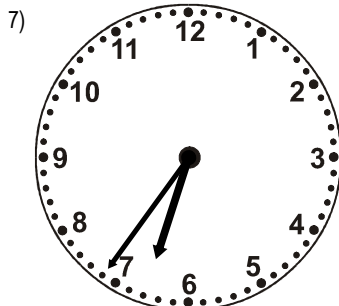
PREVIEW

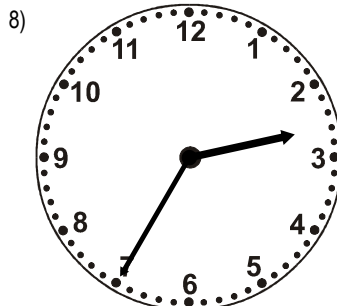
Subscribe today for a whole year's access to ALL our worksheets and videos!

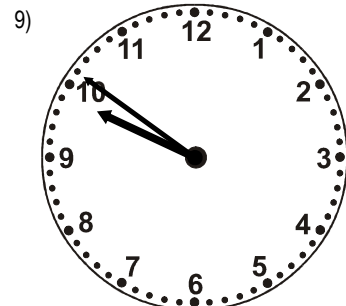


Already a subscriber? Log in to download the full version of this worksheet.

Write the digital time below to match the clock.





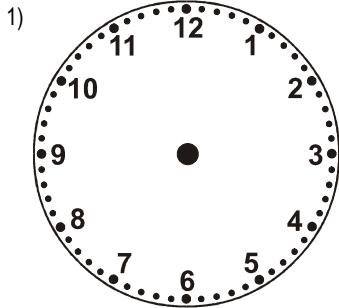


NAME: _____

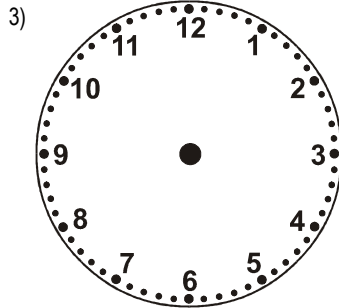
Telling the Time to 1 min: 6 [C]



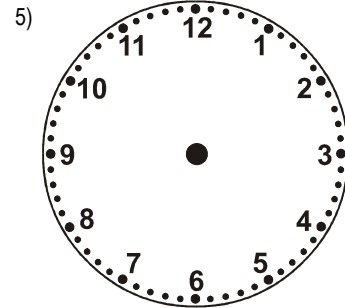
Draw the hands on the clock to match the digital clock.



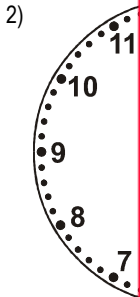
6:13



10:24



10:12



5

 This is a **PREVIEW** Subscribe today for a whole year's access to ALL our worksheets and videos!



Already a subscriber? Log in to download the full version of this worksheet.

Write the digital time below to match the clock.

