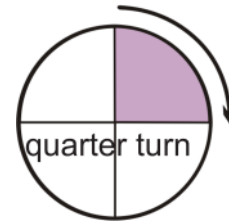



Name _____

Half and Quarter Turns

Clockwise—picture a clock and its hands turning.



Her
clock
Finis

Finis



This is a

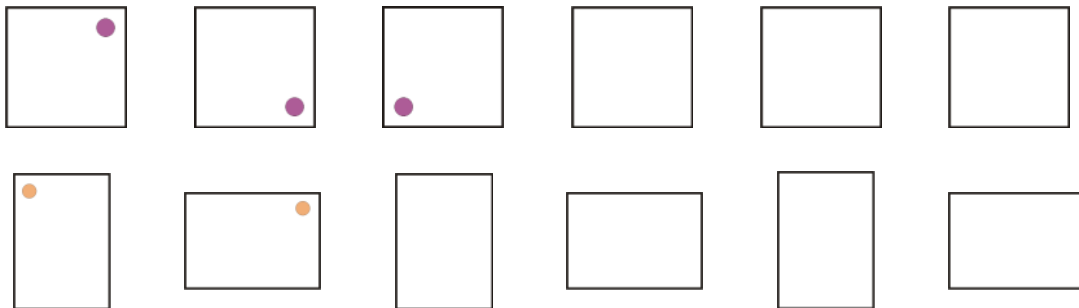
PREVIEW

Subscribe today for a whole
year's access to ALL our
worksheets and videos!



Already a subscriber? Log in to download the full version of this worksheet.

Finish the pattern.

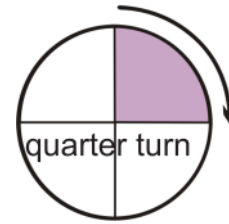



Name _____

ANSWERS

Half and Quarter Turns

Clockwise—picture a clock and its hands turning.



Her
clock
Finis

This



This is a

PREVIEW

Subscribe today for a whole
year's access to ALL our
worksheets and videos!



Already a subscriber? Log in to download the full version of this worksheet.

Finish each pattern; draw the dots on the shapes:

