

NAME: _____


Telling the Time: O'Clock, Half past 3 [A]



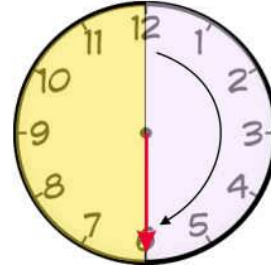
Time words:

half past
o'clock

O'Clock



Half past

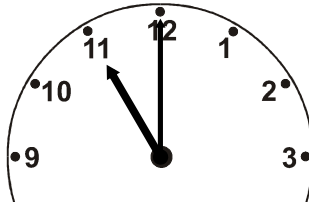


Write the time in words under each clock.


1)



2)



3)



This is a

PREVIEW

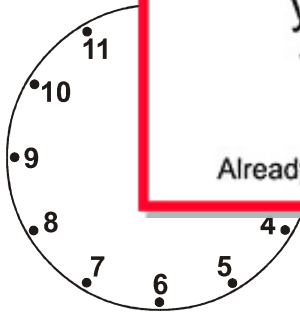
Subscribe today for a whole year's access to ALL our worksheets and videos!

Already a subscriber? Log in to download the full version of this worksheet.




Draw the

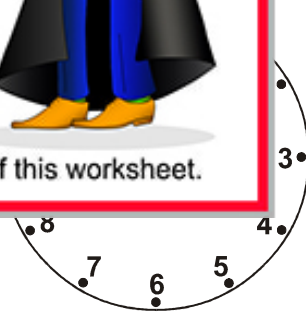
4)



half past 2



10 o'clock



half past 12

Name the day of the week that comes after each:

Friday _____

Sunday _____

Wednesday _____

Tuesday _____

NAME: _____


Telling the Time: O'Clock, Half past 3 [B]



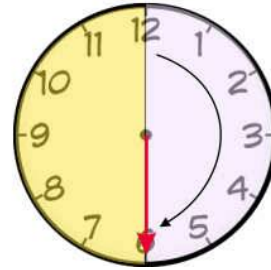
Time words:

half past
o'clock

O'Clock



Half past




Write the time in words under each clock.


1)



2)



3)



This is a

PREVIEW

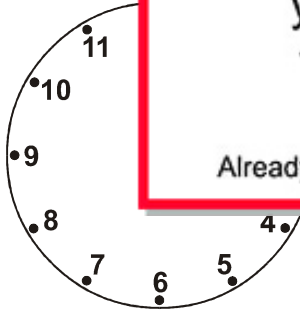
Subscribe today for a whole
year's access to ALL our
worksheets and videos!

Already a subscriber? Log in to download the full version of this worksheet.

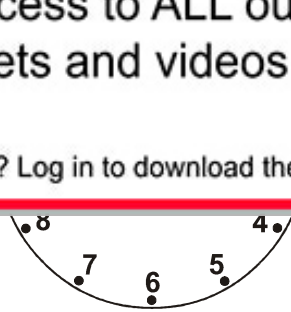


Draw the

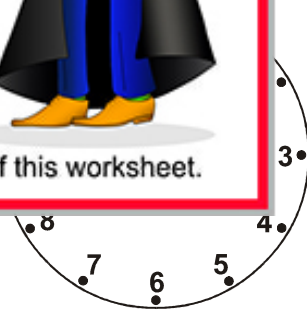
4)



half past 10



half past 3



8 o'clock

Name the day of the week that comes after each:

Tuesday _____

Wednesday _____

Saturday _____

Thursday _____


NAME: _____



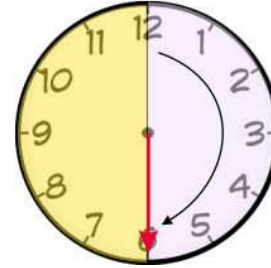
Time words:

half past
o'clock

O'Clock



Half past

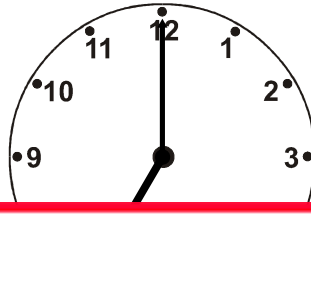


Write the time in words under each clock.


1)



2)



3)



This is a

PREVIEW

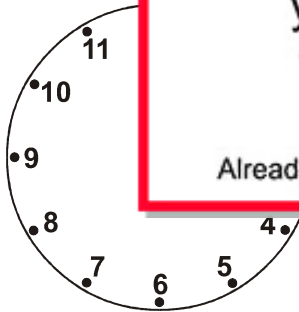
Subscribe today for a whole
year's access to ALL our
worksheets and videos!

Already a subscriber? Log in to download the full version of this worksheet.

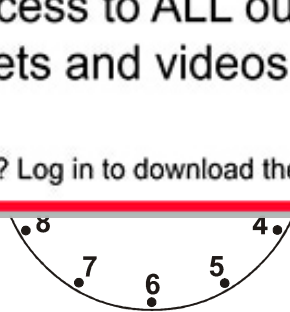


Draw the

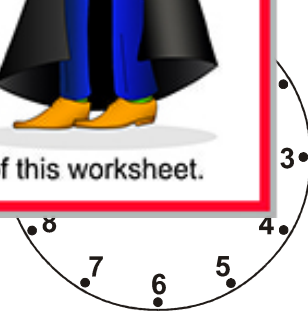
4)



half past 9



half past 1



3 o'clock

Name the day of the week that comes after each:

Monday _____

Thursday _____

Saturday _____

Wednesday _____