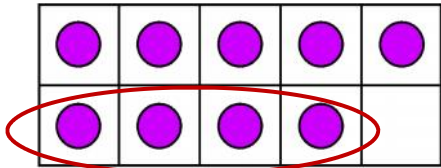
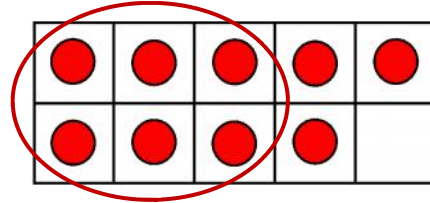


8 dots. Some are circled. How many are left?



9



Write the numbers that together make 9.

and

and



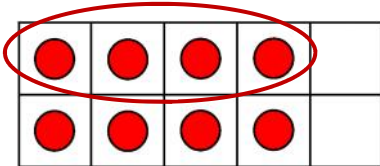
This is a
PREVIEW

Subscribe today for a whole
year's access to ALL our
worksheets and videos!

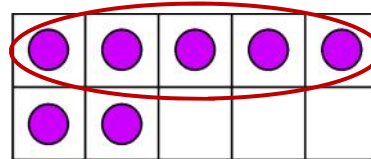


Already a subscriber? Log in to download the full version of this worksheet.

These



8



7

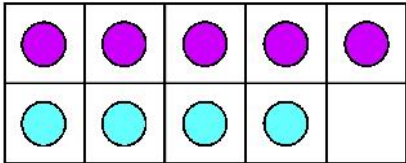
Write the numbers that together make 8.

and

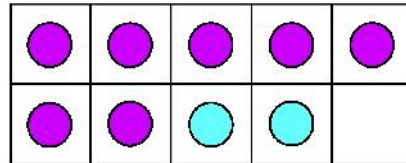
Write the numbers that together make 7.

and

Here are three ten frames for 9.



9



Write the numbers that together make 9.

and

and



This is a
PREVIEW

Subscribe today for a whole
year's access to ALL our
worksheets and videos!

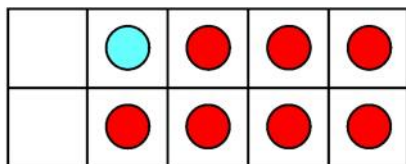


Already a subscriber? Log in to download the full version of this worksheet.

Turn the

and

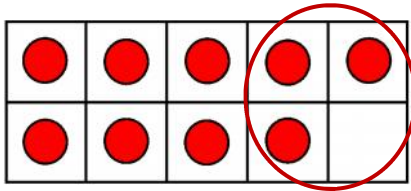
and



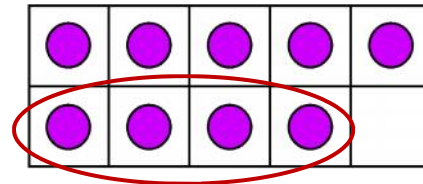
and



Here are three ten frames for 8



9



Write the numbers that together make 8.

and

and



This is a


PREVIEW

Subscribe today for a whole
year's access to ALL our
worksheets and videos!



Already a subscriber? Log in to download the full version of this worksheet.

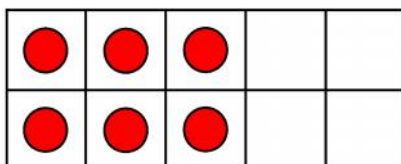
Add mo



Write the numbers that together make 8.

and

and



and