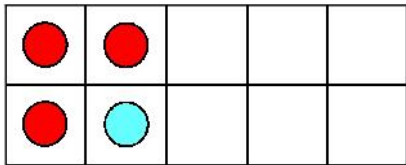
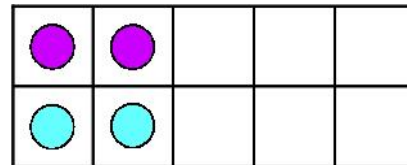


Here are two ten frames for 4.



4



Write the numbers that together make 4.

and

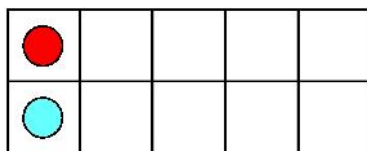
and

Here are two ten frames for 5.



Write th

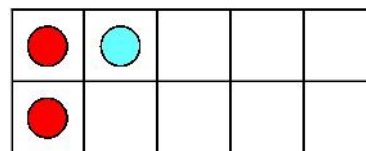
These



2

Write the numbers that together make 2.

and



3

Write the numbers that together make 3.

and

PROFESSOR PETE'S
CLASSROOM

This is a

PREVIEW

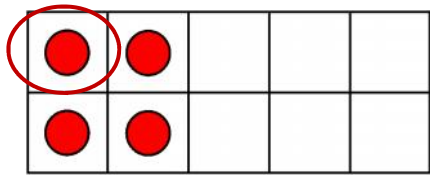
Subscribe today for a whole year's access to ALL our worksheets and videos!



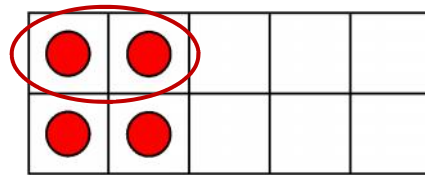
Already a subscriber? Log in to download the full version of this worksheet.



4 dots. Some are circled. How many are left?



4



Write the numbers that together make 4.

and

and

Here are two ten frames for 5.



Write th



This is a

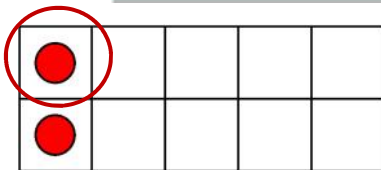
PREVIEW

Subscribe today for a whole
year's access to ALL our
worksheets and videos!



Already a subscriber? Log in to download the full version of this worksheet.

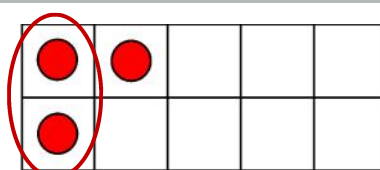
These



2

Write the numbers that together make 2.

and



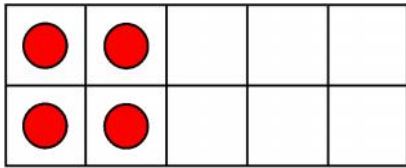
3

Write the numbers that together make 3.

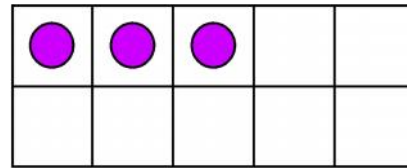
and



Add more dots to make 5. Write the numbers that together make 5.



5



Write the numbers that together make 5.

and

and

Add more dots to make 4. Write the numbers that together make 4.



This is a

PREVIEW

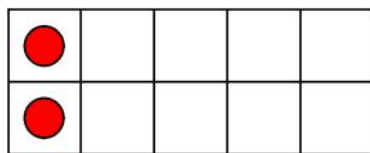
Subscribe today for a whole year's access to ALL our worksheets and videos!



Already a subscriber? Log in to download the full version of this worksheet.

Write the

Add mo



3

Write the numbers that together make 3.

and



2

Write the numbers that together make 2.

and