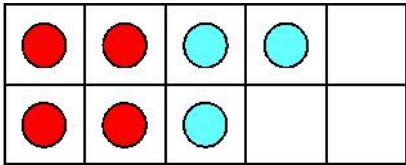
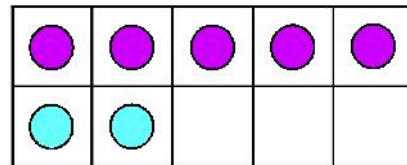


Here are three ten frames for 7.



7



Write the numbers that together make 6

and

and




This is a
PREVIEW

Subscribe today for a whole
year's access to ALL our
worksheets and videos!



Already a subscriber? Log in to download the full version of this worksheet.

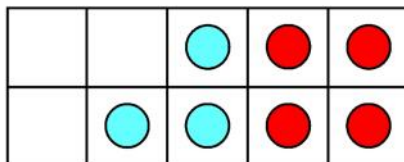
Turn the



and

and

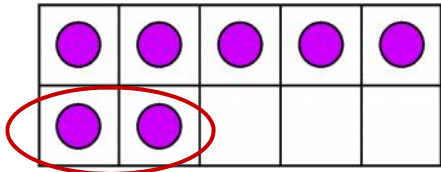
This one stays the same even when turned around.



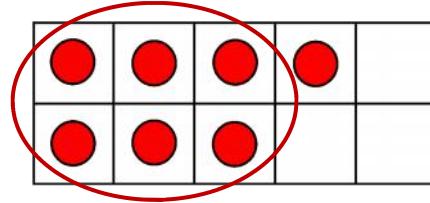
and



7 dots. Some are circled. How many are left?



7



Write the numbers that together make 6.

and

and

Here are two ten frames for 4



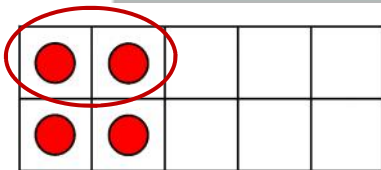
Write th


 This is a
PREVIEW
 Subscribe today for a whole
 year's access to ALL our
 worksheets and videos!

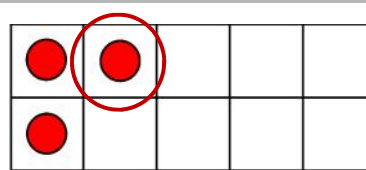


Already a subscriber? Log in to download the full version of this worksheet.

These



4



3

Write the numbers that together make 4.

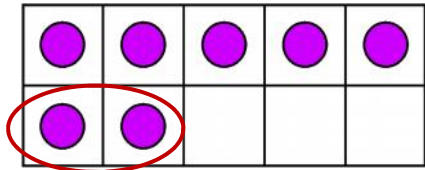
and

Write the numbers that together make 3.

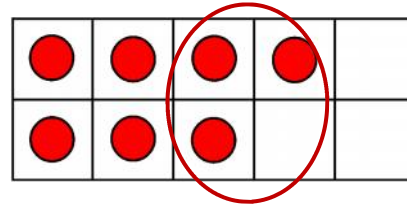
and



Here are three ten frames for 7.



7



Write the numbers that together make 7.

	and	
--	-----	--

	and	
--	-----	--




This is a
PREVIEW

Subscribe today for a whole
year's access to ALL our
worksheets and videos!



Already a subscriber? Log in to download the full version of this worksheet.

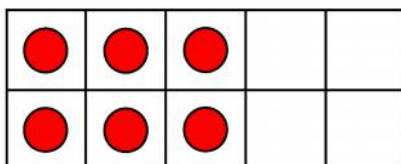
Add mo



Write the numbers that together make 7.

	and	
--	-----	--

	and	
--	-----	--



	and	
--	-----	--