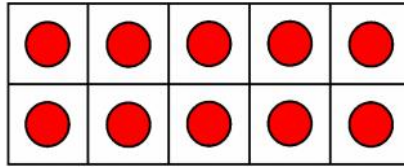


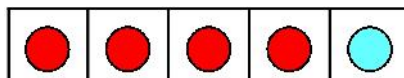
Here is a full 10 frame. Write the number and word.



10

ten

Here is 10 again. Write the numbers that together make the 10.



10

PROFESSOR PETE'S  
CLASSROOM

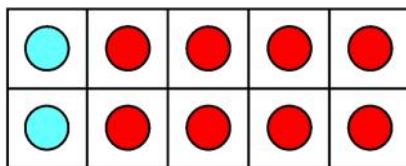
This is a  
**PREVIEW**

Subscribe today for a whole  
year's access to ALL our  
worksheets and videos!

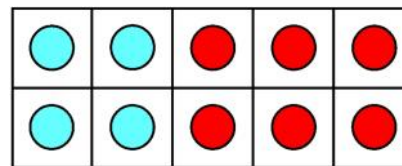


Already a subscriber? Log in to download the full version of this worksheet.

Flip them around and write the pair that make 10.

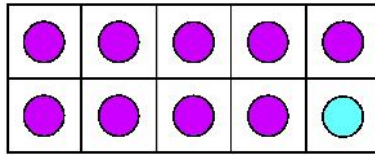


and



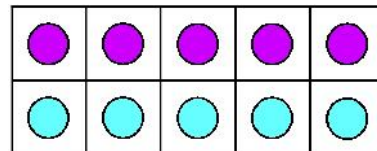
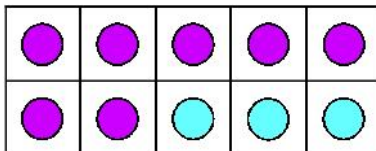
and

Write the numbers that together make the 10.



10

and



PROFESSOR PETE'S CLASSROOM

This is a

**PREVIEW**

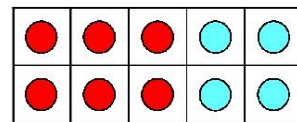
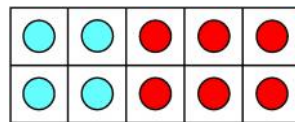
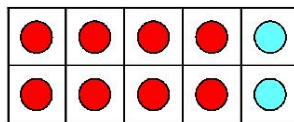
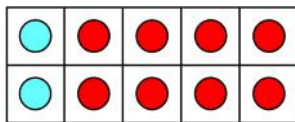
Subscribe today for a whole year's access to ALL our worksheets and videos!



Already a subscriber? Log in to download the full version of this worksheet.

Flip the

Revise



Write the pairs and their turnarounds.

and

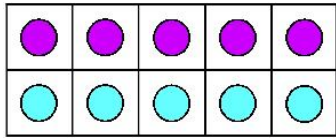
and

and

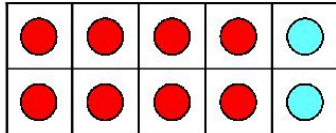
and



Write the pairs to 10 and their turnaround pairs from these ten frames.



and



and





This is a

## PREVIEW

Subscribe today for a whole year's access to ALL our worksheets and videos!



Already a subscriber? Log in to download the full version of this worksheet.

and

and

and

and

and