


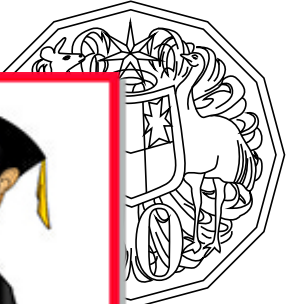





Answer these questions:

Colour them silver or gold to match their colour.

<p>Value of the coin: _____ What animal is shown? _____</p> 	<p>Value of the coin: _____ What animal is shown? _____</p> 
<p>Value of the coin: _____ What animal is shown? _____</p> 	<p>Value of the coin: _____ What animal is shown? _____</p> 
<p>Value of the coin: _____ What animal is shown? _____</p> 	<p>Value of the coin: _____ What animal is shown? _____</p> 
 <p>Who is on the "head" side of our coins? _____</p> <p>Why is she on every Australian coin? _____</p>	<p>List all the coin values from smallest to greatest value: _____ _____</p> <p>Where are the 1c and 2c coins? _____ _____</p> <p>Which coin is the largest in size? _____</p> <p>Which coin is the smallest in size? _____</p> <p>Which coins are gold in colour? _____</p> <p>Which coins are silver in colour? _____</p>

PROFESSOR PETE'S
CLASSROOM

This is a

PREVIEW

Subscribe today for a whole year's access to ALL our worksheets and videos!




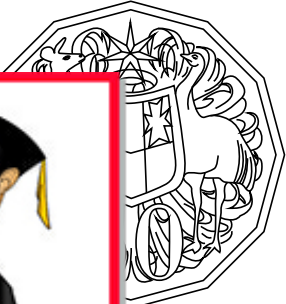





Already a subscriber? Log in to download the full version of this worksheet.

ANSWERS

Answer these questions:

Colour them silver or gold to match their colour.

<p>Value of the coin: <u>5c</u></p> <p>What animal is shown? <u>echidna</u></p> 	<p>Value of the coin: <u>10c</u></p> <p>What animal is shown? <u>lyre bird</u></p> 
<p>Value of the coin: <u>1c</u></p> <p>What animal is shown? <u>platypus</u></p> 	<p>Value of the coin: <u>20c</u></p> <p>What animal is shown? <u>kangaroos</u></p> 
<p>Value of the coin: <u>1c</u></p> <p>What animal is shown? <u>platypus</u></p> 	<p>Value of the coin: <u>2</u></p> <p>What animal is shown? <u>aboriginal elder</u></p> 
 <p>Who is on the "head" side of our coins? <u>Queen Elizabeth II</u></p> <p>Why is she on every Australian coin? <u>She is the Queen of Australia.</u></p>	<p>List all the coin values from smallest to greatest value: <u>5c 10c 20c 50c \$1 \$2</u></p> <p>Where are the 1c and 2c coins? <u>no longer in circulation since 1992</u></p> <p>Which coin is the largest in size? <u>50c</u></p> <p>Which coin is the smallest in size? <u>5c</u></p> <p>Which coins are gold in colour? <u>\$1 \$2</u></p> <p>Which coins are silver in colour? <u>5c 10c 20c 50c</u></p>

PROFESSOR PETE'S CLASSROOM

This is a **PREVIEW**

Subscribe today for a whole year's access to ALL our worksheets and videos!



Already a subscriber? Log in to download the full version of this worksheet.