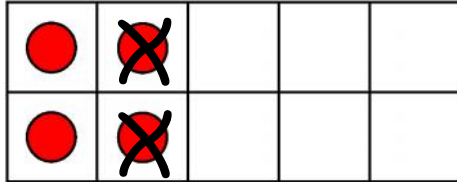



Use the ten frame to help you find two less than this number.
Cross off two dots. Make sure you cross off the dot that still leaves a pattern that shows a number.



Two less than 4 is

2





This is a

PREVIEW

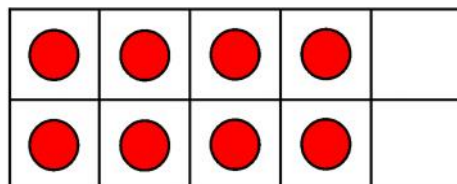
Subscribe today for a whole
year's access to ALL our
worksheets and videos!



Already a subscriber? Log in to download the full version of this worksheet.



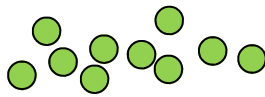
Two less than 2 is



Two less than 8 is



Use your ten frame and counters to help you find one less than each of the numbers.



Two less than 3 is

Two

PROFESSOR PETE'S
CLASSROOM

This is a

PREVIEW

Subscribe today for a whole year's access to ALL our worksheets and videos!

Already a subscriber? Log in to download the full version of this worksheet.

Two

Two

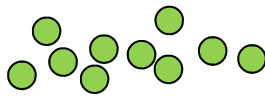
Two less than 1 is

Two less than 9 is

Two less than 5 is



Use your ten frame and counters to help you find one less than each of the numbers.



One less than 6 is

Two

0

One


 This is a
PREVIEW
 Subscribe today for a whole
 year's access to ALL our
 worksheets and videos!
 Already a subscriber? Log in to download the full version of this worksheet.



One less than 5 is

Two less than 3 is

One less than 7 is