


Regrouping Ones Blocks into Tenths

TENTHS 14

- 1 Write these numbers regrouping each one into 10 tenths as you go down the page.



- a $3.7 = \underline{3}$ ones $\underline{7}$ tenths b $4.3 = \underline{4}$ ones ___ tenths
 $3.7 = \underline{2}$ ones $\underline{17}$ tenths $4.3 = \underline{3}$ ones ___ tenths
 $3.7 = \underline{\quad}$ one ___ tenths $4.3 = \underline{\quad}$ ones ___ tenths
 $3.7 = \underline{\quad}$ ones ___ tenths $4.3 = \underline{\quad}$ one ___ tenths
 c $3.9 = \underline{3}$ ones ___ tenths $4.3 = \underline{\quad}$ ones ___ tenths
 $2.0 = \underline{\quad}$ ones ___ tenths d $2.1 = \underline{2}$ ones ___ tenths

2



This is a

PREVIEW

Subscribe today for a whole year's access to ALL our worksheets and videos!



Already a subscriber? Log in to download the full version of this worksheet.


- 3 Put a tick or cross beside each number sentence to show if it is right or wrong.

- a $4.7 = 3$ ones 17 tenths b $5.1 = 4$ ones 15 tenths
 c $5.9 = 5$ ones 59 tenths d $3.8 = 2$ ones 18 tenths
 e $8.1 = 5$ ones 31 tenths f $8.0 = 4$ ones 40 tenths
 g $6.3 = 2$ ones 33 tenths h $5 = 3$ ones 20 tenths
 i $3.6 = 2$ ones 16 tenths j $4 = 4$ ones 10 tenths
 k $0.4 = 4$ ones 0 tenths l $4.3 = 0$ ones 43 tenths

Regrouping Tenths into Ones

TENTHS 15

1 Complete this table. Regroup the tenths into ones. The first one has been done for you.



Ones	tenths	=	Ones	tenths	=	Total
e.g. 3	16	=	4	6	=	4.6
5	22	=			=	
3	47	=			=	
0	24	=			=	

2



This is a

PREVIEW


Subscribe today for a whole year's access to ALL our worksheets and videos!



Already a subscriber? Log in to download the full version of this worksheet.

3

g 0 ones 14 tenths = 0.14



3 Complete these.


a 61 tenths = 6 ones 1 tenth = 6.1

b 55 tenths = _____ ones _____ tenths = _____

c 87 tenths = _____ ones _____ tenths = _____

d 26 tenths = _____ ones _____ tenths = _____

e	102 tenths	=	_____	ones	_____	tenths	=	_____
f	494 tenths	=	_____	ones	_____	tenths	=	_____
g	256 tenths	=	_____	ones	_____	tenths	=	_____




ANSWERS

Name:

Regrouping Ones Blocks into Tenths

TENTHS 14


1 Write these numbers regrouping each one into 10 tenths as you go down the page.



- a $3.7 = \underline{3}$ ones $\underline{7}$ tenths b $4.3 = \underline{4}$ ones $\underline{3}$ tenths
- $3.7 = \underline{2}$ ones $\underline{17}$ tenths $4.3 = \underline{3}$ ones $\underline{13}$ tenths
- $3.7 = \underline{1}$ one $\underline{27}$ tenths $4.3 = \underline{2}$ ones $\underline{23}$ tenths
- $3.7 = \underline{0}$ ones $\underline{37}$ tenths $4.3 = \underline{1}$ one $\underline{33}$ tenths
- c $3.9 = \underline{3}$ ones $\underline{9}$ tenths $4.3 = \underline{0}$ ones $\underline{43}$ tenths

$3.9 = \underline{2}$ ones $\underline{19}$ tenths d $3.1 = \underline{2}$ ones $\underline{1}$ tenth


2 Write the



This is a

PREVIEW

Subscribe today for a whole year's access to ALL our worksheets and videos!



Already a subscriber? Log in to download the full version of this worksheet.

up

3 Mark each number sentence that is wrong.

- a $4.7 = 3$ ones 17 tenths b $5.1 = 4$ ones 15 tenths **X**
- c $5.9 = 5$ ones 59 tenths **X** d $3.8 = 2$ ones 18 tenths
- e $8.1 = 5$ ones 31 tenths f $8.0 = 4$ ones 40 tenths
- g $6.3 = 2$ ones 33 tenths **X** h $5 = 3$ ones 20 tenths
- i $3.6 = 2$ ones 16 tenths j $4 = 4$ ones 10 tenths **X**
- k $0.4 = 4$ ones 0 tenths **X** l $4.3 = 0$ ones 43 tenths