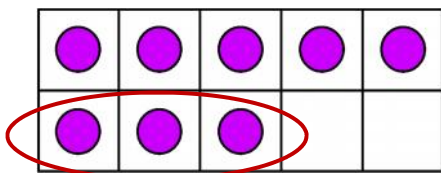
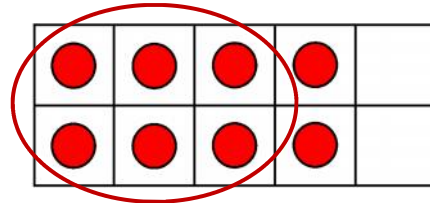


8 dots. Some are circled. How many are left?



8



Write the numbers that together make 8.

and

and

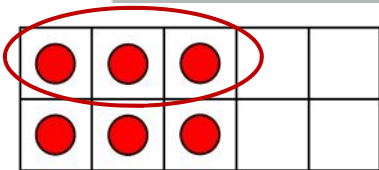


This is a  
**PREVIEW**  
Subscribe today for a whole  
year's access to ALL our  
worksheets and videos!

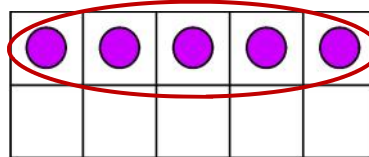


Already a subscriber? Log in to download the full version of this worksheet.

These



6



5

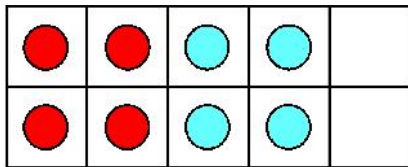
Write the numbers that together make 6.

and

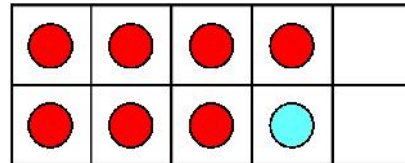
Write the numbers that together make 5.

and

Here are three ten frames for 8.



8



Write the numbers that together make 8.

and

and

PROFESSOR PETE'S  
CLASSROOM

This is a  
**PREVIEW**

Subscribe today for a whole  
year's access to ALL our  
worksheets and videos!

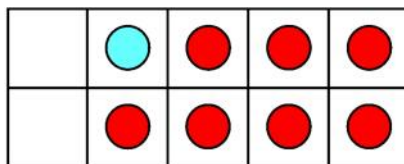


Already a subscriber? Log in to download the full version of this worksheet.

Turn the

and

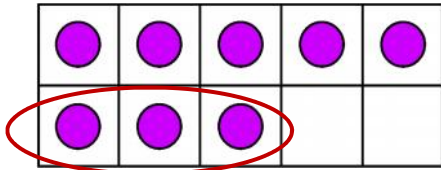
and



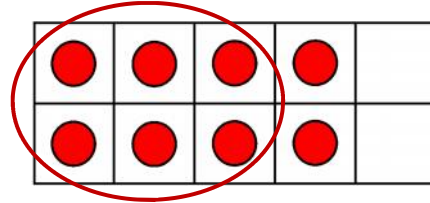
and



8 dots. Some are circled. How many are left?



8



Write the numbers that together make 8.

and



and

Here are two ten frames for 7



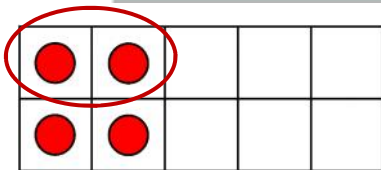
Write th

  
 This is a  
**PREVIEW**  
 Subscribe today for a whole  
 year's access to ALL our  
 worksheets and videos!

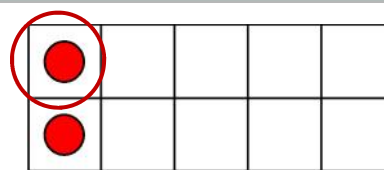


Already a subscriber? Log in to download the full version of this worksheet.

These



6



2

Write the numbers that together make 2.

and

Write the numbers that together make 3.

and