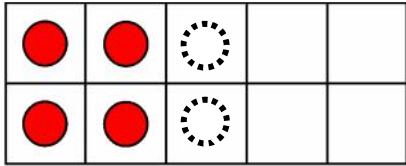


Read the story and draw the 2 coloured counters to show:

There are 4 flowers in a vase. 2 more are added. How many flowers altogether?



4

and

2

is

6


There are 5 cars in a toy box. 1 more cars drives in.
How many in the toy box now?



and

is

There are
How many



This is a


PREVIEW

Subscribe today for a whole
year's access to ALL our
worksheets and videos!



Already a subscriber? Log in to download the full version of this worksheet.

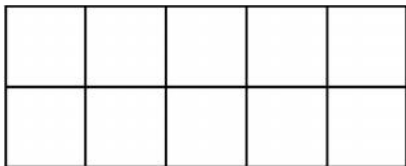
There are
How many



and

is

There are 2 cookies in a jar. 4 more are added.
How many cookies in the jar now?

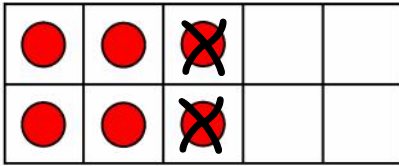


and

is

Read the story and draw the dots then cross some out on to show:

There are 6 cookies in a jar. 2 are eaten. How many cookies are left?



6

take

2

is

4

There are 5 cars in a toy box. 1 drives away.

How many trucks are left?



take

is

There are
How many



This is a


PREVIEW

Subscribe today for a whole
year's access to ALL our
worksheets and videos!



Already a subscriber? Log in to download the full version of this worksheet.

There are
How many

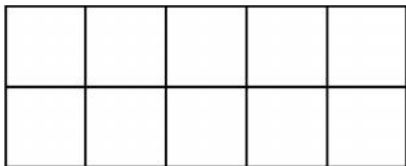


take

is

There are 4 flowers in a vase. 2 flowers died and were thrown out.

How many flowers are left?



take

is



Read the story and draw the 2 coloured counters to show:

There are 5 marbles in a bag. 1 more is added. How many marbles altogether?

| | | | | |
|---|---|---|---|---|
| ● | ● | ● | ● | ● |
| ● | | | | |

| |
|---|
| 6 |
|---|

There are 4 bikes in a garage. 1 more arrives.
How many bikes are in the garage now?

| | | | | |
|--|--|--|--|--|
| | | | | |
| | | | | |

| |
|--|
| |
|--|



This is a

PREVIEW

Subscribe today for a whole
year's access to ALL our
worksheets and videos!



Already a subscriber? Log in to download the full version of this worksheet.

There is
How ma

There a
How ma

| | | | | |
|--|--|--|--|--|
| | | | | |
| | | | | |

| |
|--|
| |
|--|

There are 4 pencils in a case. 1 more pencil is thrown in.
How many are in the pencil case now?

| | | | | |
|--|--|--|--|--|
| | | | | |
| | | | | |

| |
|--|
| |
|--|