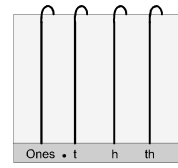
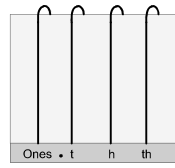
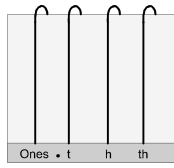
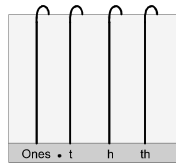
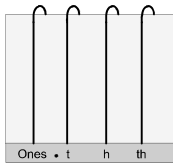


# Using the Abacus

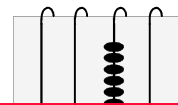
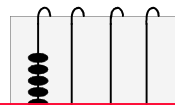
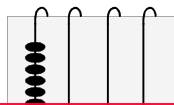
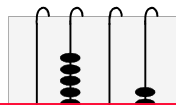
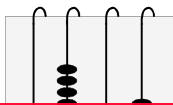
# THOUSANDTHS 14

1 Draw the beads on each abacus to match the numbers.



- a 8.471      b 3.092      c 0.47      d 6.121      e 4.005

2 Write the number shown by each abacus.



3



This is a

## PREVIEW

Subscribe today for a whole year's access to ALL our worksheets and videos!




Already a subscriber? Log in to download the full version of this worksheet.

4

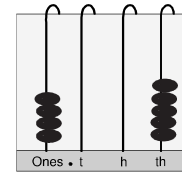
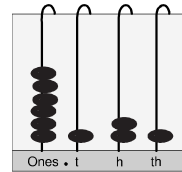
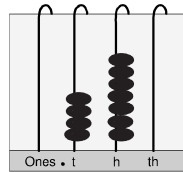
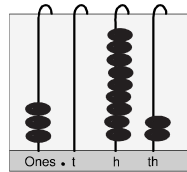
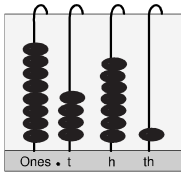
- a 3.245      \_\_\_\_\_      b 4.902      \_\_\_\_\_  
 c 8.12      \_\_\_\_\_      d 2.593      \_\_\_\_\_

5 Put the correct sign ( = , < or > ) in the box.



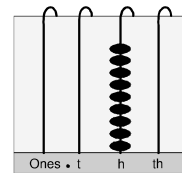
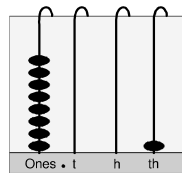
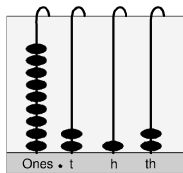
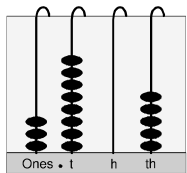
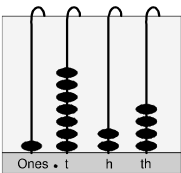
- |   |       |                      |                   |   |       |                      |                 |
|---|-------|----------------------|-------------------|---|-------|----------------------|-----------------|
| a | 6.622 | <input type="text"/> | 6.226             | b | 2.2   | <input type="text"/> | 2.211           |
| c | 9.898 | <input type="text"/> | 9 898 hundredths  | d | 0.333 | <input type="text"/> | 333 thousandths |
| e | 1.717 | <input type="text"/> | 1.177             | f | 8.47  | <input type="text"/> | 847 tenths      |
| g | 5.769 | <input type="text"/> | 5 769 thousandths | h | 2.2   | <input type="text"/> | 220 hundredths  |

1 Draw the beads on each abacus to match the numbers.



- a 8.471      b 3.092      c 0.47      d 6.121      e 4.005

2 Write the number shown by each abacus.



a



This is a

**PREVIEW**

Subscribe today for a whole year's access to ALL our worksheets and videos!



Already a subscriber? Log in to download the full version of this worksheet.

3 Arr

a

8.81

c

6.19

4 Wri  
tho

a

c 8.12

hundredths

d 2.593

ones

427

111

is or

5 Put the correct sign (=, < or >) in the box.

a 6.622  6.226

b 2.2  2.211

c 9.898  9 898 hundredths

d 0.333  333 thousandths

e 1.717  1.177

f 8.47  847 tenths

g 5.769  5 769 thousandths

h 2.2  220 hundredths

