

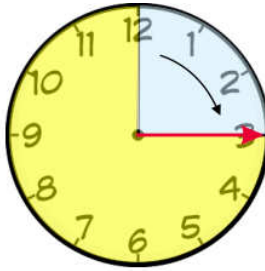
NAME: _____

Telling the Time: Quarter to, Quarter past 4 [A]

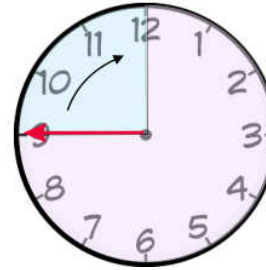


Time words:
quarter past
quarter to
half past
o'clock

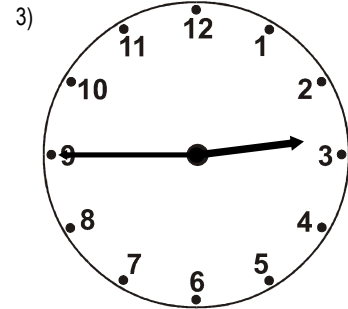
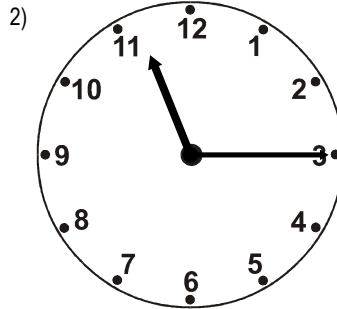
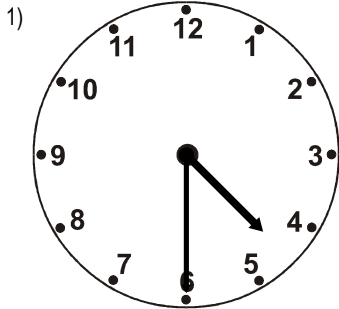
Quarter past
the hour



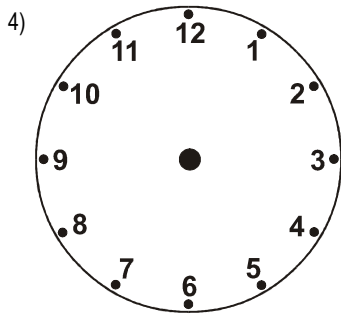
Quarter to
the next hour



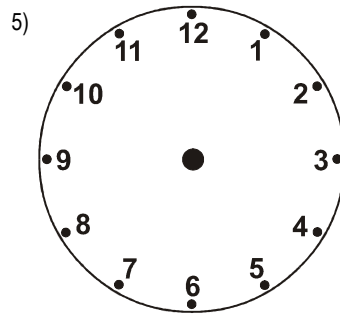
Write the time in words under each clock.



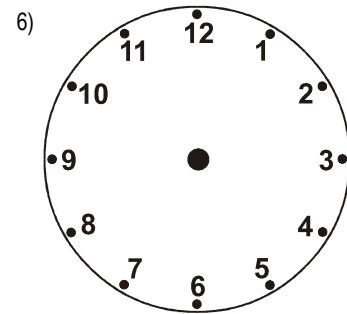
Draw the hands on the clock.



quarter past 2



quarter to 9



half past 12

Name the month that comes after each month:

March _____

July _____

September _____

April _____

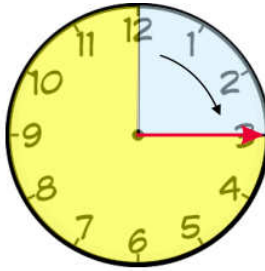
NAME: _____

Telling the Time: Quarter to, Quarter past 4 [B]

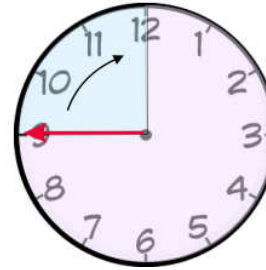


Time words:
quarter past
quarter to
half past
o'clock

Quarter past
the hour




Quarter to
the next hour

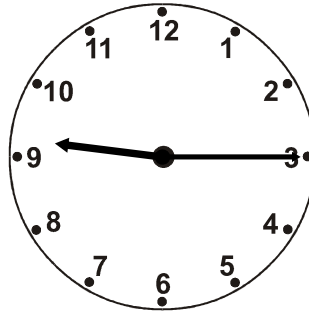


Write the time in words under each clock.


1)



2)

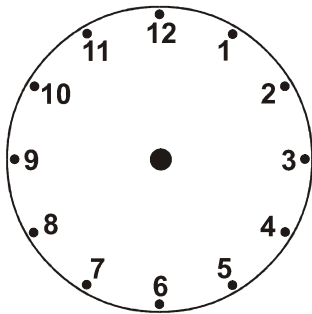


3)



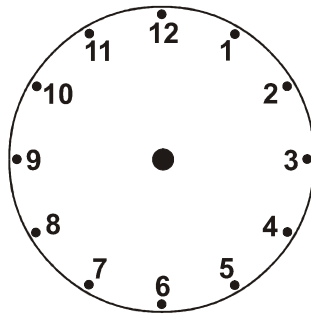
Draw the hands on the clock.

4)



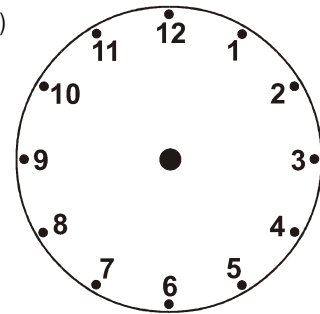
quarter past 11

5)



quarter to 1

6)



half past 5

Name the month that comes after each month:

February _____

June _____

December _____

October _____

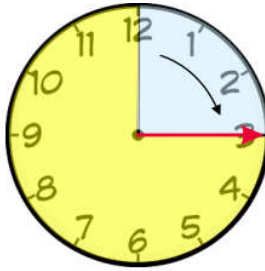
NAME: _____

Telling the Time; Quarter to, Quarter past 4 [C]

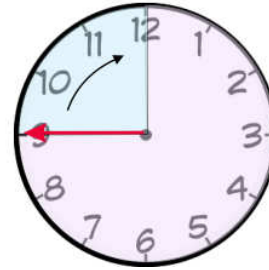


Time words:
quarter past
quarter to
half past
o'clock

Quarter past
the hour




Quarter to
the next hour




Write the time in words under each clock.


1)



2)

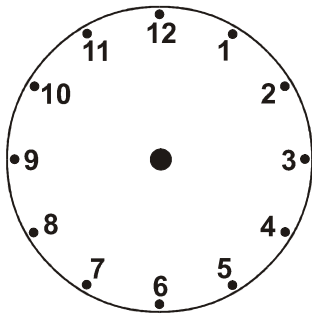


3)



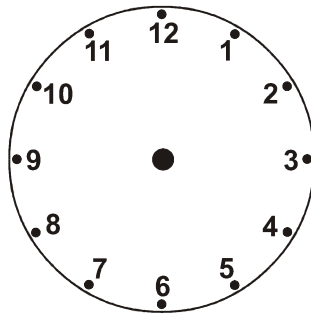
Draw the hands on the clock.

4)



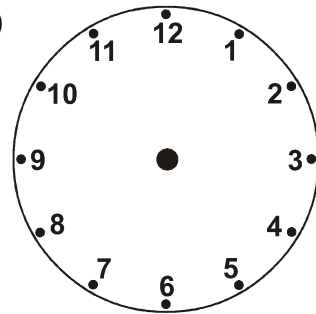
quarter past 12

5)



quarter to 7

6)



5 o'clock

Name the month that comes after each month:

January _____

May _____

November _____

August _____

ANSWERS

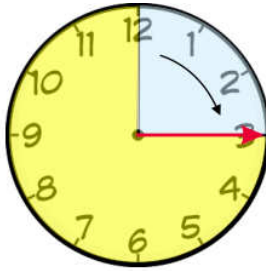
NAME: _____

Telling the Time: Quarter to, Quarter past 4 [A]

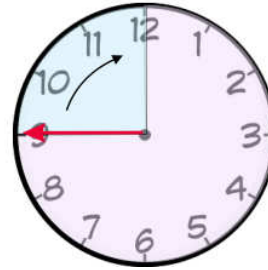


Time words:
quarter past
quarter to
half past
o'clock

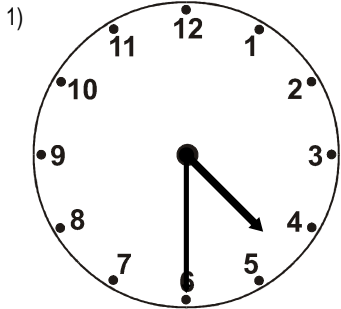
Quarter past
the hour



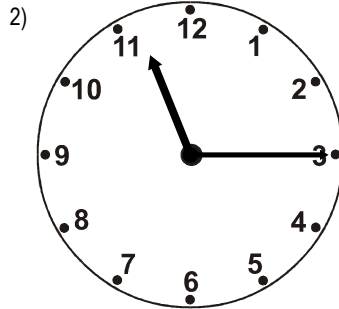
Quarter to
the next hour



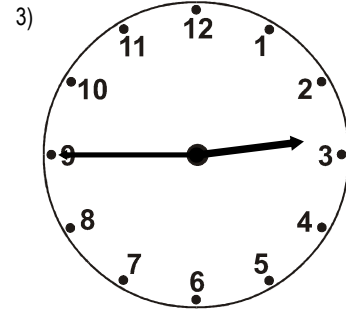
Write the time in words under each clock.



half past 4

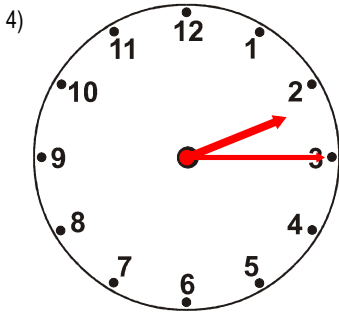


quarter past 11

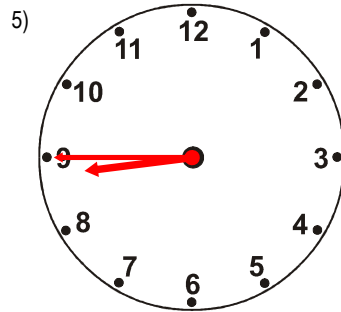


quarter to 3

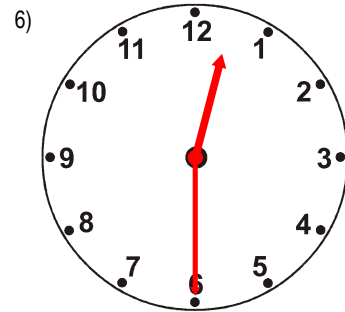
Draw the hands on the clock.



quarter past 2



quarter to 9



half past 12

Name the month that comes after each month:

March April

July August

September October

April May

ANSWERS

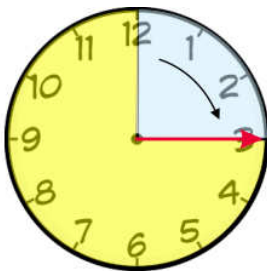
NAME: _____

Telling the Time: Quarter to, Quarter past 4 [B]

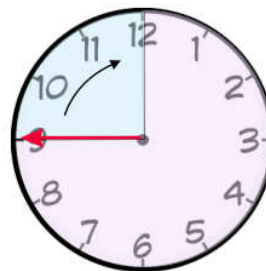


Time words:
quarter past
quarter to
half past
o'clock

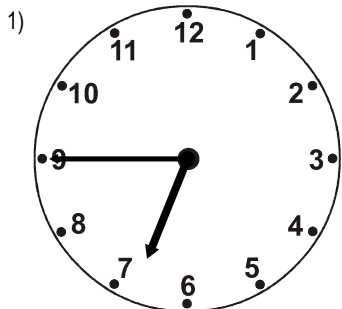
Quarter past
the hour



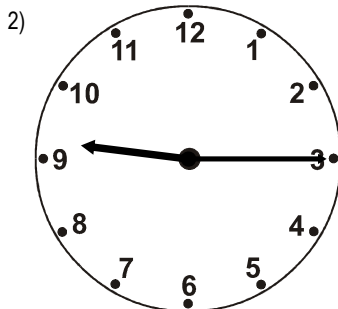
Quarter to
the next hour



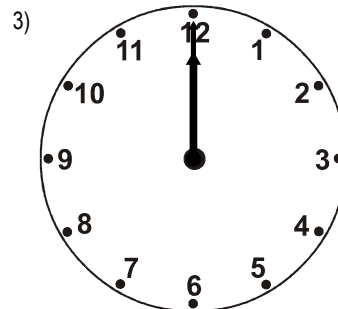
Write the time in words under each clock.



quarter to 7

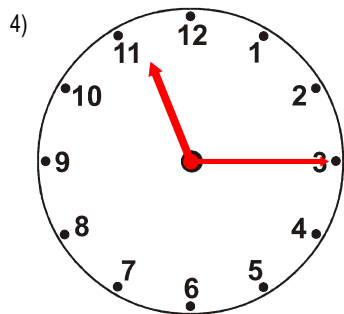


quarter past 9

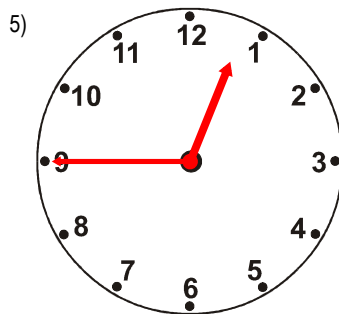


12 o'clock

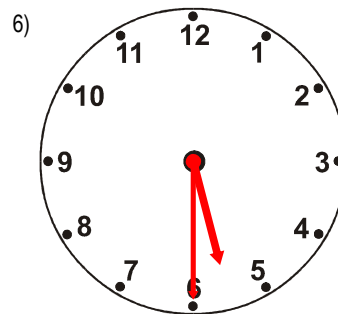
Draw the hands on the clock.



quarter past 11



quarter to 1



half past 5

Name the month that comes after each month:

February

March

June

July

December

January

October

November

ANSWERS

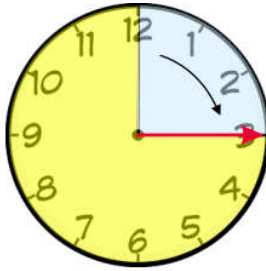
NAME: _____

Telling the Time; Quarter to, Quarter past 4 [C]

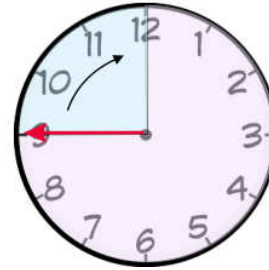


Time words:
quarter past
quarter to
half past
o'clock

Quarter past
the hour




Quarter to
the next hour




Write the time in words under each clock.

1)



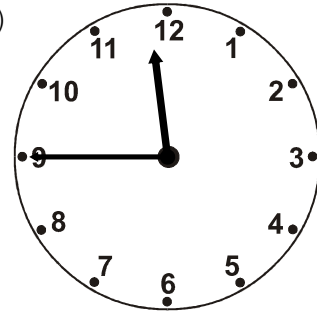
half past 8

2)



quarter past 4

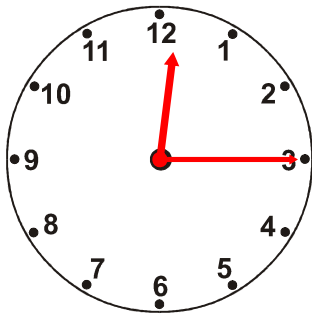
3)



quarter to 12

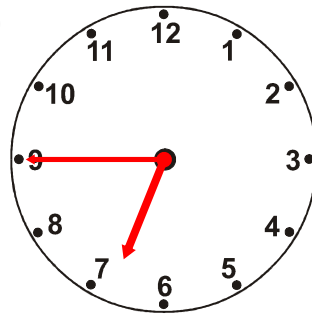
Draw the hands on the clock.

4)



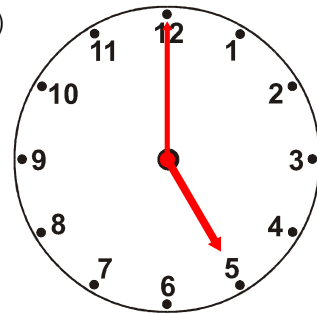
quarter past 12

5)



quarter to 7

6)



5 o'clock

Name the month that comes after each month:

January February

May June

November December

August September