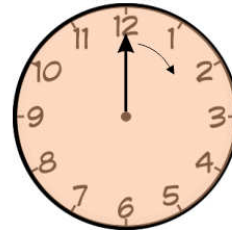
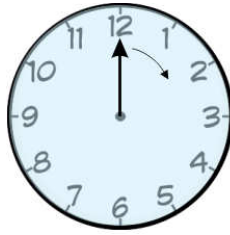


NAME: _____

24 Hour Time, AM or PM: 7 [A]

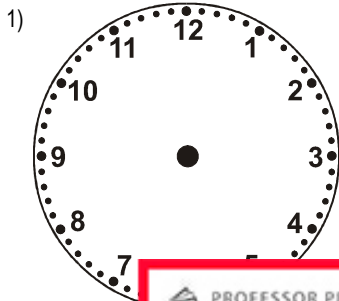


AM 00:01 to 11:59
12:00 midday

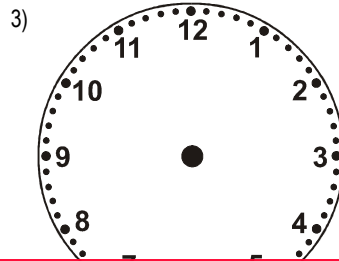


PM 12:01 to 23:59
00:00 midnight

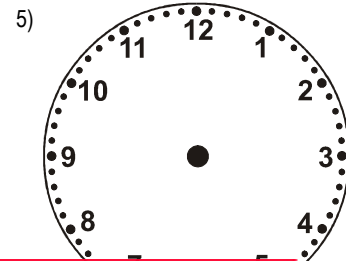
Draw the hands on the clock to match the digital clock. Write whether it is AM or PM.



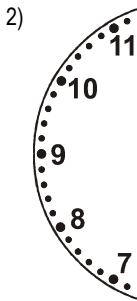
1



10:00



22:00



00:00

PROFESSOR PETE'S CLASSROOM

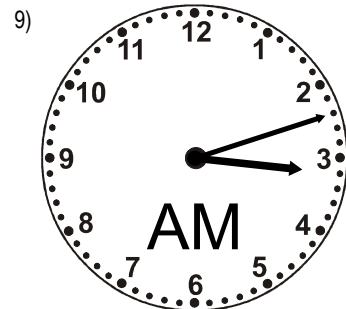


This is a

PREVIEW

Subscribe today for a whole year's access to ALL our worksheets and videos!

Already a subscriber? Log in to download the full version of this worksheet.

Write the digital time below to match the clock. Note this is a 24 hour clock.


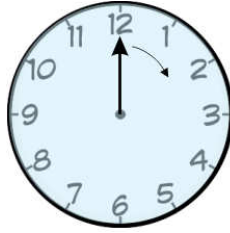


NAME: _____

24 Hour Time, AM or PM: 7 [B]

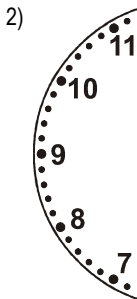




AM 00:01 to 11:59
12:00 midday



PM 12:01 to 23:59
00:00 midnight

Draw the hands on the clock to match the digital clock. Write whether it is AM or PM.



PROFESSOR PETE'S CLASSROOM

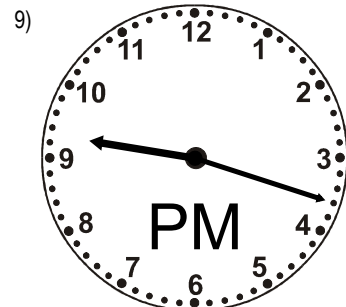
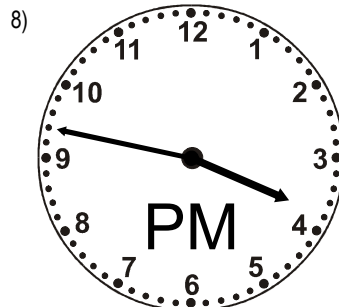
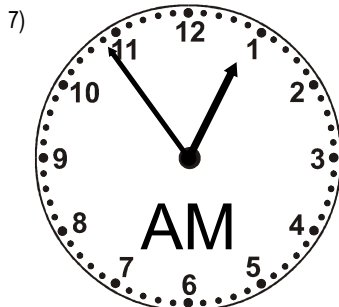
This is a

PREVIEW

Subscribe today for a whole year's access to ALL our worksheets and videos!

Already a subscriber? Log in to download the full version of this worksheet.

Write the digital time below to match the clock. Note this is a 24 hour clock.


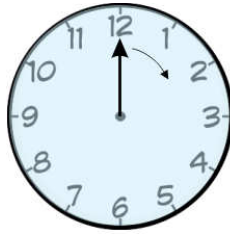


NAME: _____

24 Hour Time, AM or PM: 7 [C]



AM 00:01 to 11:59
12:00 midday






PM 12:01 to 23:59
00:00 midnight

Draw the hands on the clock to match the digital clock. Write whether it is AM or PM.



0



00:00

PROFESSOR PETE'S CLASSROOM

This is a

PREVIEW

Subscribe today for a whole year's access to ALL our worksheets and videos!

Already a subscriber? Log in to download the full version of this worksheet.

10:02

20:20

Write the digital time below to match the clock. Note this is a 24 hour clock.

