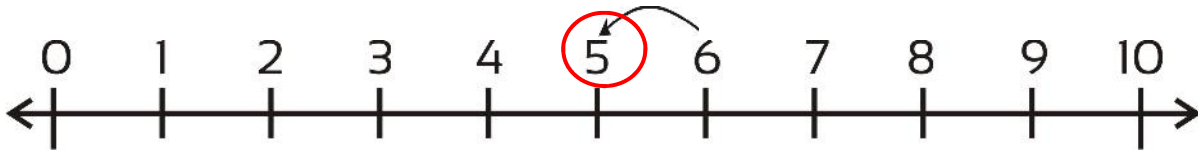


Circle the number one less than these numbers; draw the arrow to show the hop.

Circle the number one before 6



Circle the number one before 9



Circle



This is a

PREVIEW

Subscribe today for a whole
year's access to ALL our
worksheets and videos!



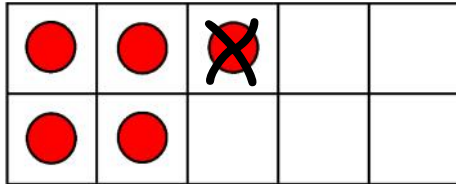
Already a subscriber? Log in to download the full version of this worksheet.

One before 6 is

One before 2 is


One before 3 is

Use the ten frame to help you find one less than this number.
Cross off one dot. Make sure you cross off the dot that still leaves a pattern
that shows a number.



One less than 5 is

4



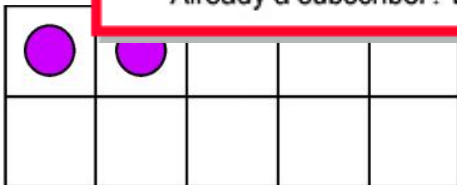

This is a

PREVIEW

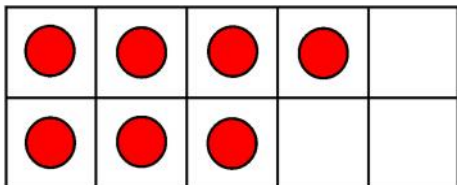
Subscribe today for a whole
year's access to ALL our
worksheets and videos!



Already a subscriber? Log in to download the full version of this worksheet.



One less than 2 is



One less than 7 is