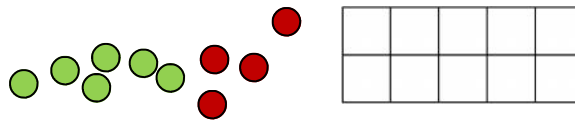


Use your ten frame and coloured counters to help you find the answers.



There are 6 girls and 4 boys.

How many altogether?

There are 3 children in the class.

How many altogether?

There are 2 children in the class.

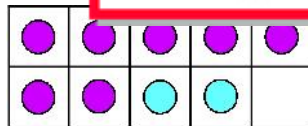
How many altogether?

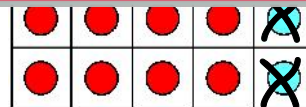
There are 1 child in the class.

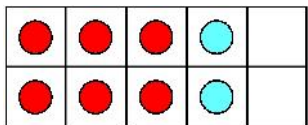
How many altogether?

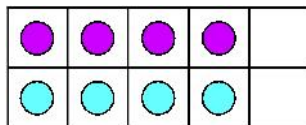
Tell an answer.

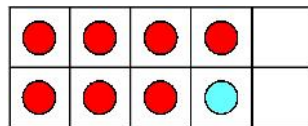
Already a subscriber? Log in to download the full version of this worksheet.

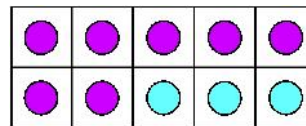














Read the story and draw the 2 coloured counters to show:

There are 5 dolls with black hair and 3 with red hair. How many dolls altogether?

5

and

2

is

7

There are 6 oranges in a box. 3 more are added. How many oranges are there altogether?

and

is

There are
How many

This is a

PREVIEW

Subscribe today for a whole
year's access to ALL our
worksheets and videos!



Already a subscriber? Log in to download the full version of this worksheet.

There are
How many

and

is

There are 4 brownies in a tub. 4 more are added.
How many brownies are there the tub now?

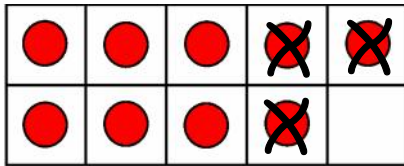
and

is



Read the story and draw the dots then cross some out on to show:

There are 9 bananas on a plate. 3 are eaten. How many cookies are left?



9

take

3

is

6


There are 8 trucks in a toy box. 4 drive away.
How many trucks are left?



take

is

There are
How many



This is a

PREVIEW

Subscribe today for a whole
year's access to ALL our
worksheets and videos!



red.



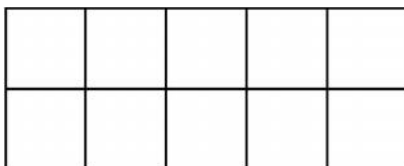
There are
How many



take

is

There are 7 stickers on a page. 4 fall off. How many stickers are left?



take

is