

Addition Thinking Strategies

+1 +2 +3



Count on 1, 2, 3

Count on from 1

0 1



6

This is a

PREVIEW

Subscribe today for a whole
year's access to ALL our
worksheets and videos!

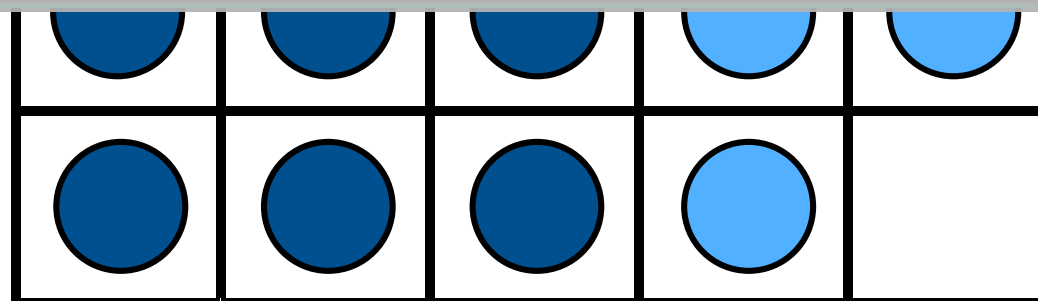
Already a subscriber? Log in to download the full version of this worksheet.



11 12



8



$$6 + 3 = 9$$



Addition Thinking Strategies

Rainbow Facts

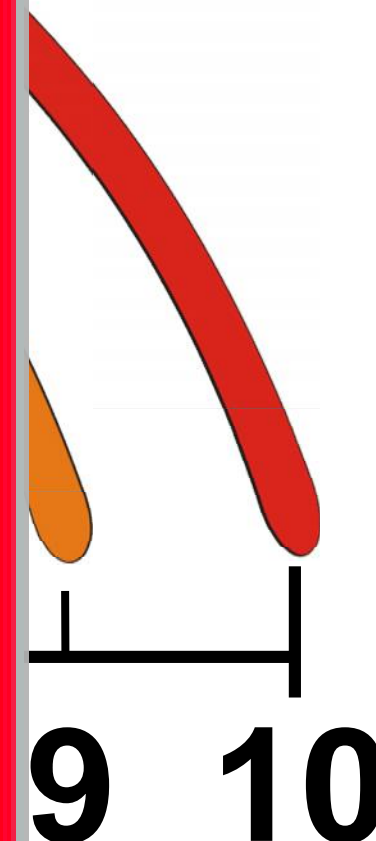
Think: What is the pair to 10?

This is a

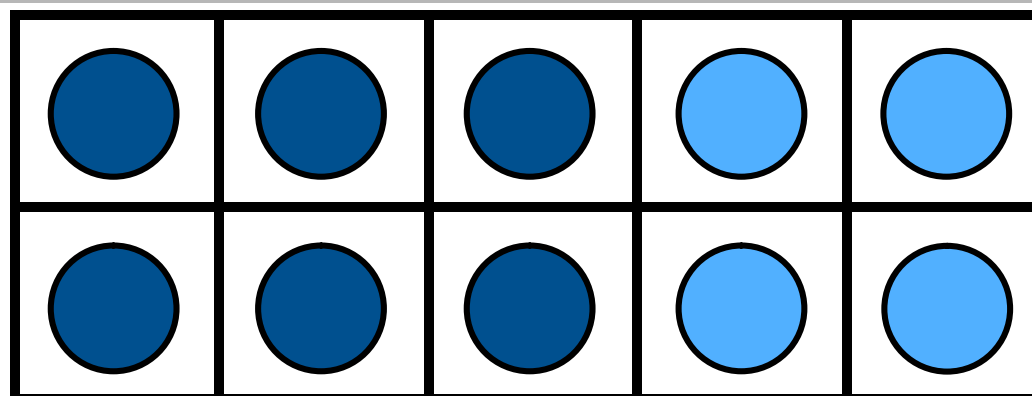
PREVIEW

Subscribe today for a whole
year's access to ALL our
worksheets and videos!

Already a subscriber? Log in to download the full version of this worksheet.



Use a ten frame:



$$6 + 4 = 10$$

Addition Thinking Strategies

Special Cases

+0

Think: +

+10

Think: +



This is a

PREVIEW

Subscribe today for a whole
year's access to ALL our
worksheets and videos!

Already a subscriber? Log in to download the full version of this worksheet.



: 16

