

Numbers Before and After

TENTHS 7

1 Complete these tables.

a	1 tenth less		1 tenth more
		3.2	
		4.6	
		8.0	
		5.9	

b	1 one less		1 one more
		3.2	
		4.6	
		8.0	
		5.9	



This is a

PREVIEW

Subscribe today for a whole year's access to ALL our worksheets and videos!



Already a subscriber? Log in to download the full version of this worksheet.

2

e 4.4, ____, 4.2, ____, ____, ____, 3.8, ____, ____, ____

3 Complete these patterns.


a ____, 5.8, ____, 6, ____, 6.2, ____, 6.4

b ____, 9.1, ____, 7.1, ____, 5.1, ____, 3.1

c 8.5, 7.4, 6.3, ____, ____, ____, ____, ____

d ____, 1.4, 2.5, 3.6, ____, ____, ____, ____

e 2.9, 3.8, 4.7, ____, ____, ____, ____, ____






ANSWERS

Name:

Numbers Before and After

TENTHS 7

1 Complete these tables.

a	1 tenth less		1 tenth more	b	1 one less		1 one more
	3.1	3.2	3.3		2.2	3.2	4.2
	4.5	4.6	4.7		3.6	4.6	5.6
	7.9	8.0	8.1		7	8.0	9
	5.8	5.9	6		4.9	5.9	6.9

2



This is a

PREVIEW

Subscribe today for a whole year's access to ALL our worksheets and videos!



Already a subscriber? Log in to download the full version of this worksheet.

e 4.4, 4.3, 4.2, 4.1, 4, 3.9, 3.8, 3.7, 3.6, 3.5

3 Complete these patterns.

- a 5.7, 5.8, 5.9, 6, 6.1, 6.2, 6.3, 6.4
- b 10.1, 9.1, 8.1, 7.1, 6.1, 5.1, 4.1, 3.1
- c 8.5, 7.4, 6.3, 5.2, 4.1, 3, 1.9, 0.8
- d 0.3, 1.4, 2.5, 3.6, 4.7, 5.8, 6.9, 8
- e 2.9, 3.8, 4.7, 5.6, 6.5, 7.4, 8.3, 9.2

