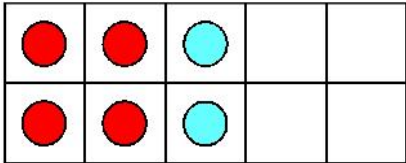
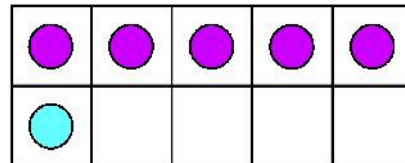


Here are three ten frames for 6.



6



Write the numbers that together make 6.

and

and



This is a
PREVIEW

Subscribe today for a whole
year's access to ALL our
worksheets and videos!



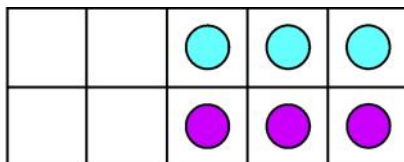
Already a subscriber? Log in to download the full version of this worksheet.

Turn the

and

and

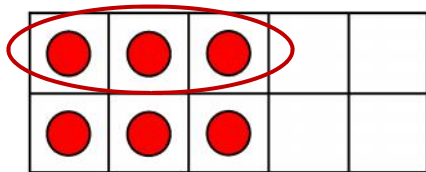
This one stays the same even when turned around.



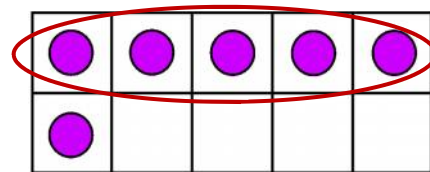
and



6 dots. Some are circled. How many are left?



6



Write the numbers that together make 6.

and

and

Here are two ten frames for 4



This is a

PREVIEW

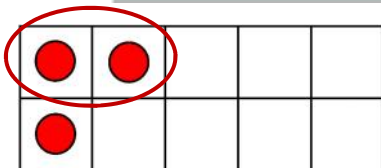
Subscribe today for a whole year's access to ALL our worksheets and videos!



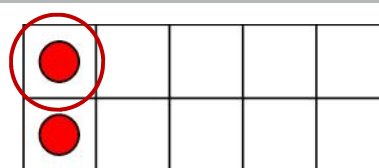
Write th

These

Already a subscriber? Log in to download the full version of this worksheet.



3



2

Write the numbers that together make 3.

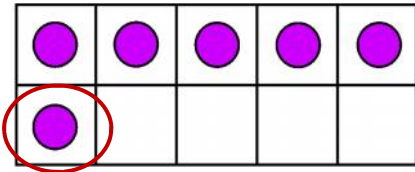
and

Write the numbers that together make 2.

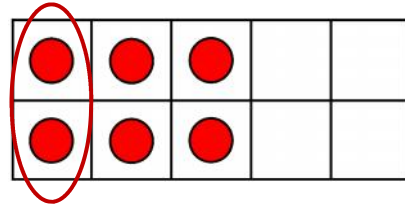
and



Here are three ten frames for 6.



6



Write the numbers that together make 6

	and	
--	-----	--

	and	
--	-----	--




This is a
PREVIEW

Subscribe today for a whole
year's access to ALL our
worksheets and videos!



Already a subscriber? Log in to download the full version of this worksheet.

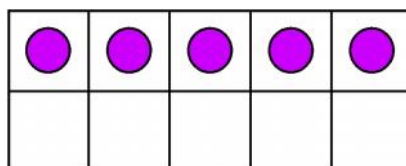
Add mo



Write the numbers that together make 6.

	and	
--	-----	--

	and	
--	-----	--



	and	
--	-----	--