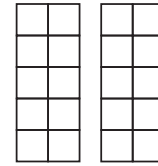
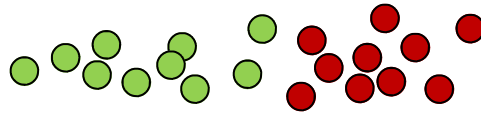




Use your double ten frame and counters to show the numbers below as one ten and some ones. Write the matching parts.

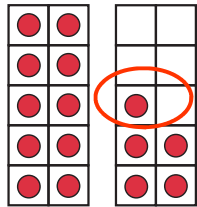


<div style="border: 1px solid black; padding: 5px; width: fit-content; margin: 0 auto;">18</div> <hr style="width: 80%; margin: 10px auto;"/>	<div style="border: 1px solid black; width: 60px; height: 40px; margin: 0 auto;"></div> <div style="text-align: center; margin-top: 10px;"> <u>fourteen</u> </div>
<div style="border: 1px solid black; width: 60px; height: 40px; margin: 0 auto;"></div> <div style="text-align: center; margin-top: 10px;"> <u>sixteen</u> </div>	<div style="border: 1px solid black; padding: 5px; width: fit-content; margin: 0 auto;">12</div> <hr style="width: 80%; margin: 10px auto;"/>
<div style="border: 1px solid black; padding: 5px; width: fit-content; margin: 0 auto;">13</div> <hr style="width: 80%; margin: 10px auto;"/>	<div style="border: 1px solid black; width: 60px; height: 40px; margin: 0 auto;"></div> <div style="text-align: center; margin-top: 10px;"> <u>fifteen</u> </div>
<div style="border: 1px solid black; width: 60px; height: 40px; margin: 0 auto;"></div> <div style="text-align: center; margin-top: 10px;"> <u>eleven</u> </div>	<div style="border: 1px solid black; padding: 5px; width: fit-content; margin: 0 auto;">20</div> <hr style="width: 80%; margin: 10px auto;"/>

Write whether the number is **odd** or **even**.

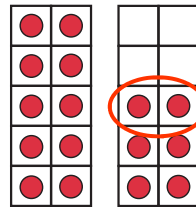
Fill in the dots or numbers to help you.

Circle the last dot or dots. Check if there is a pair or one on its own.



odd

15



even

16

Circle the last dots. Write whether the number is **odd** or **even**.

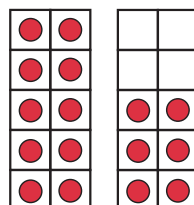
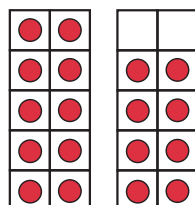
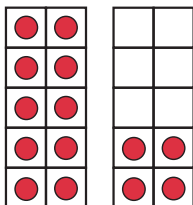
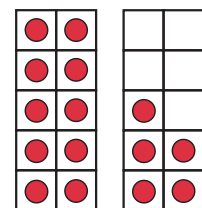
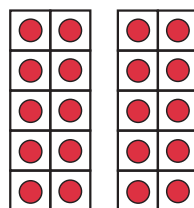
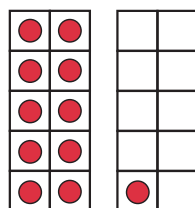
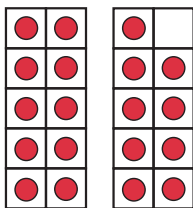
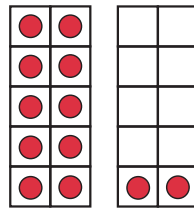
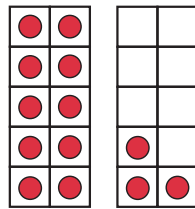
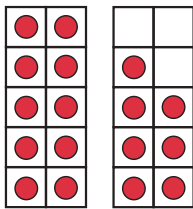
 _____ <input type="text"/>	 _____ <input type="text"/>
 _____ <input type="text"/>	 _____ <input type="text"/>
 _____ <input type="text"/>	 _____ <input type="text"/>
 _____ <input type="text"/>	 _____ <input type="text"/>



Cut and sort the numbers into odd and even numbers.

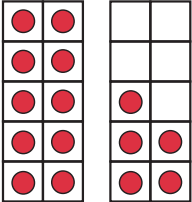
Paste the **even** numbers here.

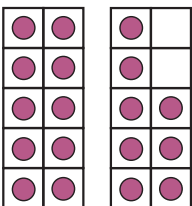
Paste the **odd** numbers here.

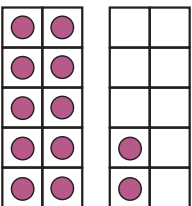


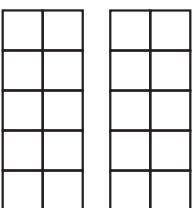


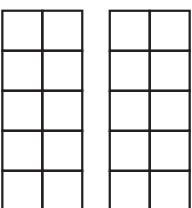
Write the number as ten and how some ones.

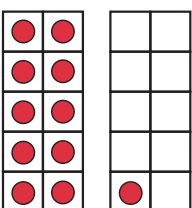
15  is 10 and _____

 is 10 and _____

 is 10 and _____

19  is 10 and _____

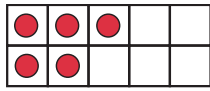
13  is 10 and _____

 is 10 and _____



Write whether the number is **odd** or **even**.

Fill in the dots or numbers to help you.



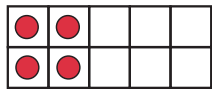
5


odd



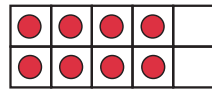
2

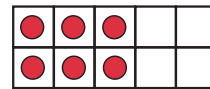
even







2








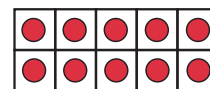
1



7



3





5

